


¿QUÉ HAY EN EL REGALO? (J)

¿Qué número hay en cada regalo?

$40 \div 8 =$ 

$9 \div 1 =$ 

$10 \div 2 =$ 

$64 \div 8 =$ 

$20 \div 2 =$ 

$63 \div$  $= 9$


$9 \div$  $= 1$


$25 \div$  $= 5$

$35 \div$  $= 7$


$32 \div$  $= 8$

$$  $\div 6 = 7$

$$  $\div 9 = 1$

$$  $\div 3 = 10$

$$  $\div 8 = 1$


$$  $\div 1 = 5$

$45 \div 5 =$ 

$28 \div 7 =$ 

$4 \div 4 =$ 

$20 \div 5 =$ 

$18 \div 3 =$ 

$15 \div$  $= 5$


$3 \div$  $= 1$

$63 \div$  $= 7$


$6 \div$  $= 1$


$30 \div$  $= 10$

$$  $\div 6 = 6$


$$  $\div 9 = 3$


$$  $\div 7 = 3$

$$  $\div 3 = 9$


$$  $\div 8 = 5$

$16 \div 2 =$ 

$21 \div 3 =$ 

$6 \div 3 =$ 

$48 \div 8 =$ 

$6 \div 1 =$ 

$32 \div$  $= 4$


$45 \div$  $= 5$


$70 \div$  $= 7$


$80 \div$  $= 8$


$80 \div$  $= 10$

$$  $\div 9 = 8$

$$  $\div 1 = 2$

$$  $\div 9 = 10$

$$  $\div 4 = 9$

$$  $\div 6 = 6$