




¿QUÉ HAY EN EL REGALO? (C)


¿Qué número hay en cada regalo?

$56 \div 7 =$ 

$50 \div 10 =$ 

$54 \div 9 =$ 

$27 \div 9 =$ 

$10 \div 10 =$ 

$33 \div$  $= 11$


$35 \div$  $= 5$


$120 \div$  $= 10$

$48 \div$  $= 6$


$8 \div$  $= 1$


$$  $\div 7 = 5$

$$  $\div 12 = 5$


$$  $\div 11 = 4$


$$  $\div 5 = 3$

$$  $\div 2 = 10$

$5 \div 1 =$ 

$32 \div 8 =$ 

$24 \div 3 =$ 

$1 \div 1 =$ 

$9 \div 3 =$ 

$42 \div$  $= 7$


$8 \div$  $= 1$


$10 \div$  $= 5$


$81 \div$  $= 9$


$60 \div$  $= 10$

$$  $\div 1 = 10$

$$  $\div 7 = 8$


$$  $\div 5 = 8$

$$  $\div 5 = 4$

$$  $\div 11 = 9$

$2 \div 2 =$ 

$2 \div 2 =$ 

$80 \div 10 =$ 

$24 \div 6 =$ 

$56 \div 8 =$ 

$66 \div$  $= 6$


$7 \div$  $= 1$


$18 \div$  $= 3$


$10 \div$  $= 1$


$90 \div$  $= 10$

$$  $\div 8 = 12$

$$  $\div 2 = 4$

$$  $\div 1 = 1$

$$  $\div 1 = 5$

$$  $\div 6 = 8$