





¿QUÉ HAY EN EL REGALO? (I)

¿Qué número hay en cada regalo?

$70 \div 10 =$ 

$3 \div 1 =$ 

$3 \div 1 =$ 

$132 \div 11 =$ 

$60 \div 6 =$ 

$12 \div$  $= 4$

$12 \div$  $= 1$

$45 \div$  $= 9$


$60 \div$  $= 12$

$80 \div$  $= 10$

$$  $\div 8 = 2$

$$  $\div 6 = 8$


$$  $\div 2 = 5$


$$  $\div 9 = 1$

$$  $\div 7 = 5$

$16 \div 8 =$ 

$88 \div 8 =$ 

$30 \div 10 =$ 

$99 \div 11 =$ 

$48 \div 12 =$ 

$8 \div$  $= 8$

$21 \div$  $= 3$


$33 \div$  $= 3$

$90 \div$  $= 9$


$35 \div$  $= 7$

$$  $\div 4 = 8$

$$  $\div 8 = 2$

$$  $\div 2 = 8$

$$  $\div 7 = 11$

$$  $\div 9 = 6$

$12 \div 3 =$ 

$7 \div 1 =$ 

$63 \div 7 =$ 

$20 \div 5 =$ 

$144 \div 12 =$ 

$40 \div$  $= 5$

$40 \div$  $= 8$

$24 \div$  $= 12$


$96 \div$  $= 8$


$110 \div$  $= 11$

$$  $\div 2 = 10$

$$  $\div 4 = 5$

$$  $\div 7 = 8$

$$  $\div 1 = 3$

$$  $\div 2 = 12$