



¿QUÉ HAY EN EL REGALO? (1)

¿Qué número hay en cada regalo?

$95 \div 5 =$ 

$19 \div 19 =$ 

$95 \div 19 =$ 

$88 \div 8 =$ 

$192 \div 12 =$ 


$165 \div$  $= 15$


$176 \div$  $= 16$

$170 \div$  $= 10$


$12 \div$  $= 6$


$24 \div$  $= 3$

$$  $\div 14 = 19$

$$  $\div 3 = 17$

$$  $\div 8 = 15$


$$  $\div 14 = 15$

$$  $\div 20 = 4$

$42 \div 7 =$ 

$66 \div 6 =$ 

$30 \div 6 =$ 

$15 \div 1 =$ 

$105 \div 7 =$ 


$57 \div$  $= 3$

$28 \div$  $= 14$


$42 \div$  $= 7$


$18 \div$  $= 1$


$225 \div$  $= 15$


$$  $\div 9 = 3$

$$  $\div 6 = 19$


$$  $\div 18 = 8$

$$  $\div 14 = 5$


$$  $\div 8 = 8$

$64 \div 16 =$ 

$24 \div 8 =$ 

$72 \div 9 =$ 

$288 \div 18 =$ 

$96 \div 16 =$ 

$85 \div$  $= 17$


$306 \div$  $= 18$


$78 \div$  $= 13$


$80 \div$  $= 5$


$90 \div$  $= 5$

$$  $\div 4 = 17$

$$  $\div 13 = 10$

$$  $\div 9 = 20$

$$  $\div 19 = 6$

$$  $\div 1 = 5$