




¿QUÉ HAY EN EL REGALO? (B)

¿Qué número hay en cada regalo?

$683 + 315 =$ 

$63 + 389 =$ 

$511 + 284 =$ 

$90 + 12 =$ 

$761 + 553 =$ 


$509 +$  $= 748$

$217 +$  $= 993$

$111 +$  $= 675$

$240 +$  $= 661$


$978 +$  $= 1,837$

$$  $+ 766 = 1,498$


$$  $+ 837 = 1,711$

$$  $+ 712 = 1,642$

$$  $+ 332 = 405$


$$  $+ 312 = 385$

$804 + 986 =$ 

$493 + 355 =$ 

$803 + 61 =$ 

$740 + 151 =$ 

$865 + 111 =$ 


$292 +$  $= 865$

$512 +$  $= 1,397$

$310 +$  $= 634$


$843 +$  $= 977$

$536 +$  $= 1,102$


$$  $+ 274 = 868$

$$  $+ 405 = 810$


$$  $+ 255 = 1,220$

$$  $+ 689 = 1,126$


$$  $+ 327 = 864$

$167 + 76 =$ 

$627 + 678 =$ 

$543 + 497 =$ 

$854 + 12 =$ 

$463 + 594 =$ 


$892 +$  $= 1,211$


$408 +$  $= 1,167$

$315 +$  $= 501$

$677 +$  $= 1,054$


$560 +$  $= 615$

$$  $+ 727 = 1,229$

$$  $+ 817 = 914$

$$  $+ 76 = 423$

$$  $+ 208 = 345$

$$  $+ 370 = 447$