

SUMA Y RESTA DE PASCUAS (A)

Sigue al Conejo de Pascuas hasta su cesta. Calcula cada respuesta por el camino.



$$\begin{array}{r} 122 \\ - 80 \\ \hline \square \end{array}$$

$$\begin{array}{r} 109 \\ - 65 \\ \hline \square \end{array}$$

$$\begin{array}{r} 108 \\ - 98 \\ \hline \square \end{array}$$

$$\begin{array}{r} 26 \\ + 49 \\ \hline \square \end{array}$$

$$\begin{array}{r} 116 \\ - 73 \\ \hline \square \end{array}$$

$$\begin{array}{r} 74 \\ - 44 \\ \hline \square \end{array}$$

$$\begin{array}{r} 63 \\ + 79 \\ \hline \square \end{array}$$

$$\begin{array}{r} 154 \\ - 78 \\ \hline \square \end{array}$$

$$\begin{array}{r} 104 \\ - 87 \\ \hline \square \end{array}$$

$$\begin{array}{r} 98 \\ - 75 \\ \hline \square \end{array}$$

$$\begin{array}{r} 40 \\ + 57 \\ \hline \square \end{array}$$

$$\begin{array}{r} 82 \\ - 41 \\ \hline \square \end{array}$$

$$\begin{array}{r} 102 \\ - 71 \\ \hline \square \end{array}$$

$$\begin{array}{r} 73 \\ + 87 \\ \hline \square \end{array}$$

$$\begin{array}{r} 65 \\ + 44 \\ \hline \square \end{array}$$

$$\begin{array}{r} 98 \\ + 41 \\ \hline \square \end{array}$$

$$\begin{array}{r} 28 \\ + 36 \\ \hline \square \end{array}$$

$$\begin{array}{r} 151 \\ - 61 \\ \hline \square \end{array}$$

$$\begin{array}{r} 93 \\ + 87 \\ \hline \square \end{array}$$

$$\begin{array}{r} 30 \\ + 81 \\ \hline \square \end{array}$$

$$\begin{array}{r} 136 \\ - 62 \\ \hline \square \end{array}$$

$$\begin{array}{r} 81 \\ - 31 \\ \hline \square \end{array}$$

$$\begin{array}{r} 147 \\ - 61 \\ \hline \square \end{array}$$

$$\begin{array}{r} 103 \\ - 35 \\ \hline \square \end{array}$$

$$\begin{array}{r} 95 \\ - 37 \\ \hline \square \end{array}$$




¡Lo lograste!

Puntuación: ___ de 25

SUMA Y RESTA DE PASCUAS (A) RESPUESTAS

Sigue al Conejo de Pascuas hasta su cesta. Calcula cada respuesta por el camino.



$$\begin{array}{r} 122 \\ - 80 \\ \hline 42 \end{array}$$

$$\begin{array}{r} 109 \\ - 65 \\ \hline 44 \end{array}$$

$$\begin{array}{r} 108 \\ - 98 \\ \hline 10 \end{array}$$

$$\begin{array}{r} 26 \\ + 49 \\ \hline 75 \end{array}$$

$$\begin{array}{r} 116 \\ - 73 \\ \hline 43 \end{array}$$

$$\begin{array}{r} 74 \\ - 44 \\ \hline 30 \end{array}$$

$$\begin{array}{r} 63 \\ + 79 \\ \hline 142 \end{array}$$

$$\begin{array}{r} 154 \\ - 78 \\ \hline 76 \end{array}$$

$$\begin{array}{r} 104 \\ - 87 \\ \hline 17 \end{array}$$

$$\begin{array}{r} 98 \\ - 75 \\ \hline 23 \end{array}$$

$$\begin{array}{r} 40 \\ + 57 \\ \hline 97 \end{array}$$

$$\begin{array}{r} 82 \\ - 41 \\ \hline 41 \end{array}$$

$$\begin{array}{r} 102 \\ - 71 \\ \hline 31 \end{array}$$

$$\begin{array}{r} 73 \\ + 87 \\ \hline 160 \end{array}$$

$$\begin{array}{r} 65 \\ + 44 \\ \hline 109 \end{array}$$

$$\begin{array}{r} 98 \\ + 41 \\ \hline 139 \end{array}$$

$$\begin{array}{r} 28 \\ + 36 \\ \hline 64 \end{array}$$

$$\begin{array}{r} 151 \\ - 61 \\ \hline 90 \end{array}$$

$$\begin{array}{r} 93 \\ + 87 \\ \hline 180 \end{array}$$

$$\begin{array}{r} 30 \\ + 81 \\ \hline 111 \end{array}$$


$$\begin{array}{r} 136 \\ - 62 \\ \hline 74 \end{array}$$

$$\begin{array}{r} 81 \\ - 31 \\ \hline 50 \end{array}$$

$$\begin{array}{r} 147 \\ - 61 \\ \hline 86 \end{array}$$

$$\begin{array}{r} 103 \\ - 35 \\ \hline 68 \end{array}$$

$$\begin{array}{r} 95 \\ - 37 \\ \hline 58 \end{array}$$



¡Lo lograste!
 Puntuación: ___ de 25

SUMA Y RESTA DE PASCUAS (B)

Sigue al Conejo de Pascuas hasta su cesta. Calcula cada respuesta por el camino.



$$\begin{array}{r} 125 \\ - 86 \\ \hline \square \end{array} \quad \begin{array}{r} 36 \\ + 78 \\ \hline \square \end{array} \quad \begin{array}{r} 128 \\ - 65 \\ \hline \square \end{array}$$

$$\begin{array}{r} 140 \\ - 92 \\ \hline \square \end{array} \quad \begin{array}{r} 68 \\ + 67 \\ \hline \square \end{array} \quad \begin{array}{r} 17 \\ + 90 \\ \hline \square \end{array} \quad \begin{array}{r} 31 \\ + 50 \\ \hline \square \end{array}$$

$$\begin{array}{r} 70 \\ + 93 \\ \hline \square \end{array} \quad \begin{array}{r} 67 \\ - 15 \\ \hline \square \end{array} \quad \begin{array}{r} 162 \\ - 85 \\ \hline \square \end{array} \quad \begin{array}{r} 55 \\ - 44 \\ \hline \square \end{array}$$

$$\begin{array}{r} 59 \\ + 70 \\ \hline \square \end{array} \quad \begin{array}{r} 75 \\ - 50 \\ \hline \square \end{array} \quad \begin{array}{r} 20 \\ + 19 \\ \hline \square \end{array} \quad \begin{array}{r} 47 \\ + 58 \\ \hline \square \end{array}$$

$$\begin{array}{r} 31 \\ - 21 \\ \hline \square \end{array} \quad \begin{array}{r} 33 \\ - 23 \\ \hline \square \end{array} \quad \begin{array}{r} 71 \\ + 57 \\ \hline \square \end{array} \quad \begin{array}{r} 96 \\ + 89 \\ \hline \square \end{array}$$

$$\begin{array}{r} 153 \\ - 64 \\ \hline \square \end{array} \quad \begin{array}{r} 78 \\ - 46 \\ \hline \square \end{array} \quad \begin{array}{r} 93 \\ - 17 \\ \hline \square \end{array} \quad \begin{array}{r} 125 \\ - 30 \\ \hline \square \end{array}$$

$$\begin{array}{r} 141 \\ - 86 \\ \hline \square \end{array} \quad \begin{array}{r} 82 \\ + 24 \\ \hline \square \end{array}$$



¡Lo lograste!

Puntuación: ___ de 25

SUMA Y RESTA DE PASCUAS (B) RESPUESTAS

Sigue al Conejo de Pascuas hasta su cesta. Calcula cada respuesta por el camino.



$$\begin{array}{r} 125 \\ - 86 \\ \hline \end{array}$$
39

$$\begin{array}{r} 36 \\ + 78 \\ \hline \end{array}$$
114

$$\begin{array}{r} 128 \\ - 65 \\ \hline \end{array}$$
63

$$\begin{array}{r} 140 \\ - 92 \\ \hline \end{array}$$
48

$$\begin{array}{r} 68 \\ + 67 \\ \hline \end{array}$$
135

$$\begin{array}{r} 17 \\ + 90 \\ \hline \end{array}$$
107

$$\begin{array}{r} 31 \\ + 50 \\ \hline \end{array}$$
81

$$\begin{array}{r} 70 \\ + 93 \\ \hline \end{array}$$
163

$$\begin{array}{r} 67 \\ - 15 \\ \hline \end{array}$$
52

$$\begin{array}{r} 162 \\ - 85 \\ \hline \end{array}$$
77

$$\begin{array}{r} 55 \\ - 44 \\ \hline \end{array}$$
11

$$\begin{array}{r} 59 \\ + 70 \\ \hline \end{array}$$
129

$$\begin{array}{r} 75 \\ - 50 \\ \hline \end{array}$$
25

$$\begin{array}{r} 20 \\ + 19 \\ \hline \end{array}$$
39

$$\begin{array}{r} 47 \\ + 58 \\ \hline \end{array}$$
105

$$\begin{array}{r} 31 \\ - 21 \\ \hline \end{array}$$
10

$$\begin{array}{r} 33 \\ - 23 \\ \hline \end{array}$$
10

$$\begin{array}{r} 71 \\ + 57 \\ \hline \end{array}$$
128

$$\begin{array}{r} 96 \\ + 89 \\ \hline \end{array}$$
185

$$\begin{array}{r} 153 \\ - 64 \\ \hline \end{array}$$
89

$$\begin{array}{r} 78 \\ - 46 \\ \hline \end{array}$$
32

$$\begin{array}{r} 93 \\ - 17 \\ \hline \end{array}$$
76

$$\begin{array}{r} 125 \\ - 30 \\ \hline \end{array}$$
95

$$\begin{array}{r} 141 \\ - 86 \\ \hline \end{array}$$
55

$$\begin{array}{r} 82 \\ + 24 \\ \hline \end{array}$$
106

¡Lo lograste!
Puntuación: ___ de 25

SUMA Y RESTA DE PASCUAS (C)

Sigue al Conejo de Pascuas hasta su cesta. Calcula cada respuesta por el camino.



$$\begin{array}{r} 187 \\ - 92 \\ \hline \square \end{array}$$

$$\begin{array}{r} 52 \\ + 88 \\ \hline \square \end{array}$$

$$\begin{array}{r} 37 \\ + 25 \\ \hline \square \end{array}$$

$$\begin{array}{r} 29 \\ + 58 \\ \hline \square \end{array}$$

$$\begin{array}{r} 27 \\ + 79 \\ \hline \square \end{array}$$

$$\begin{array}{r} 94 \\ + 18 \\ \hline \square \end{array}$$

$$\begin{array}{r} 30 \\ + 31 \\ \hline \square \end{array}$$

$$\begin{array}{r} 107 \\ - 11 \\ \hline \square \end{array}$$

$$\begin{array}{r} 131 \\ - 39 \\ \hline \square \end{array}$$

$$\begin{array}{r} 46 \\ - 31 \\ \hline \square \end{array}$$

$$\begin{array}{r} 53 \\ + 52 \\ \hline \square \end{array}$$

$$\begin{array}{r} 47 \\ + 31 \\ \hline \square \end{array}$$

$$\begin{array}{r} 15 \\ + 17 \\ \hline \square \end{array}$$

$$\begin{array}{r} 25 \\ + 68 \\ \hline \square \end{array}$$

$$\begin{array}{r} 83 \\ + 16 \\ \hline \square \end{array}$$

$$\begin{array}{r} 11 \\ + 90 \\ \hline \square \end{array}$$

$$\begin{array}{r} 73 \\ - 26 \\ \hline \square \end{array}$$

$$\begin{array}{r} 49 \\ + 50 \\ \hline \square \end{array}$$

$$\begin{array}{r} 119 \\ - 68 \\ \hline \square \end{array}$$

$$\begin{array}{r} 33 \\ + 57 \\ \hline \square \end{array}$$

$$\begin{array}{r} 71 \\ + 32 \\ \hline \square \end{array}$$

$$\begin{array}{r} 28 \\ + 17 \\ \hline \square \end{array}$$

$$\begin{array}{r} 50 \\ + 33 \\ \hline \square \end{array}$$

$$\begin{array}{r} 85 \\ + 23 \\ \hline \square \end{array}$$

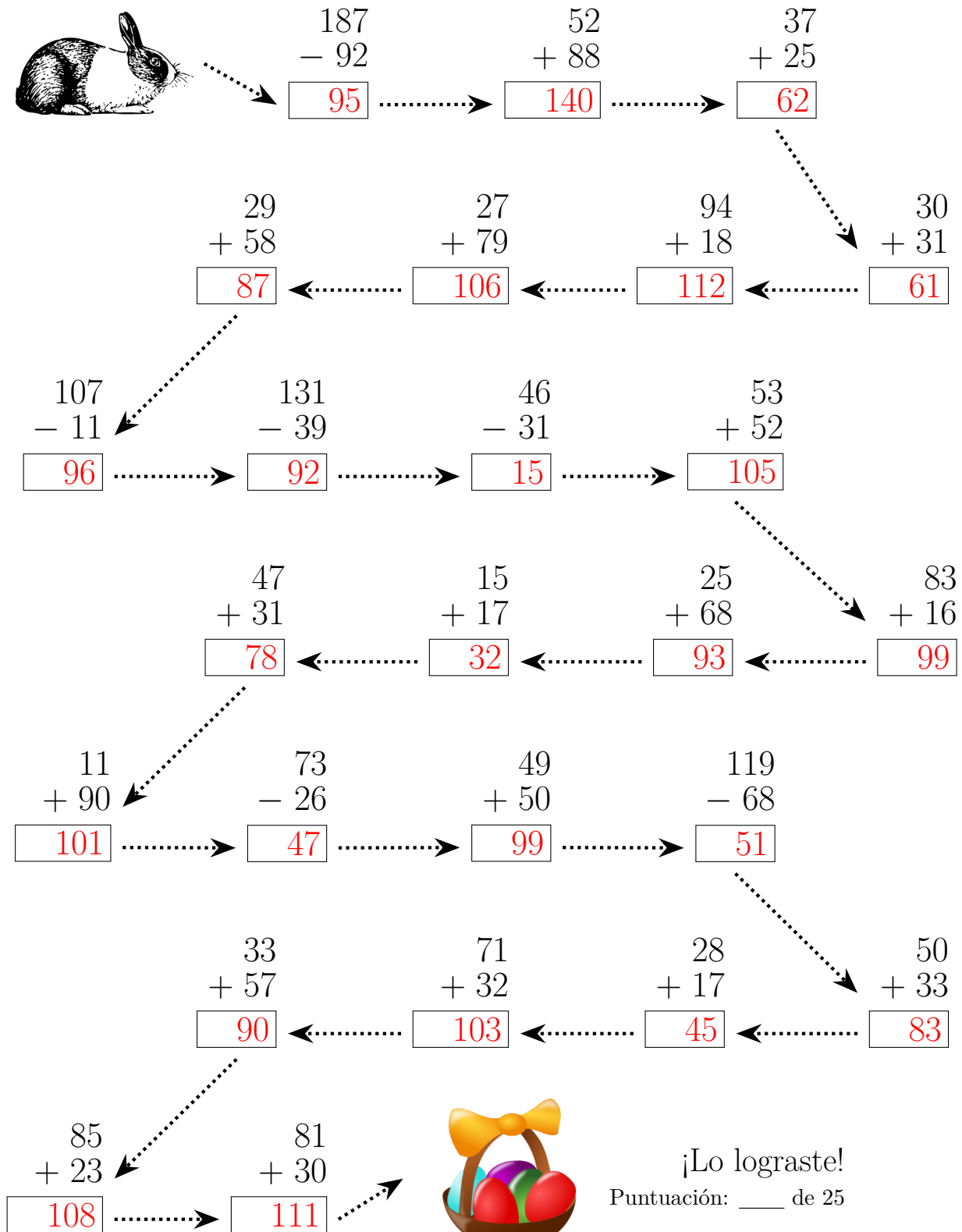
$$\begin{array}{r} 81 \\ + 30 \\ \hline \square \end{array}$$



¡Lo lograste!
Puntuación: ___ de 25

SUMA Y RESTA DE PASCUAS (C) RESPUESTAS

Sigue al Conejo de Pascuas hasta su cesta. Calcula cada respuesta por el camino.



SUMA Y RESTA DE PASCUAS (I)

Sigue al Conejo de Pascuas hasta su cesta. Calcula cada respuesta por el camino.



$$\begin{array}{r} 162 \\ - 94 \\ \hline \square \end{array}$$

$$\begin{array}{r} 178 \\ - 83 \\ \hline \square \end{array}$$

$$\begin{array}{r} 45 \\ + 92 \\ \hline \square \end{array}$$

$$\begin{array}{r} 120 \\ - 90 \\ \hline \square \end{array}$$

$$\begin{array}{r} 35 \\ + 34 \\ \hline \square \end{array}$$

$$\begin{array}{r} 101 \\ - 54 \\ \hline \square \end{array}$$

$$\begin{array}{r} 50 \\ - 27 \\ \hline \square \end{array}$$

$$\begin{array}{r} 81 \\ + 84 \\ \hline \square \end{array}$$

$$\begin{array}{r} 80 \\ + 99 \\ \hline \square \end{array}$$

$$\begin{array}{r} 27 \\ + 48 \\ \hline \square \end{array}$$

$$\begin{array}{r} 113 \\ - 57 \\ \hline \square \end{array}$$

$$\begin{array}{r} 91 \\ + 11 \\ \hline \square \end{array}$$

$$\begin{array}{r} 37 \\ + 79 \\ \hline \square \end{array}$$

$$\begin{array}{r} 129 \\ - 64 \\ \hline \square \end{array}$$

$$\begin{array}{r} 99 \\ - 48 \\ \hline \square \end{array}$$

$$\begin{array}{r} 106 \\ - 82 \\ \hline \square \end{array}$$

$$\begin{array}{r} 95 \\ + 46 \\ \hline \square \end{array}$$

$$\begin{array}{r} 50 \\ + 18 \\ \hline \square \end{array}$$

$$\begin{array}{r} 33 \\ + 16 \\ \hline \square \end{array}$$

$$\begin{array}{r} 16 \\ + 20 \\ \hline \square \end{array}$$

$$\begin{array}{r} 46 \\ + 99 \\ \hline \square \end{array}$$

$$\begin{array}{r} 96 \\ - 48 \\ \hline \square \end{array}$$

$$\begin{array}{r} 28 \\ + 83 \\ \hline \square \end{array}$$

$$\begin{array}{r} 99 \\ - 62 \\ \hline \square \end{array}$$

$$\begin{array}{r} 114 \\ - 32 \\ \hline \square \end{array}$$




¡Lo lograste!

Puntuación: ___ de 25

SUMA Y RESTA DE PASCUAS (D) RESPUESTAS

Sigue al Conejo de Pascuas hasta su cesta. Calcula cada respuesta por el camino.



$$\begin{array}{r} 162 \\ - 94 \\ \hline 68 \end{array}$$

$$\begin{array}{r} 178 \\ - 83 \\ \hline 95 \end{array}$$

$$\begin{array}{r} 45 \\ + 92 \\ \hline 137 \end{array}$$

$$\begin{array}{r} 120 \\ - 90 \\ \hline 30 \end{array}$$

$$\begin{array}{r} 35 \\ + 34 \\ \hline 69 \end{array}$$

$$\begin{array}{r} 101 \\ - 54 \\ \hline 47 \end{array}$$

$$\begin{array}{r} 50 \\ - 27 \\ \hline 23 \end{array}$$

$$\begin{array}{r} 81 \\ + 84 \\ \hline 165 \end{array}$$

$$\begin{array}{r} 80 \\ + 99 \\ \hline 179 \end{array}$$

$$\begin{array}{r} 27 \\ + 48 \\ \hline 75 \end{array}$$

$$\begin{array}{r} 113 \\ - 57 \\ \hline 56 \end{array}$$

$$\begin{array}{r} 91 \\ + 11 \\ \hline 102 \end{array}$$

$$\begin{array}{r} 37 \\ + 79 \\ \hline 116 \end{array}$$

$$\begin{array}{r} 129 \\ - 64 \\ \hline 65 \end{array}$$

$$\begin{array}{r} 99 \\ - 48 \\ \hline 51 \end{array}$$

$$\begin{array}{r} 106 \\ - 82 \\ \hline 24 \end{array}$$

$$\begin{array}{r} 95 \\ + 46 \\ \hline 141 \end{array}$$

$$\begin{array}{r} 50 \\ + 18 \\ \hline 68 \end{array}$$

$$\begin{array}{r} 33 \\ + 16 \\ \hline 49 \end{array}$$

$$\begin{array}{r} 16 \\ + 20 \\ \hline 36 \end{array}$$

$$\begin{array}{r} 46 \\ + 99 \\ \hline 145 \end{array}$$

$$\begin{array}{r} 96 \\ - 48 \\ \hline 48 \end{array}$$

$$\begin{array}{r} 28 \\ + 83 \\ \hline 111 \end{array}$$

$$\begin{array}{r} 99 \\ - 62 \\ \hline 37 \end{array}$$

$$\begin{array}{r} 114 \\ - 32 \\ \hline 82 \end{array}$$



¡Lo lograste!
Puntuación: ___ de 25

SUMA Y RESTA DE PASCUAS (E)

Sigue al Conejo de Pascuas hasta su cesta. Calcula cada respuesta por el camino.



$$\begin{array}{r} 75 \\ + 49 \\ \hline \square \end{array} \quad \begin{array}{r} 91 \\ - 11 \\ \hline \square \end{array} \quad \begin{array}{r} 102 \\ - 12 \\ \hline \square \end{array}$$

$$\begin{array}{r} 57 \\ - 47 \\ \hline \square \end{array} \quad \begin{array}{r} 102 \\ - 57 \\ \hline \square \end{array} \quad \begin{array}{r} 72 \\ - 59 \\ \hline \square \end{array} \quad \begin{array}{r} 43 \\ + 96 \\ \hline \square \end{array}$$

$$\begin{array}{r} 67 \\ + 89 \\ \hline \square \end{array} \quad \begin{array}{r} 151 \\ - 66 \\ \hline \square \end{array} \quad \begin{array}{r} 90 \\ + 17 \\ \hline \square \end{array} \quad \begin{array}{r} 37 \\ - 12 \\ \hline \square \end{array}$$

$$\begin{array}{r} 112 \\ - 24 \\ \hline \square \end{array} \quad \begin{array}{r} 184 \\ - 92 \\ \hline \square \end{array} \quad \begin{array}{r} 63 \\ + 93 \\ \hline \square \end{array} \quad \begin{array}{r} 30 \\ + 88 \\ \hline \square \end{array}$$

$$\begin{array}{r} 39 \\ + 81 \\ \hline \square \end{array} \quad \begin{array}{r} 40 \\ + 16 \\ \hline \square \end{array} \quad \begin{array}{r} 165 \\ - 68 \\ \hline \square \end{array} \quad \begin{array}{r} 104 \\ - 16 \\ \hline \square \end{array}$$

$$\begin{array}{r} 79 \\ + 12 \\ \hline \square \end{array} \quad \begin{array}{r} 46 \\ + 95 \\ \hline \square \end{array} \quad \begin{array}{r} 111 \\ - 94 \\ \hline \square \end{array} \quad \begin{array}{r} 113 \\ - 36 \\ \hline \square \end{array}$$

$$\begin{array}{r} 53 \\ + 41 \\ \hline \square \end{array} \quad \begin{array}{r} 118 \\ - 19 \\ \hline \square \end{array}$$



¡Lo lograste!
Puntuación: ___ de 25

SUMA Y RESTA DE PASCUAS (E) RESPUESTAS

Sigue al Conejo de Pascuas hasta su cesta. Calcula cada respuesta por el camino.



$$\begin{array}{r} 75 \\ + 49 \\ \hline 124 \end{array}$$

$$\begin{array}{r} 91 \\ - 11 \\ \hline 80 \end{array}$$

$$\begin{array}{r} 102 \\ - 12 \\ \hline 90 \end{array}$$

$$\begin{array}{r} 57 \\ - 47 \\ \hline 10 \end{array}$$

$$\begin{array}{r} 102 \\ - 57 \\ \hline 45 \end{array}$$

$$\begin{array}{r} 72 \\ - 59 \\ \hline 13 \end{array}$$

$$\begin{array}{r} 43 \\ + 96 \\ \hline 139 \end{array}$$

$$\begin{array}{r} 67 \\ + 89 \\ \hline 156 \end{array}$$

$$\begin{array}{r} 151 \\ - 66 \\ \hline 85 \end{array}$$

$$\begin{array}{r} 90 \\ + 17 \\ \hline 107 \end{array}$$

$$\begin{array}{r} 37 \\ - 12 \\ \hline 25 \end{array}$$

$$\begin{array}{r} 112 \\ - 24 \\ \hline 88 \end{array}$$

$$\begin{array}{r} 184 \\ - 92 \\ \hline 92 \end{array}$$

$$\begin{array}{r} 63 \\ + 93 \\ \hline 156 \end{array}$$

$$\begin{array}{r} 30 \\ + 88 \\ \hline 118 \end{array}$$

$$\begin{array}{r} 39 \\ + 81 \\ \hline 120 \end{array}$$

$$\begin{array}{r} 40 \\ + 16 \\ \hline 56 \end{array}$$

$$\begin{array}{r} 165 \\ - 68 \\ \hline 97 \end{array}$$

$$\begin{array}{r} 104 \\ - 16 \\ \hline 88 \end{array}$$

$$\begin{array}{r} 79 \\ + 12 \\ \hline 91 \end{array}$$


$$\begin{array}{r} 46 \\ + 95 \\ \hline 141 \end{array}$$

$$\begin{array}{r} 111 \\ - 94 \\ \hline 17 \end{array}$$

$$\begin{array}{r} 113 \\ - 36 \\ \hline 77 \end{array}$$

$$\begin{array}{r} 53 \\ + 41 \\ \hline 94 \end{array}$$

$$\begin{array}{r} 118 \\ - 19 \\ \hline 99 \end{array}$$



¡Lo lograste!
 Puntuación: ___ de 25

SUMA Y RESTA DE PASCUAS (F)

Sigue al Conejo de Pascuas hasta su cesta. Calcula cada respuesta por el camino.



$$\begin{array}{r} 96 \\ + 13 \\ \hline \end{array}$$

$$\begin{array}{r} 133 \\ - 52 \\ \hline \end{array}$$

$$\begin{array}{r} 168 \\ - 86 \\ \hline \end{array}$$

$$\begin{array}{r} 35 \\ + 72 \\ \hline \end{array}$$

$$\begin{array}{r} 126 \\ - 56 \\ \hline \end{array}$$

$$\begin{array}{r} 63 \\ + 19 \\ \hline \end{array}$$

$$\begin{array}{r} 73 \\ + 57 \\ \hline \end{array}$$

$$\begin{array}{r} 43 \\ + 75 \\ \hline \end{array}$$

$$\begin{array}{r} 162 \\ - 93 \\ \hline \end{array}$$

$$\begin{array}{r} 33 \\ + 73 \\ \hline \end{array}$$

$$\begin{array}{r} 80 \\ - 14 \\ \hline \end{array}$$

$$\begin{array}{r} 91 \\ + 13 \\ \hline \end{array}$$

$$\begin{array}{r} 71 \\ + 40 \\ \hline \end{array}$$

$$\begin{array}{r} 35 \\ + 31 \\ \hline \end{array}$$

$$\begin{array}{r} 117 \\ - 35 \\ \hline \end{array}$$

$$\begin{array}{r} 131 \\ - 71 \\ \hline \end{array}$$

$$\begin{array}{r} 93 \\ + 81 \\ \hline \end{array}$$

$$\begin{array}{r} 81 \\ + 80 \\ \hline \end{array}$$

$$\begin{array}{r} 70 \\ + 49 \\ \hline \end{array}$$

$$\begin{array}{r} 58 \\ + 54 \\ \hline \end{array}$$

$$\begin{array}{r} 120 \\ - 49 \\ \hline \end{array}$$

$$\begin{array}{r} 51 \\ + 31 \\ \hline \end{array}$$

$$\begin{array}{r} 151 \\ - 62 \\ \hline \end{array}$$

$$\begin{array}{r} 41 \\ + 39 \\ \hline \end{array}$$

$$\begin{array}{r} 83 \\ + 75 \\ \hline \end{array}$$

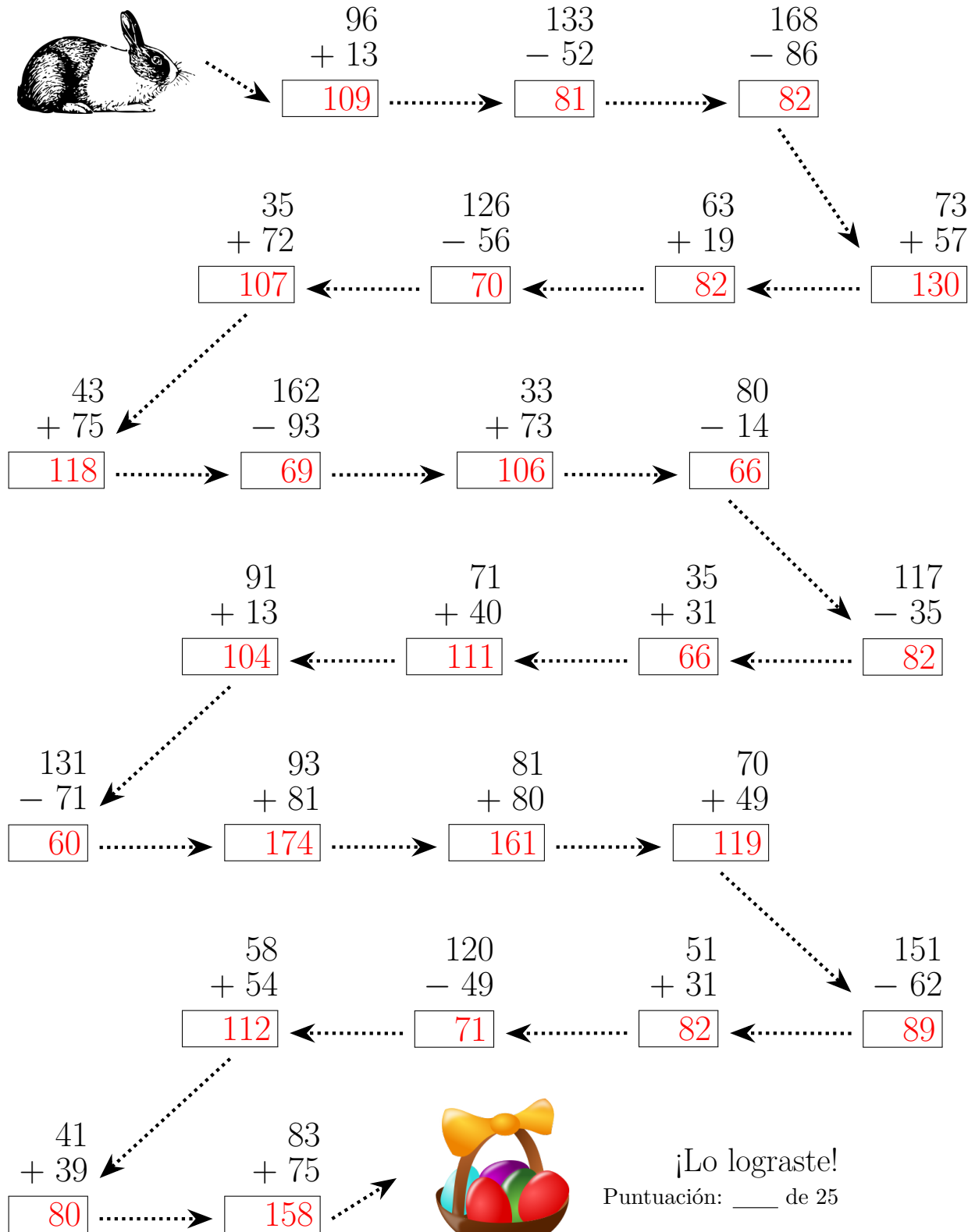


¡Lo lograste!

Puntuación: ___ de 25

SUMA Y RESTA DE PASCUAS (F) RESPUESTAS

Sigue al Conejo de Pascuas hasta su cesta. Calcula cada respuesta por el camino.



SUMA Y RESTA DE PASCUAS (G)

Sigue al Conejo de Pascuas hasta su cesta. Calcula cada respuesta por el camino.



$$\begin{array}{r} 37 \\ + 39 \\ \hline \square \end{array} \longrightarrow \begin{array}{r} 17 \\ + 99 \\ \hline \square \end{array} \longrightarrow \begin{array}{r} 56 \\ - 34 \\ \hline \square \end{array}$$

$$\begin{array}{r} 86 \\ - 49 \\ \hline \square \end{array} \longleftarrow \begin{array}{r} 145 \\ - 86 \\ \hline \square \end{array} \longleftarrow \begin{array}{r} 74 \\ + 47 \\ \hline \square \end{array} \longleftarrow \begin{array}{r} 112 \\ - 86 \\ \hline \square \end{array}$$

$$\begin{array}{r} 63 \\ + 45 \\ \hline \square \end{array} \longrightarrow \begin{array}{r} 165 \\ - 89 \\ \hline \square \end{array} \longrightarrow \begin{array}{r} 46 \\ + 76 \\ \hline \square \end{array} \longrightarrow \begin{array}{r} 62 \\ + 23 \\ \hline \square \end{array}$$

$$\begin{array}{r} 115 \\ - 45 \\ \hline \square \end{array} \longleftarrow \begin{array}{r} 145 \\ - 64 \\ \hline \square \end{array} \longleftarrow \begin{array}{r} 31 \\ + 72 \\ \hline \square \end{array} \longleftarrow \begin{array}{r} 89 \\ + 90 \\ \hline \square \end{array}$$

$$\begin{array}{r} 71 \\ - 44 \\ \hline \square \end{array} \longrightarrow \begin{array}{r} 72 \\ + 54 \\ \hline \square \end{array} \longrightarrow \begin{array}{r} 24 \\ + 81 \\ \hline \square \end{array} \longrightarrow \begin{array}{r} 48 \\ + 81 \\ \hline \square \end{array}$$

$$\begin{array}{r} 125 \\ - 38 \\ \hline \square \end{array} \longleftarrow \begin{array}{r} 69 \\ + 36 \\ \hline \square \end{array} \longleftarrow \begin{array}{r} 158 \\ - 91 \\ \hline \square \end{array} \longleftarrow \begin{array}{r} 70 \\ + 59 \\ \hline \square \end{array}$$

$$\begin{array}{r} 21 \\ - 10 \\ \hline \square \end{array} \longrightarrow \begin{array}{r} 97 \\ - 73 \\ \hline \square \end{array}$$



¡Lo lograste!

Puntuación: ___ de 25

SUMA Y RESTA DE PASCUAS (G) RESPUESTAS

Sigue al Conejo de Pascuas hasta su cesta. Calcula cada respuesta por el camino.



$$\begin{array}{r} 37 \\ + 39 \\ \hline \end{array}$$
76

$$\begin{array}{r} 17 \\ + 99 \\ \hline \end{array}$$
116

$$\begin{array}{r} 56 \\ - 34 \\ \hline \end{array}$$
22

$$\begin{array}{r} 86 \\ - 49 \\ \hline \end{array}$$
37

$$\begin{array}{r} 145 \\ - 86 \\ \hline \end{array}$$
59

$$\begin{array}{r} 74 \\ + 47 \\ \hline \end{array}$$
121

$$\begin{array}{r} 112 \\ - 86 \\ \hline \end{array}$$
26

$$\begin{array}{r} 63 \\ + 45 \\ \hline \end{array}$$
108

$$\begin{array}{r} 165 \\ - 89 \\ \hline \end{array}$$
76

$$\begin{array}{r} 46 \\ + 76 \\ \hline \end{array}$$
122

$$\begin{array}{r} 62 \\ + 23 \\ \hline \end{array}$$
85

$$\begin{array}{r} 115 \\ - 45 \\ \hline \end{array}$$
70

$$\begin{array}{r} 145 \\ - 64 \\ \hline \end{array}$$
81

$$\begin{array}{r} 31 \\ + 72 \\ \hline \end{array}$$
103

$$\begin{array}{r} 89 \\ + 90 \\ \hline \end{array}$$
179

$$\begin{array}{r} 71 \\ - 44 \\ \hline \end{array}$$
27

$$\begin{array}{r} 72 \\ + 54 \\ \hline \end{array}$$
126

$$\begin{array}{r} 24 \\ + 81 \\ \hline \end{array}$$
105

$$\begin{array}{r} 48 \\ + 81 \\ \hline \end{array}$$
129

$$\begin{array}{r} 125 \\ - 38 \\ \hline \end{array}$$
87


$$\begin{array}{r} 69 \\ + 36 \\ \hline \end{array}$$
105

$$\begin{array}{r} 158 \\ - 91 \\ \hline \end{array}$$
67

$$\begin{array}{r} 70 \\ + 59 \\ \hline \end{array}$$
129

$$\begin{array}{r} 21 \\ - 10 \\ \hline \end{array}$$
11

$$\begin{array}{r} 97 \\ - 73 \\ \hline \end{array}$$
24



¡Lo lograste!
 Puntuación: ____ de 25

SUMA Y RESTA DE PASCUAS QD

Sigue al Conejo de Pascuas hasta su cesta. Calcula cada respuesta por el camino.



$$\begin{array}{r} 60 \\ + 33 \\ \hline \square \end{array} \rightarrow \begin{array}{r} 16 \\ + 70 \\ \hline \square \end{array} \rightarrow \begin{array}{r} 76 \\ + 37 \\ \hline \square \end{array}$$

$$\begin{array}{r} 132 \\ - 76 \\ \hline \square \end{array} \leftarrow \begin{array}{r} 83 \\ + 74 \\ \hline \square \end{array} \leftarrow \begin{array}{r} 65 \\ + 41 \\ \hline \square \end{array} \leftarrow \begin{array}{r} 70 \\ + 37 \\ \hline \square \end{array}$$

$$\begin{array}{r} 38 \\ - 26 \\ \hline \square \end{array} \rightarrow \begin{array}{r} 37 \\ + 46 \\ \hline \square \end{array} \rightarrow \begin{array}{r} 36 \\ - 23 \\ \hline \square \end{array} \rightarrow \begin{array}{r} 142 \\ - 70 \\ \hline \square \end{array}$$

$$\begin{array}{r} 154 \\ - 65 \\ \hline \square \end{array} \leftarrow \begin{array}{r} 188 \\ - 95 \\ \hline \square \end{array} \leftarrow \begin{array}{r} 73 \\ - 16 \\ \hline \square \end{array} \leftarrow \begin{array}{r} 28 \\ + 41 \\ \hline \square \end{array}$$

$$\begin{array}{r} 73 \\ + 52 \\ \hline \square \end{array} \rightarrow \begin{array}{r} 93 \\ - 31 \\ \hline \square \end{array} \rightarrow \begin{array}{r} 132 \\ - 46 \\ \hline \square \end{array} \rightarrow \begin{array}{r} 43 \\ + 57 \\ \hline \square \end{array}$$

$$\begin{array}{r} 20 \\ + 15 \\ \hline \square \end{array} \leftarrow \begin{array}{r} 74 \\ + 50 \\ \hline \square \end{array} \leftarrow \begin{array}{r} 60 \\ - 32 \\ \hline \square \end{array} \leftarrow \begin{array}{r} 83 \\ - 23 \\ \hline \square \end{array}$$


$$\begin{array}{r} 92 \\ - 73 \\ \hline \square \end{array} \rightarrow \begin{array}{r} 19 \\ + 68 \\ \hline \square \end{array} \rightarrow$$



¡Lo lograste!
Puntuación: ___ de 25

SUMA Y RESTA DE PASCUAS (10) RESPUESTAS

Sigue al Conejo de Pascuas hasta su cesta. Calcula cada respuesta por el camino.



$$\begin{array}{r} 60 \\ + 33 \\ \hline 93 \end{array}$$

$$\begin{array}{r} 16 \\ + 70 \\ \hline 86 \end{array}$$

$$\begin{array}{r} 76 \\ + 37 \\ \hline 113 \end{array}$$

$$\begin{array}{r} 132 \\ - 76 \\ \hline 56 \end{array}$$

$$\begin{array}{r} 83 \\ + 74 \\ \hline 157 \end{array}$$

$$\begin{array}{r} 65 \\ + 41 \\ \hline 106 \end{array}$$

$$\begin{array}{r} 70 \\ + 37 \\ \hline 107 \end{array}$$

$$\begin{array}{r} 38 \\ - 26 \\ \hline 12 \end{array}$$

$$\begin{array}{r} 37 \\ + 46 \\ \hline 83 \end{array}$$

$$\begin{array}{r} 36 \\ - 23 \\ \hline 13 \end{array}$$

$$\begin{array}{r} 142 \\ - 70 \\ \hline 72 \end{array}$$

$$\begin{array}{r} 154 \\ - 65 \\ \hline 89 \end{array}$$

$$\begin{array}{r} 188 \\ - 95 \\ \hline 93 \end{array}$$

$$\begin{array}{r} 73 \\ - 16 \\ \hline 57 \end{array}$$

$$\begin{array}{r} 28 \\ + 41 \\ \hline 69 \end{array}$$

$$\begin{array}{r} 73 \\ + 52 \\ \hline 125 \end{array}$$

$$\begin{array}{r} 93 \\ - 31 \\ \hline 62 \end{array}$$

$$\begin{array}{r} 132 \\ - 46 \\ \hline 86 \end{array}$$

$$\begin{array}{r} 43 \\ + 57 \\ \hline 100 \end{array}$$

$$\begin{array}{r} 20 \\ + 15 \\ \hline 35 \end{array}$$


$$\begin{array}{r} 74 \\ + 50 \\ \hline 124 \end{array}$$

$$\begin{array}{r} 60 \\ - 32 \\ \hline 28 \end{array}$$

$$\begin{array}{r} 83 \\ - 23 \\ \hline 60 \end{array}$$

$$\begin{array}{r} 92 \\ - 73 \\ \hline 19 \end{array}$$

$$\begin{array}{r} 19 \\ + 68 \\ \hline 87 \end{array}$$



¡Lo lograste!
 Puntuación: ___ de 25

SUMA Y RESTA DE PASCUAS (1)

Sigue al Conejo de Pascuas hasta su cesta. Calcula cada respuesta por el camino.



$$\begin{array}{r} 20 \\ + 93 \\ \hline \square \end{array} \longrightarrow \begin{array}{r} 116 \\ - 51 \\ \hline \square \end{array} \longrightarrow \begin{array}{r} 120 \\ - 82 \\ \hline \square \end{array}$$

$$\begin{array}{r} 90 \\ - 66 \\ \hline \square \end{array} \longleftarrow \begin{array}{r} 136 \\ - 79 \\ \hline \square \end{array} \longleftarrow \begin{array}{r} 74 \\ + 82 \\ \hline \square \end{array} \longleftarrow \begin{array}{r} 97 \\ - 39 \\ \hline \square \end{array}$$

$$\begin{array}{r} 49 \\ + 48 \\ \hline \square \end{array} \longrightarrow \begin{array}{r} 34 \\ + 85 \\ \hline \square \end{array} \longrightarrow \begin{array}{r} 43 \\ + 39 \\ \hline \square \end{array} \longrightarrow \begin{array}{r} 54 \\ + 12 \\ \hline \square \end{array}$$

$$\begin{array}{r} 97 \\ + 55 \\ \hline \square \end{array} \longleftarrow \begin{array}{r} 148 \\ - 61 \\ \hline \square \end{array} \longleftarrow \begin{array}{r} 62 \\ + 57 \\ \hline \square \end{array} \longleftarrow \begin{array}{r} 92 \\ - 30 \\ \hline \square \end{array}$$

$$\begin{array}{r} 36 \\ + 63 \\ \hline \square \end{array} \longrightarrow \begin{array}{r} 101 \\ - 60 \\ \hline \square \end{array} \longrightarrow \begin{array}{r} 24 \\ + 66 \\ \hline \square \end{array} \longrightarrow \begin{array}{r} 65 \\ + 42 \\ \hline \square \end{array}$$

$$\begin{array}{r} 171 \\ - 79 \\ \hline \square \end{array} \longleftarrow \begin{array}{r} 36 \\ + 96 \\ \hline \square \end{array} \longleftarrow \begin{array}{r} 43 \\ + 67 \\ \hline \square \end{array} \longleftarrow \begin{array}{r} 61 \\ + 45 \\ \hline \square \end{array}$$


$$\begin{array}{r} 169 \\ - 92 \\ \hline \square \end{array} \longrightarrow \begin{array}{r} 108 \\ - 57 \\ \hline \square \end{array} \longrightarrow$$



¡Lo lograste!
Puntuación: ___ de 25

SUMA Y RESTA DE PASCUAS (1) RESPUESTAS

Sigue al Conejo de Pascuas hasta su cesta. Calcula cada respuesta por el camino.



$$\begin{array}{r} 20 \\ + 93 \\ \hline 113 \end{array}$$

$$\begin{array}{r} 116 \\ - 51 \\ \hline 65 \end{array}$$

$$\begin{array}{r} 120 \\ - 82 \\ \hline 38 \end{array}$$

$$\begin{array}{r} 90 \\ - 66 \\ \hline 24 \end{array}$$

$$\begin{array}{r} 136 \\ - 79 \\ \hline 57 \end{array}$$

$$\begin{array}{r} 74 \\ + 82 \\ \hline 156 \end{array}$$

$$\begin{array}{r} 97 \\ - 39 \\ \hline 58 \end{array}$$

$$\begin{array}{r} 49 \\ + 48 \\ \hline 97 \end{array}$$

$$\begin{array}{r} 34 \\ + 85 \\ \hline 119 \end{array}$$

$$\begin{array}{r} 43 \\ + 39 \\ \hline 82 \end{array}$$

$$\begin{array}{r} 54 \\ + 12 \\ \hline 66 \end{array}$$

$$\begin{array}{r} 97 \\ + 55 \\ \hline 152 \end{array}$$

$$\begin{array}{r} 148 \\ - 61 \\ \hline 87 \end{array}$$

$$\begin{array}{r} 62 \\ + 57 \\ \hline 119 \end{array}$$

$$\begin{array}{r} 92 \\ - 30 \\ \hline 62 \end{array}$$

$$\begin{array}{r} 36 \\ + 63 \\ \hline 99 \end{array}$$

$$\begin{array}{r} 101 \\ - 60 \\ \hline 41 \end{array}$$

$$\begin{array}{r} 24 \\ + 66 \\ \hline 90 \end{array}$$

$$\begin{array}{r} 65 \\ + 42 \\ \hline 107 \end{array}$$

$$\begin{array}{r} 171 \\ - 79 \\ \hline 92 \end{array}$$

$$\begin{array}{r} 36 \\ + 96 \\ \hline 132 \end{array}$$

$$\begin{array}{r} 43 \\ + 67 \\ \hline 110 \end{array}$$

$$\begin{array}{r} 61 \\ + 45 \\ \hline 106 \end{array}$$

$$\begin{array}{r} 169 \\ - 92 \\ \hline 77 \end{array}$$

$$\begin{array}{r} 108 \\ - 57 \\ \hline 51 \end{array}$$



¡Lo lograste!

Puntuación: ___ de 25

SUMA Y RESTA DE PASCUAS (1)

Sigue al Conejo de Pascuas hasta su cesta. Calcula cada respuesta por el camino.



$$\begin{array}{r} 97 \\ - 28 \\ \hline \square \end{array} \quad \begin{array}{r} 79 \\ - 23 \\ \hline \square \end{array} \quad \begin{array}{r} 143 \\ - 66 \\ \hline \square \end{array}$$

$$\begin{array}{r} 91 \\ + 43 \\ \hline \square \end{array} \quad \begin{array}{r} 147 \\ - 89 \\ \hline \square \end{array} \quad \begin{array}{r} 37 \\ + 79 \\ \hline \square \end{array} \quad \begin{array}{r} 101 \\ - 30 \\ \hline \square \end{array}$$

$$\begin{array}{r} 93 \\ - 30 \\ \hline \square \end{array} \quad \begin{array}{r} 99 \\ + 98 \\ \hline \square \end{array} \quad \begin{array}{r} 57 \\ + 51 \\ \hline \square \end{array} \quad \begin{array}{r} 165 \\ - 70 \\ \hline \square \end{array}$$

$$\begin{array}{r} 93 \\ + 79 \\ \hline \square \end{array} \quad \begin{array}{r} 132 \\ - 84 \\ \hline \square \end{array} \quad \begin{array}{r} 30 \\ + 12 \\ \hline \square \end{array} \quad \begin{array}{r} 75 \\ - 63 \\ \hline \square \end{array}$$

$$\begin{array}{r} 46 \\ + 39 \\ \hline \square \end{array} \quad \begin{array}{r} 41 \\ + 53 \\ \hline \square \end{array} \quad \begin{array}{r} 24 \\ + 30 \\ \hline \square \end{array} \quad \begin{array}{r} 122 \\ - 93 \\ \hline \square \end{array}$$

$$\begin{array}{r} 50 \\ + 40 \\ \hline \square \end{array} \quad \begin{array}{r} 72 \\ - 31 \\ \hline \square \end{array} \quad \begin{array}{r} 102 \\ - 16 \\ \hline \square \end{array} \quad \begin{array}{r} 140 \\ - 72 \\ \hline \square \end{array}$$

$$\begin{array}{r} 81 \\ - 61 \\ \hline \square \end{array} \quad \begin{array}{r} 101 \\ - 57 \\ \hline \square \end{array}$$



¡Lo lograste!
Puntuación: ___ de 25

SUMA Y RESTA DE PASCUAS (O) RESPUESTAS

Sigue al Conejo de Pascuas hasta su cesta. Calcula cada respuesta por el camino.



$$\begin{array}{r} 97 \\ - 28 \\ \hline 69 \end{array}$$

$$\begin{array}{r} 79 \\ - 23 \\ \hline 56 \end{array}$$

$$\begin{array}{r} 143 \\ - 66 \\ \hline 77 \end{array}$$

$$\begin{array}{r} 91 \\ + 43 \\ \hline 134 \end{array}$$

$$\begin{array}{r} 147 \\ - 89 \\ \hline 58 \end{array}$$

$$\begin{array}{r} 37 \\ + 79 \\ \hline 116 \end{array}$$

$$\begin{array}{r} 101 \\ - 30 \\ \hline 71 \end{array}$$

$$\begin{array}{r} 93 \\ - 30 \\ \hline 63 \end{array}$$

$$\begin{array}{r} 99 \\ + 98 \\ \hline 197 \end{array}$$

$$\begin{array}{r} 57 \\ + 51 \\ \hline 108 \end{array}$$

$$\begin{array}{r} 165 \\ - 70 \\ \hline 95 \end{array}$$

$$\begin{array}{r} 93 \\ + 79 \\ \hline 172 \end{array}$$

$$\begin{array}{r} 132 \\ - 84 \\ \hline 48 \end{array}$$

$$\begin{array}{r} 30 \\ + 12 \\ \hline 42 \end{array}$$

$$\begin{array}{r} 75 \\ - 63 \\ \hline 12 \end{array}$$

$$\begin{array}{r} 46 \\ + 39 \\ \hline 85 \end{array}$$

$$\begin{array}{r} 41 \\ + 53 \\ \hline 94 \end{array}$$

$$\begin{array}{r} 24 \\ + 30 \\ \hline 54 \end{array}$$

$$\begin{array}{r} 122 \\ - 93 \\ \hline 29 \end{array}$$

$$\begin{array}{r} 50 \\ + 40 \\ \hline 90 \end{array}$$

$$\begin{array}{r} 72 \\ - 31 \\ \hline 41 \end{array}$$

$$\begin{array}{r} 102 \\ - 16 \\ \hline 86 \end{array}$$

$$\begin{array}{r} 140 \\ - 72 \\ \hline 68 \end{array}$$

$$\begin{array}{r} 81 \\ - 61 \\ \hline 20 \end{array}$$

$$\begin{array}{r} 101 \\ - 57 \\ \hline 44 \end{array}$$

¡Lo lograste!
 Puntuación: ___ de 25