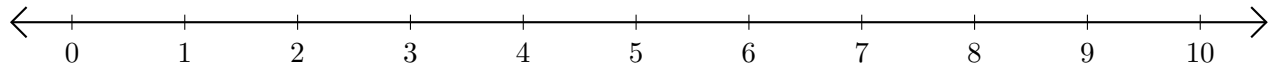


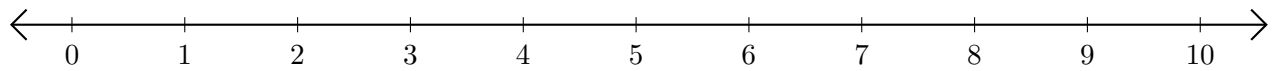
Restar en Rectas Numéricas (A)

Use las rectas numéricas para calcular cada diferencia.

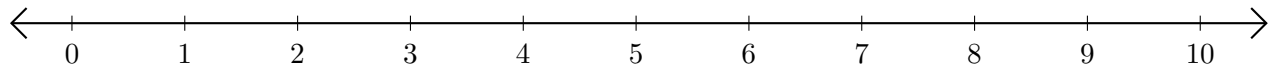
1. $10 - 4 = \underline{\quad}$



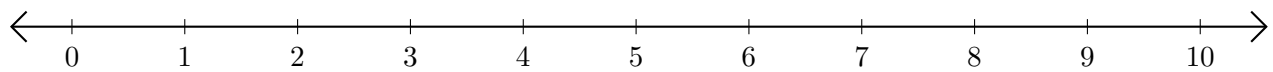
2. $9 - 7 = \underline{\quad}$



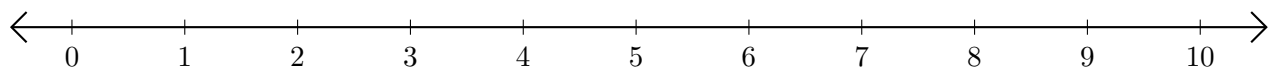
3. $9 - 5 = \underline{\quad}$



4. $10 - 9 = \underline{\quad}$



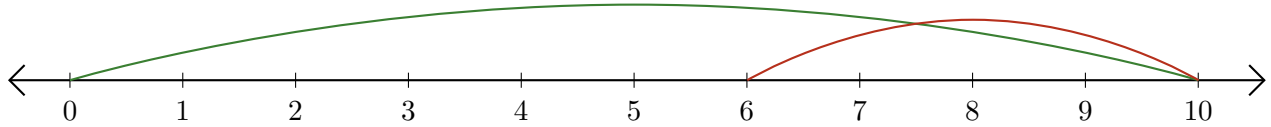
5. $8 - 3 = \underline{\quad}$



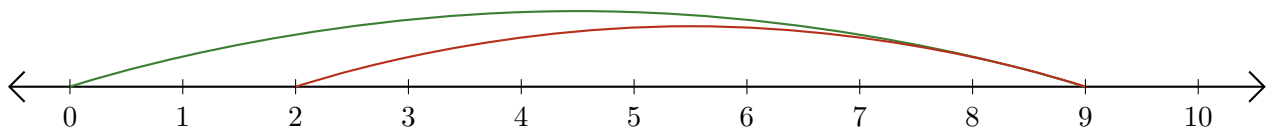
Restar en Rectas Numéricas (A) Respuestas

Use las rectas numéricas para calcular cada diferencia.

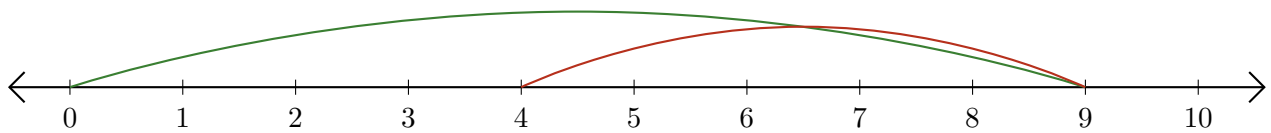
1. $10 - 4 = \underline{6}$



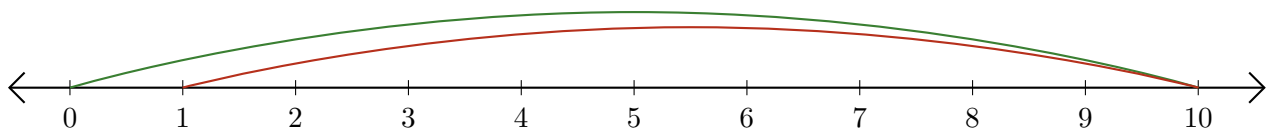
2. $9 - 7 = \underline{2}$



3. $9 - 5 = \underline{4}$



4. $10 - 9 = \underline{1}$



5. $8 - 3 = \underline{5}$

