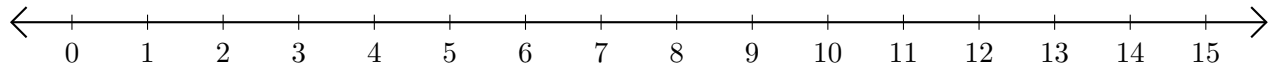


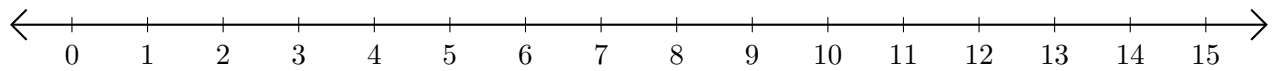
Restar en Rectas Numéricas (B)

Use las rectas numéricas para calcular cada diferencia.

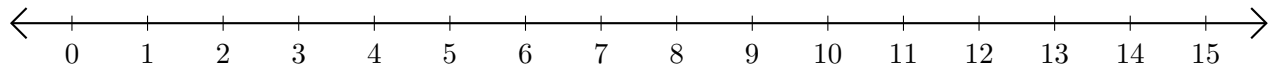
1. $9 - 1 = \underline{\quad}$



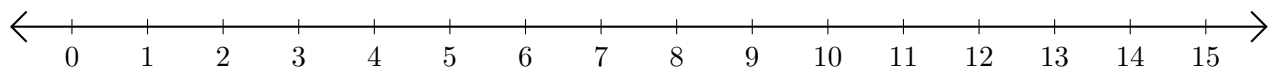
2. $15 - 13 = \underline{\quad}$



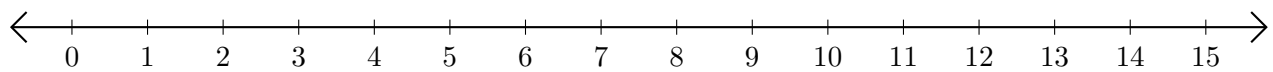
3. $15 - 14 = \underline{\quad}$



4. $15 - 9 = \underline{\quad}$



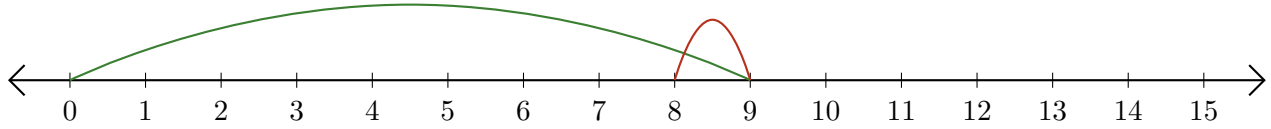
5. $13 - 12 = \underline{\quad}$



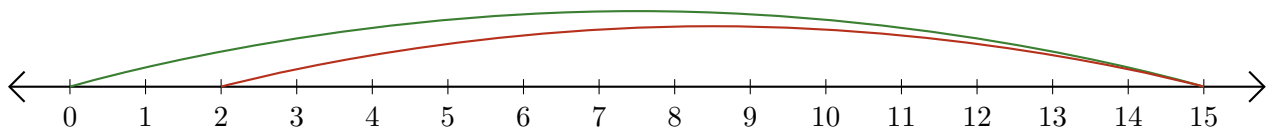
Restar en Rectas Numéricas (B) Respuestas

Use las rectas numéricas para calcular cada diferencia.

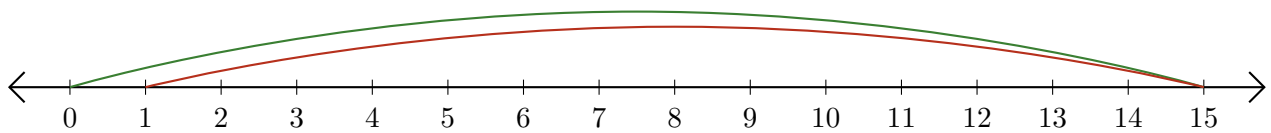
1. $9 - 1 = \underline{8}$



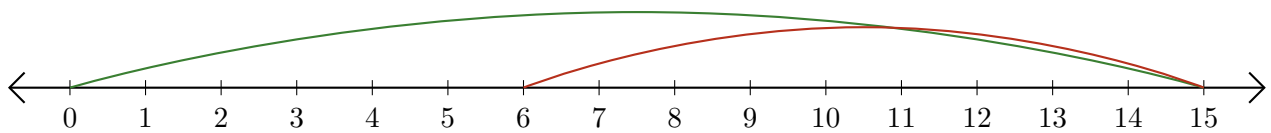
2. $15 - 13 = \underline{2}$



3. $15 - 14 = \underline{1}$



4. $15 - 9 = \underline{6}$



5. $13 - 12 = \underline{1}$

