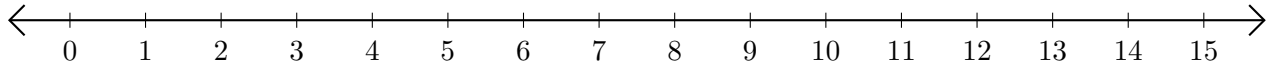


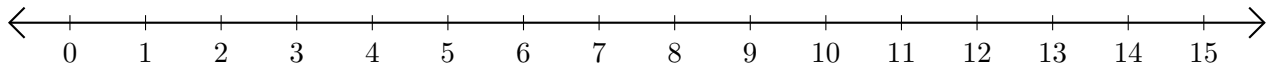
Restar en Rectas Numéricas (D)

Use las rectas numéricas para calcular cada diferencia.

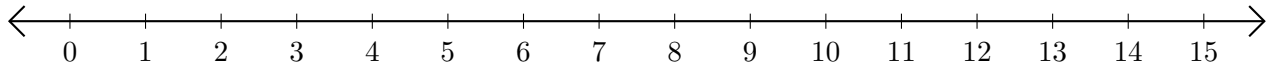
1. $13 - 11 = \underline{\quad}$



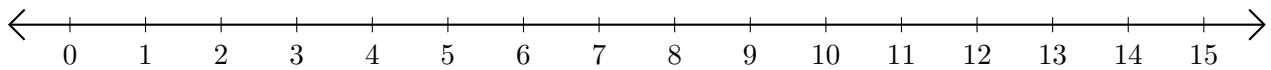
2. $15 - 12 = \underline{\quad}$



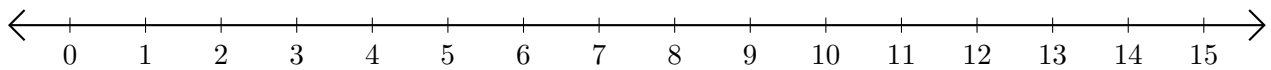
3. $11 - 9 = \underline{\quad}$



4. $15 - 10 = \underline{\quad}$



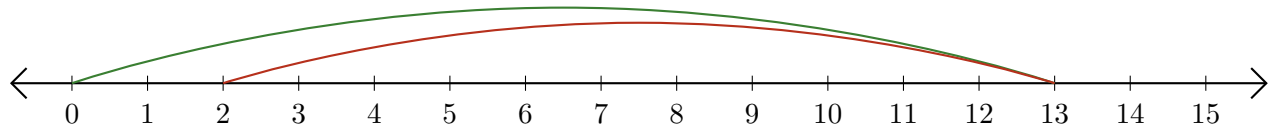
5. $12 - 7 = \underline{\quad}$



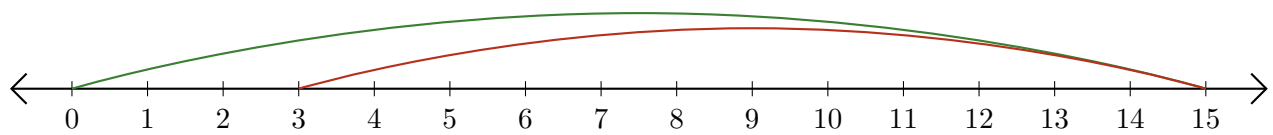
Restar en Rectas Numéricas (D) Respuestas

Use las rectas numéricas para calcular cada diferencia.

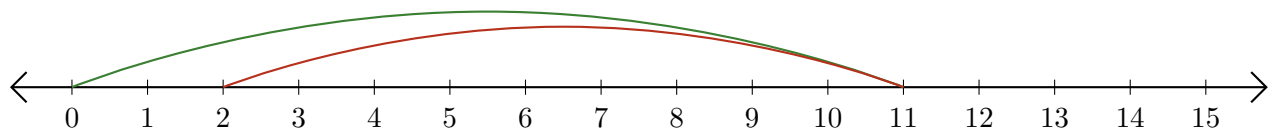
1. $13 - 11 = \underline{2}$



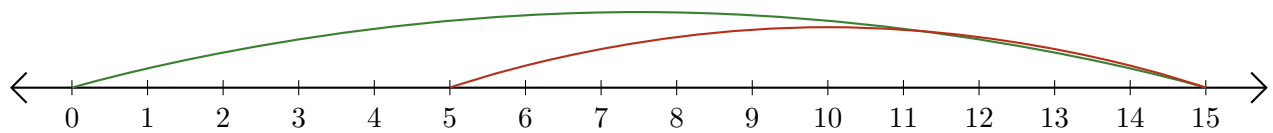
2. $15 - 12 = \underline{3}$



3. $11 - 9 = \underline{2}$



4. $15 - 10 = \underline{5}$



5. $12 - 7 = \underline{5}$

