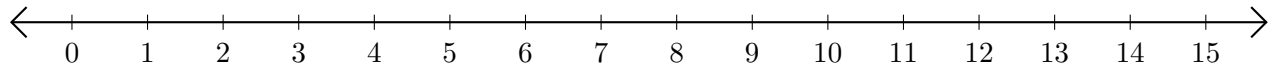


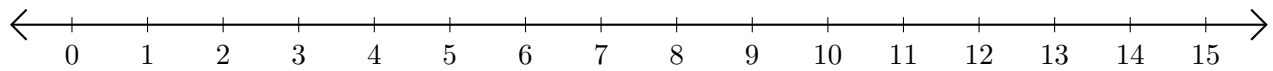
Restar en Rectas Numéricas (F)

Use las rectas numéricas para calcular cada diferencia.

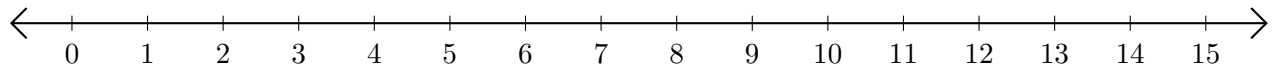
1. $9 - 4 = \underline{\quad}$



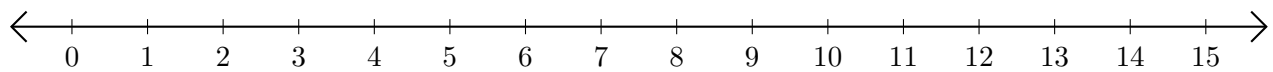
2. $11 - 5 = \underline{\quad}$



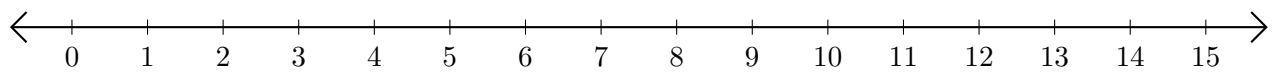
3. $13 - 11 = \underline{\quad}$



4. $12 - 6 = \underline{\quad}$



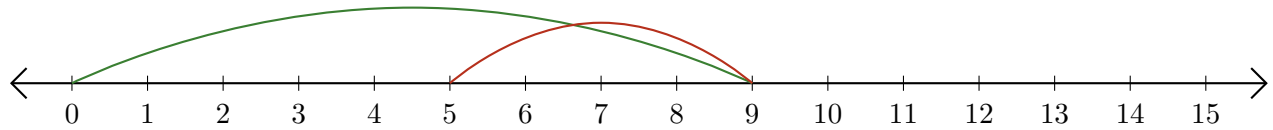
5. $15 - 10 = \underline{\quad}$



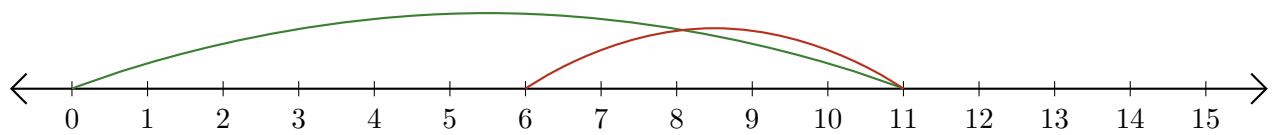
Restar en Rectas Numéricas (F) Respuestas

Use las rectas numéricas para calcular cada diferencia.

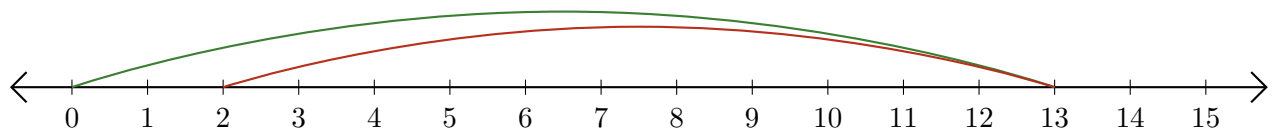
1. $9 - 4 = \underline{5}$



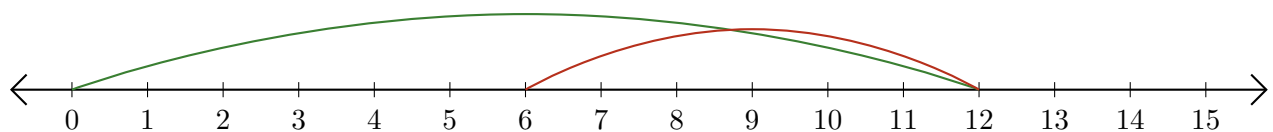
2. $11 - 5 = \underline{6}$



3. $13 - 11 = \underline{2}$



4. $12 - 6 = \underline{6}$



5. $15 - 10 = \underline{5}$

