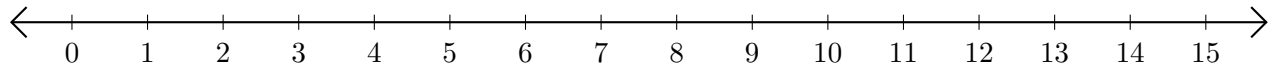


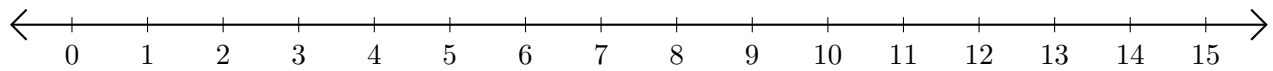
# Restar en Rectas Numéricas (G)

Use las rectas numéricas para calcular cada diferencia.

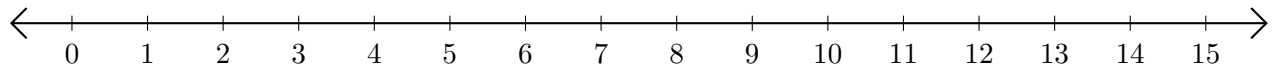
1.  $14 - 9 = \underline{\quad}$



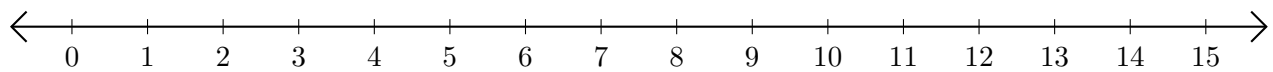
2.  $8 - 6 = \underline{\quad}$



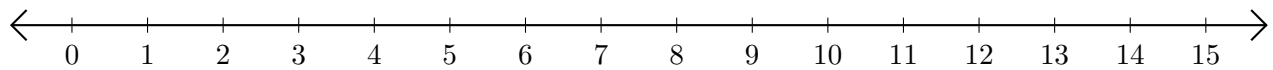
3.  $9 - 8 = \underline{\quad}$



4.  $15 - 14 = \underline{\quad}$



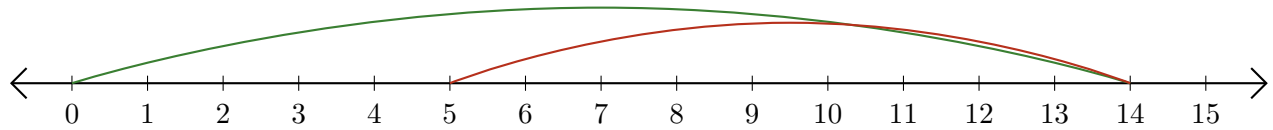
5.  $14 - 13 = \underline{\quad}$



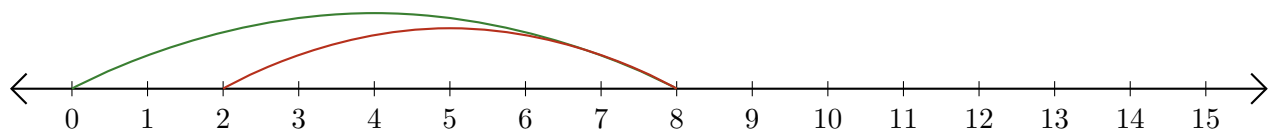
# Restar en Rectas Numéricas (G) Respuestas

Use las rectas numéricas para calcular cada diferencia.

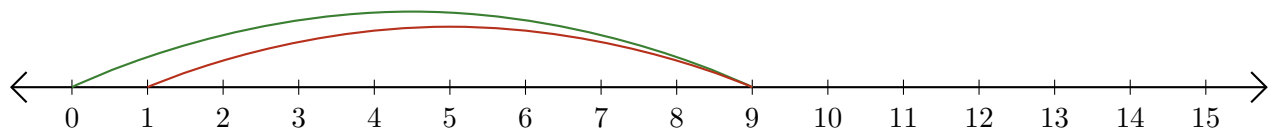
1.  $14 - 9 = \underline{5}$



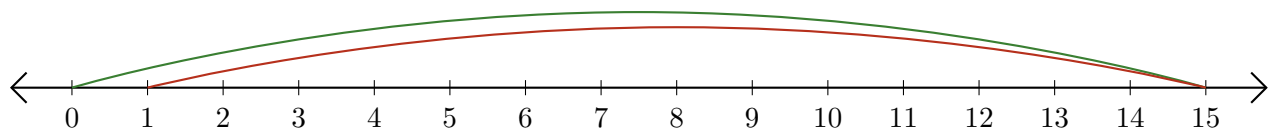
2.  $8 - 6 = \underline{2}$



3.  $9 - 8 = \underline{1}$



4.  $15 - 14 = \underline{1}$



5.  $14 - 13 = \underline{1}$

