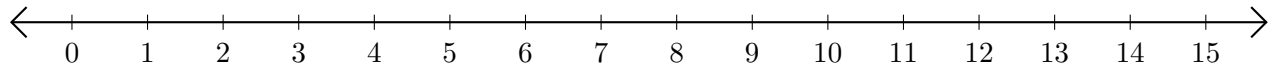


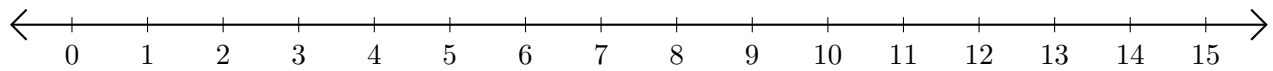
Restar en Rectas Numéricas (J)

Use las rectas numéricas para calcular cada diferencia.

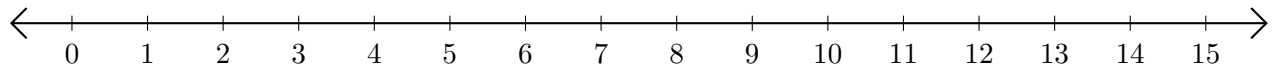
1. $15 - 13 = \underline{\quad}$



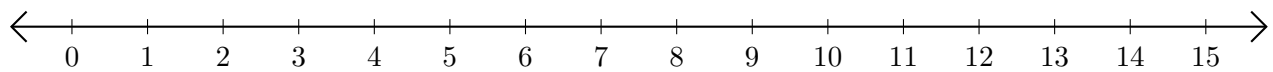
2. $9 - 5 = \underline{\quad}$



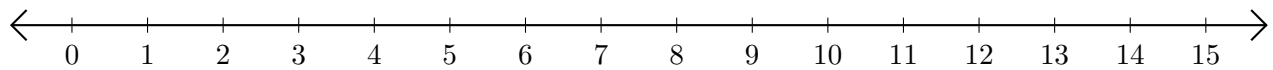
3. $15 - 12 = \underline{\quad}$



4. $12 - 2 = \underline{\quad}$



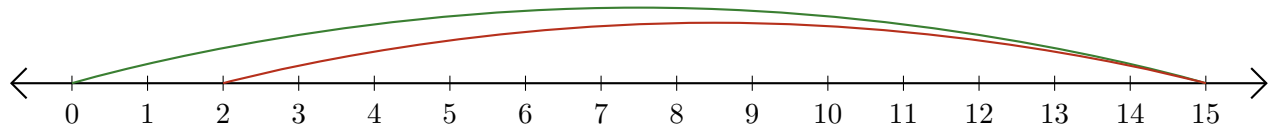
5. $9 - 6 = \underline{\quad}$



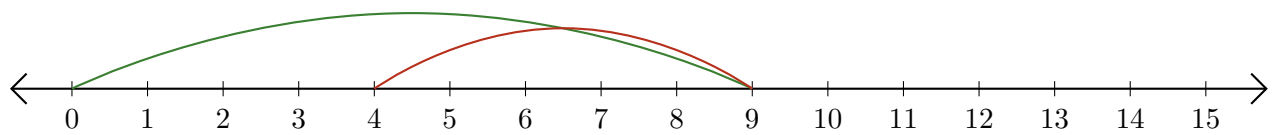
Restar en Rectas Numéricas (J) Respuestas

Use las rectas numéricas para calcular cada diferencia.

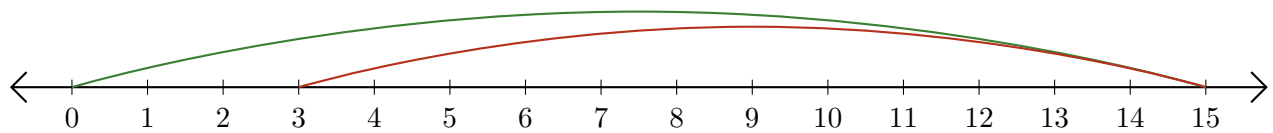
1. $15 - 13 = \underline{2}$



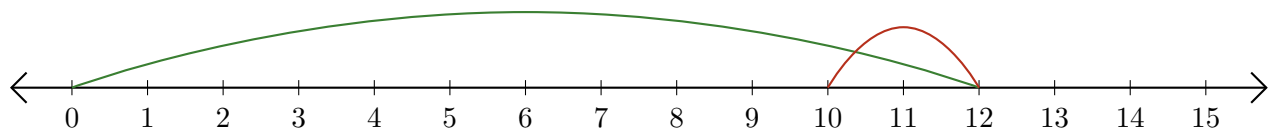
2. $9 - 5 = \underline{4}$



3. $15 - 12 = \underline{3}$



4. $12 - 2 = \underline{10}$



5. $9 - 6 = \underline{3}$

