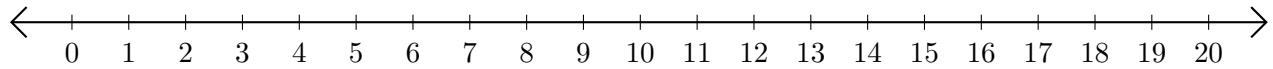


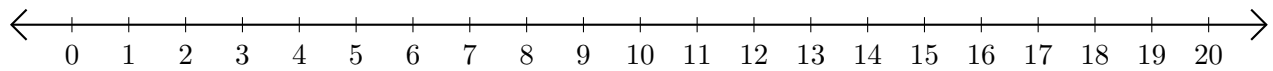
Restar en Rectas Numéricas (B)

Use las rectas numéricas para calcular cada diferencia.

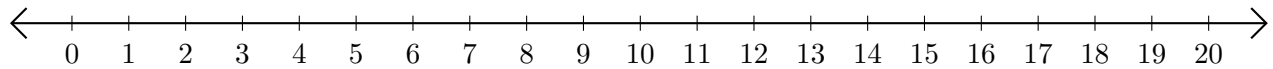
1. $10 - 3 = \underline{\quad}$



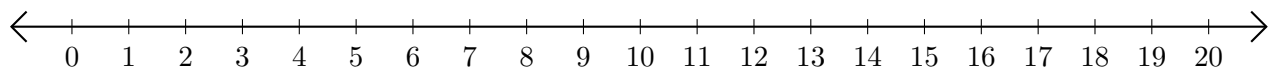
2. $20 - 19 = \underline{\quad}$



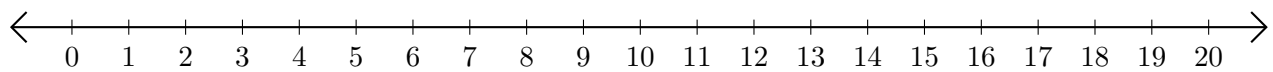
3. $20 - 11 = \underline{\quad}$



4. $16 - 12 = \underline{\quad}$



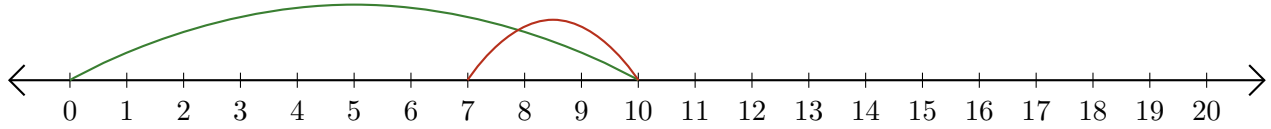
5. $16 - 4 = \underline{\quad}$



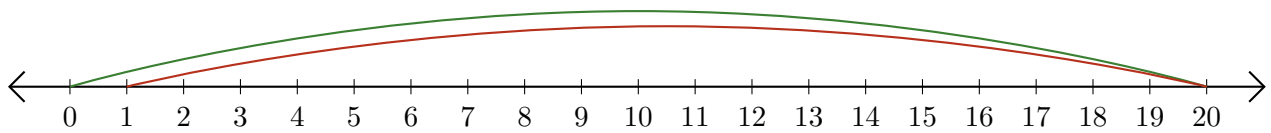
Restar en Rectas Numéricas (B) Respuestas

Use las rectas numéricas para calcular cada diferencia.

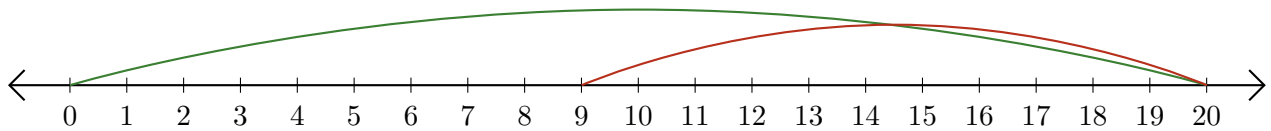
1. $10 - 3 = \underline{7}$



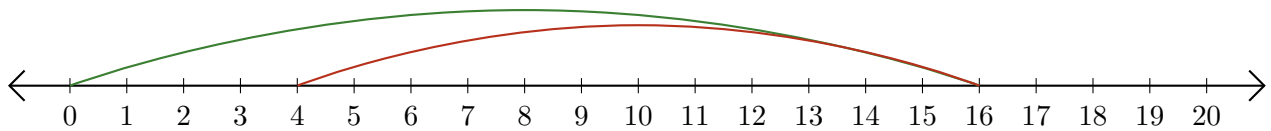
2. $20 - 19 = \underline{1}$



3. $20 - 11 = \underline{9}$



4. $16 - 12 = \underline{4}$



5. $16 - 4 = \underline{12}$

