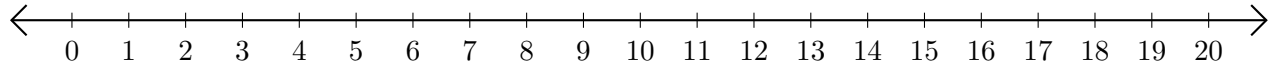


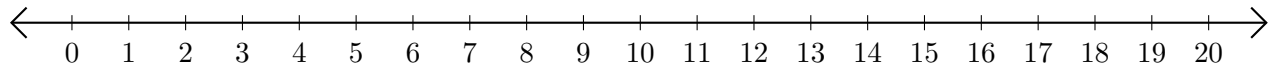
Restar en Rectas Numéricas (C)

Use las rectas numéricas para calcular cada diferencia.

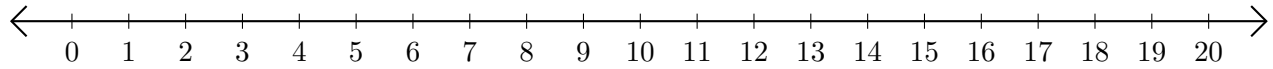
1. $14 - 12 = \underline{\quad}$



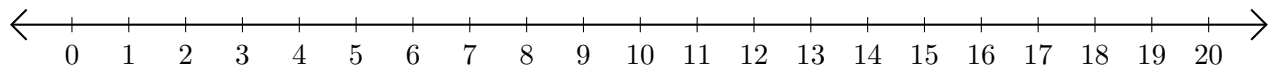
2. $19 - 10 = \underline{\quad}$



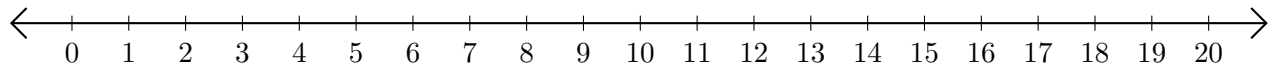
3. $19 - 5 = \underline{\quad}$



4. $19 - 18 = \underline{\quad}$



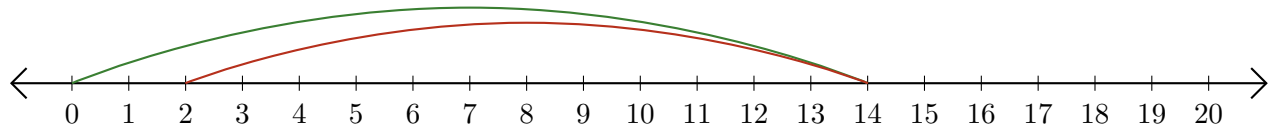
5. $14 - 13 = \underline{\quad}$



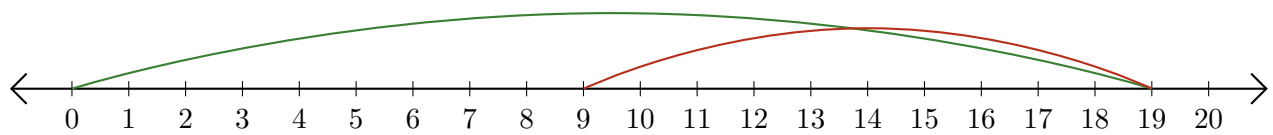
Restar en Rectas Numéricas (C) Respuestas

Use las rectas numéricas para calcular cada diferencia.

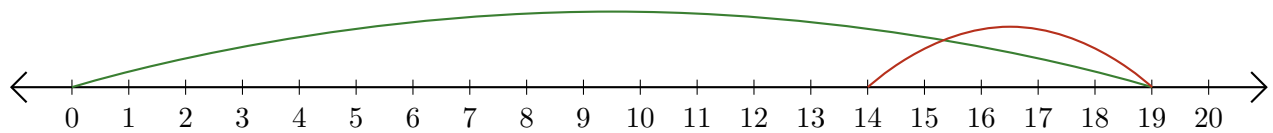
1. $14 - 12 = \underline{2}$



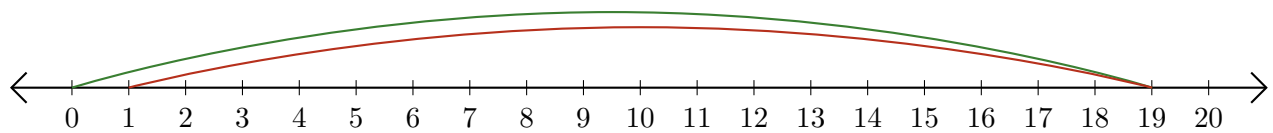
2. $19 - 10 = \underline{9}$



3. $19 - 5 = \underline{14}$



4. $19 - 18 = \underline{1}$



5. $14 - 13 = \underline{1}$

