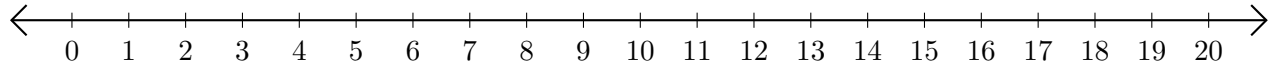


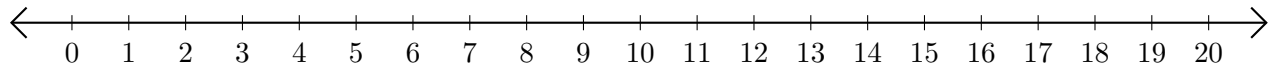
Restar en Rectas Numéricas (D)

Use las rectas numéricas para calcular cada diferencia.

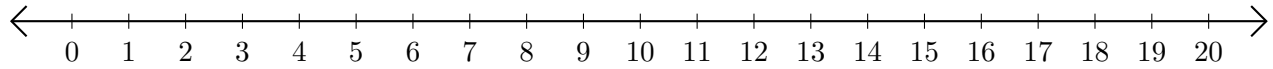
1. $7 - 4 = \underline{\quad}$



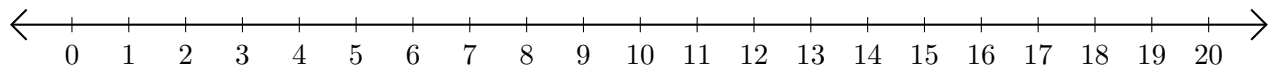
2. $17 - 3 = \underline{\quad}$



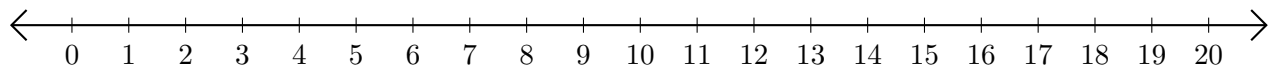
3. $16 - 2 = \underline{\quad}$



4. $15 - 8 = \underline{\quad}$




5. $8 - 7 = \underline{\quad}$



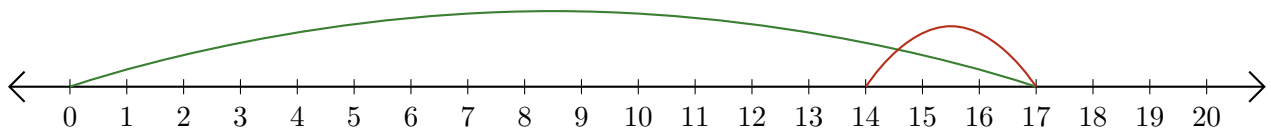
Restar en Rectas Numéricas (D) Respuestas

Use las rectas numéricas para calcular cada diferencia.

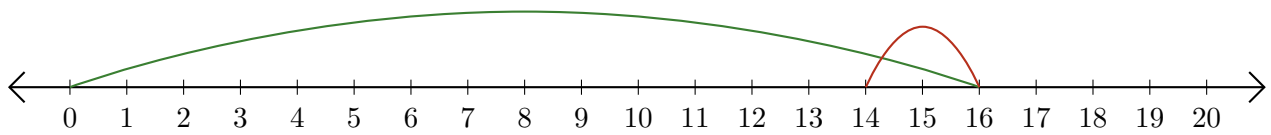
1. $7 - 4 = \underline{3}$



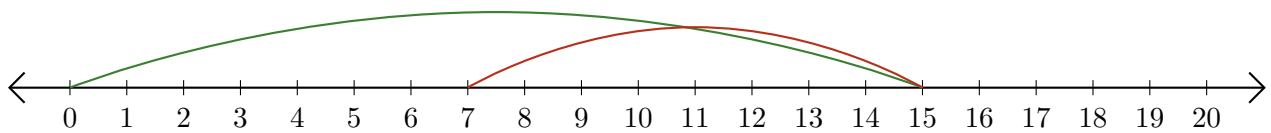
2. $17 - 3 = \underline{14}$



3. $16 - 2 = \underline{14}$



4. $15 - 8 = \underline{7}$



5. $8 - 7 = \underline{1}$

