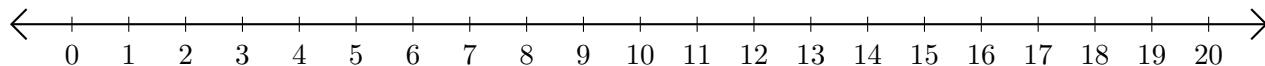


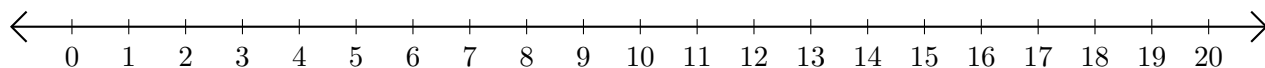
Restar en Rectas Numéricas (E)

Use las rectas numéricas para calcular cada diferencia.

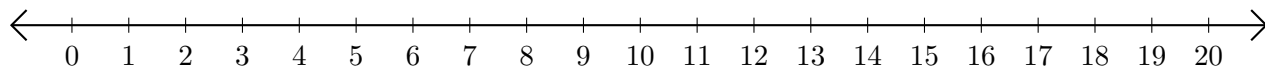
1. $17 - 11 = \underline{\quad}$



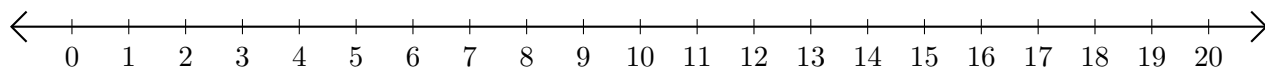
2. $19 - 18 = \underline{\quad}$



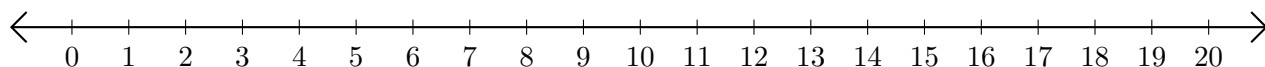
3. $17 - 7 = \underline{\quad}$



4. $20 - 17 = \underline{\quad}$



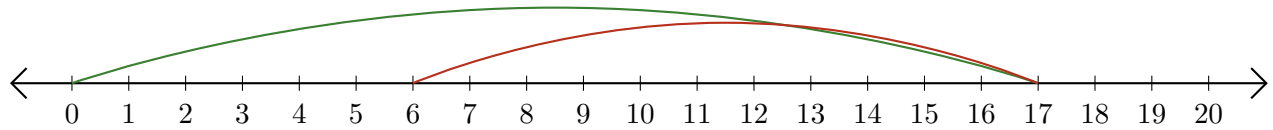
5. $20 - 3 = \underline{\quad}$



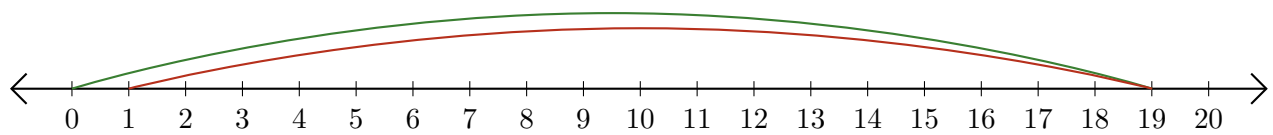
Restar en Rectas Numéricas (E) Respuestas

Use las rectas numéricas para calcular cada diferencia.

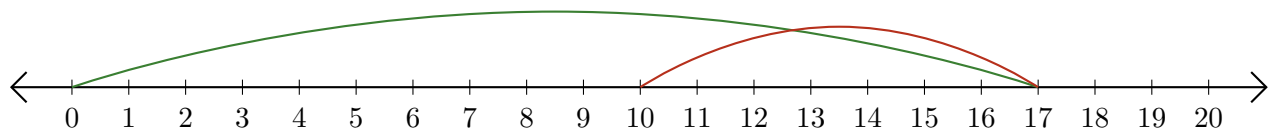
1. $17 - 11 = \underline{6}$



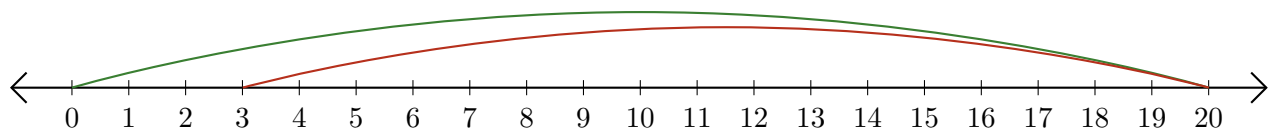
2. $19 - 18 = \underline{1}$



3. $17 - 7 = \underline{10}$



4. $20 - 17 = \underline{3}$



5. $20 - 3 = \underline{17}$

