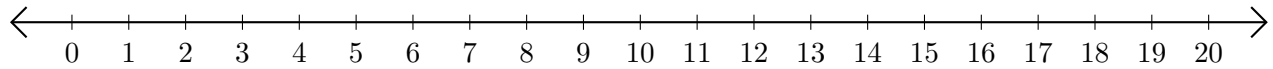


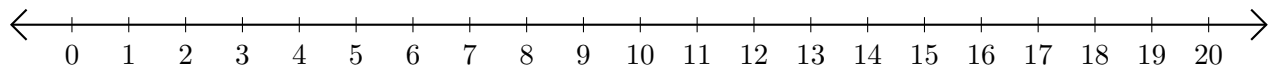
## Restar en Rectas Numéricas (F)

Use las rectas numéricas para calcular cada diferencia.

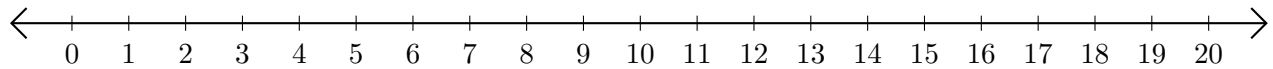
1.  $14 - 1 = \underline{\quad}$



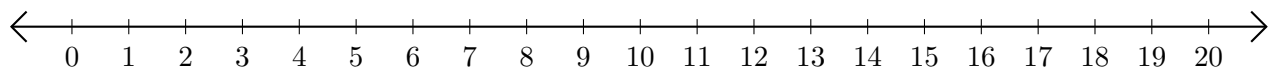
2.  $20 - 19 = \underline{\quad}$



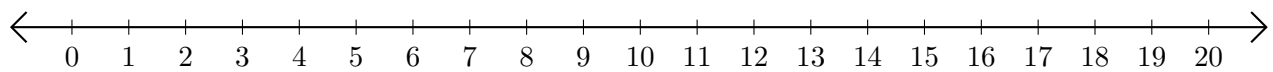
3.  $16 - 7 = \underline{\quad}$



4.  $16 - 13 = \underline{\quad}$



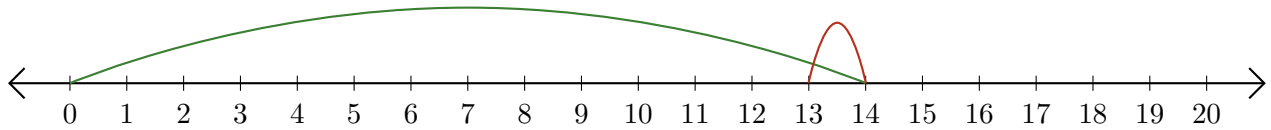
5.  $18 - 16 = \underline{\quad}$



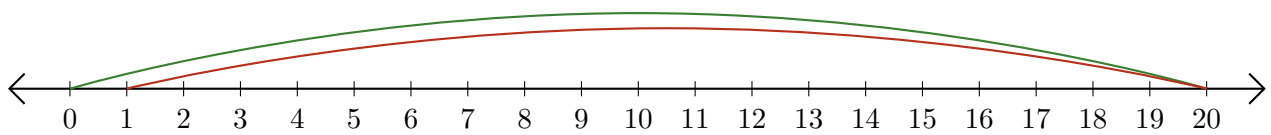
# Restar en Rectas Numéricas (F) Respuestas

Use las rectas numéricas para calcular cada diferencia.

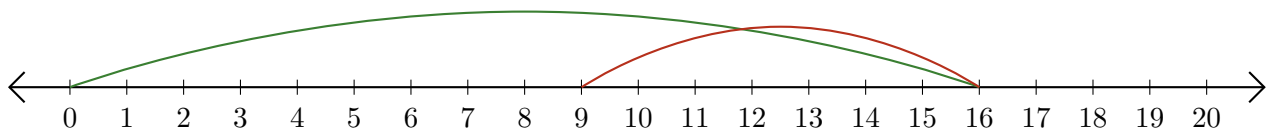
1.  $14 - 1 = \underline{13}$



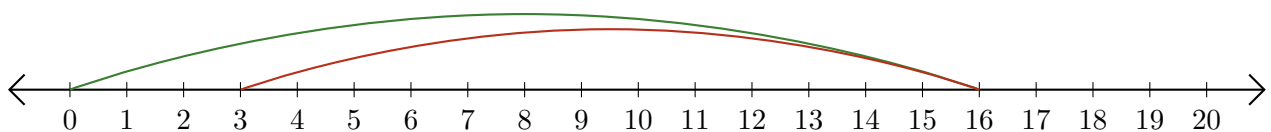
2.  $20 - 19 = \underline{1}$



3.  $16 - 7 = \underline{9}$



4.  $16 - 13 = \underline{3}$



5.  $18 - 16 = \underline{2}$

