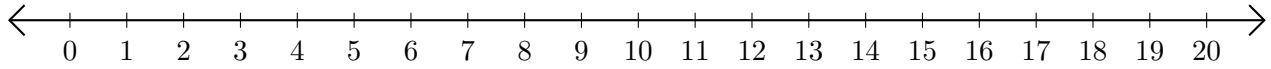


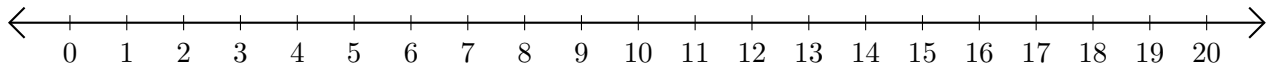
Restar en Rectas Numéricas (H)

Use las rectas numéricas para calcular cada diferencia.

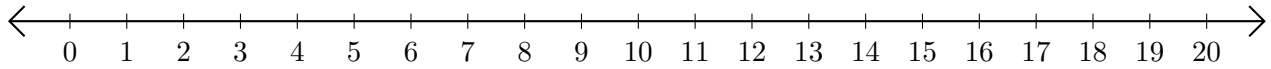
1. $19 - 18 = \underline{\quad}$



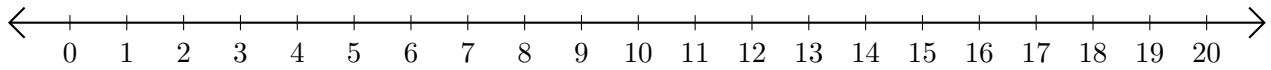
2. $8 - 6 = \underline{\quad}$



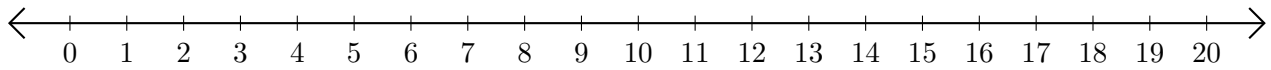
3. $14 - 3 = \underline{\quad}$



4. $20 - 16 = \underline{\quad}$



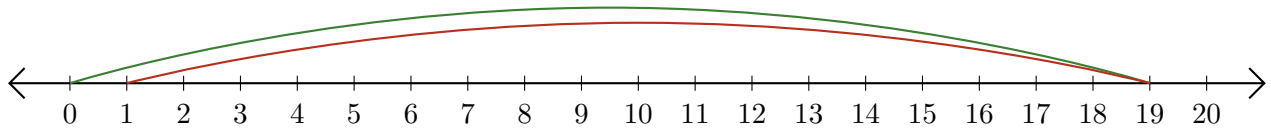
5. $10 - 2 = \underline{\quad}$



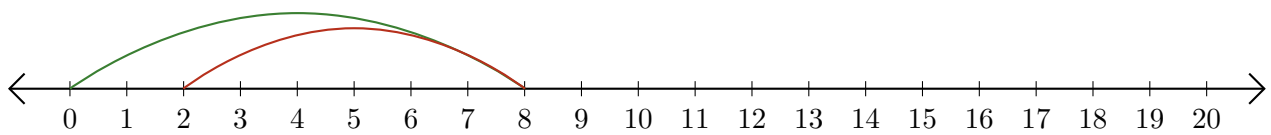
Restar en Rectas Numéricas (H) Respuestas

Use las rectas numéricas para calcular cada diferencia.

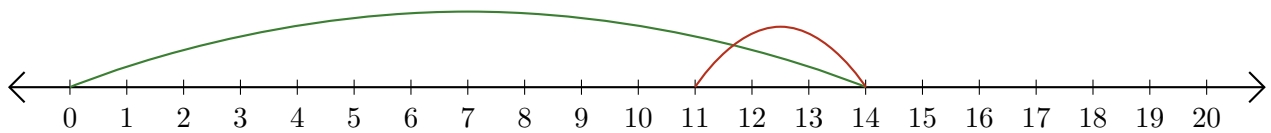
1. $19 - 18 = \underline{1}$



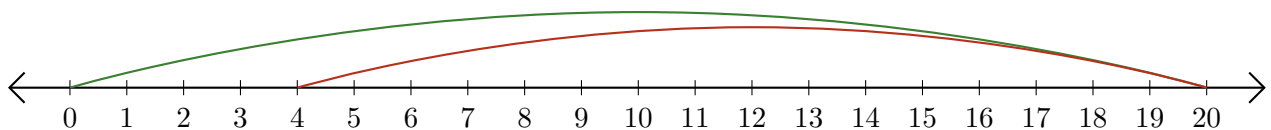
2. $8 - 6 = \underline{2}$



3. $14 - 3 = \underline{11}$



4. $20 - 16 = \underline{4}$



5. $10 - 2 = \underline{8}$

