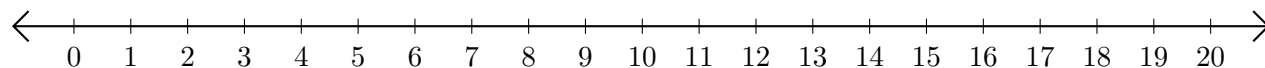


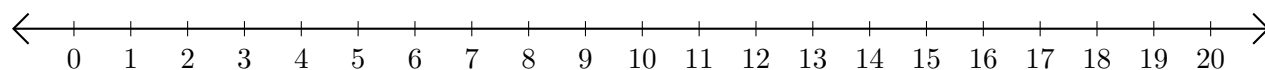
# Restar en Rectas Numéricas (I)

Use las rectas numéricas para calcular cada diferencia.

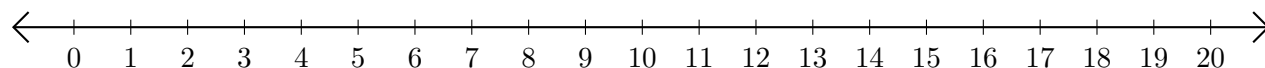
1.  $9 - 7 = \underline{\quad}$



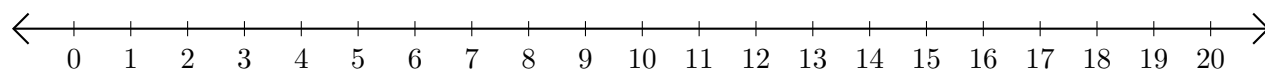
2.  $19 - 17 = \underline{\quad}$



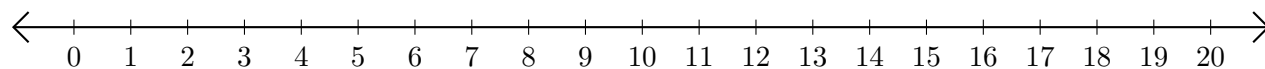
3.  $17 - 6 = \underline{\quad}$



4.  $6 - 3 = \underline{\quad}$



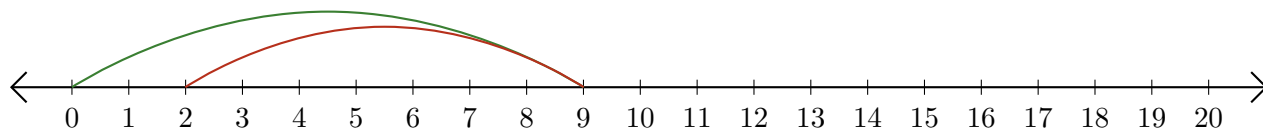
5.  $17 - 14 = \underline{\quad}$



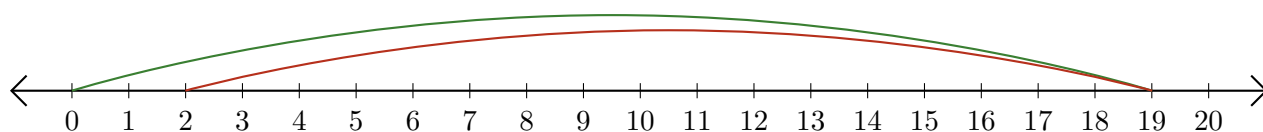
# Restar en Rectas Numéricas (I) Respuestas

Use las rectas numéricas para calcular cada diferencia.

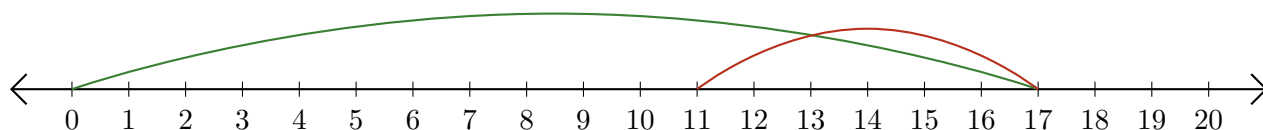
1.  $9 - 7 = \underline{2}$



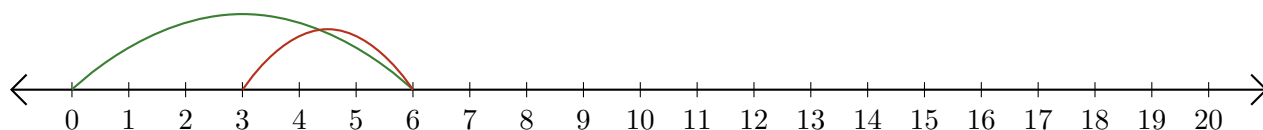
2.  $19 - 17 = \underline{2}$



3.  $17 - 6 = \underline{11}$



4.  $6 - 3 = \underline{3}$



5.  $17 - 14 = \underline{3}$

