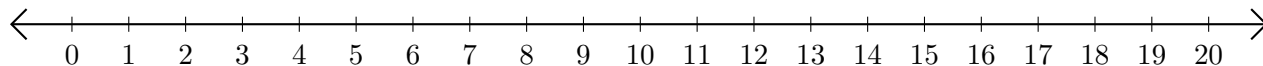


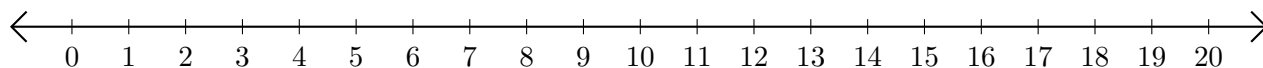
Restar en Rectas Numéricas (J)

Use las rectas numéricas para calcular cada diferencia.

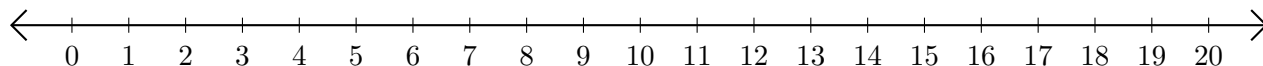
1. $19 - 16 = \underline{\quad}$



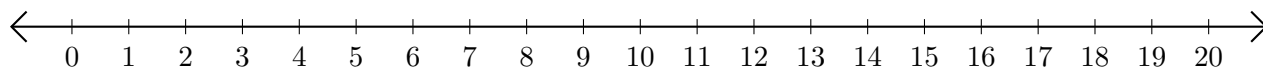
2. $15 - 12 = \underline{\quad}$



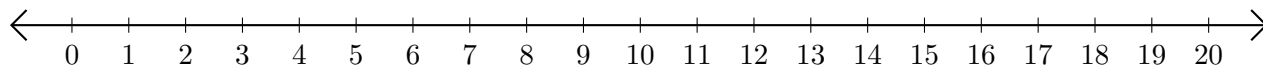
3. $18 - 17 = \underline{\quad}$



4. $11 - 10 = \underline{\quad}$



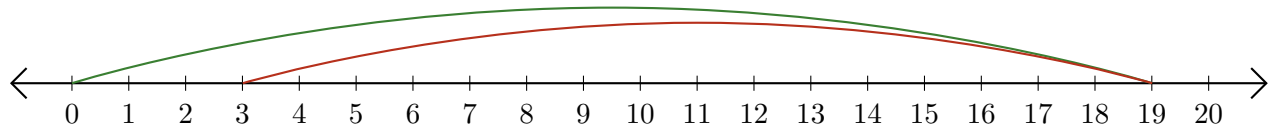
5. $15 - 8 = \underline{\quad}$



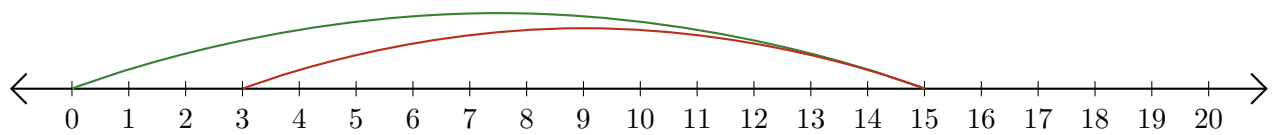
Restar en Rectas Numéricas (J) Respuestas

Use las rectas numéricas para calcular cada diferencia.

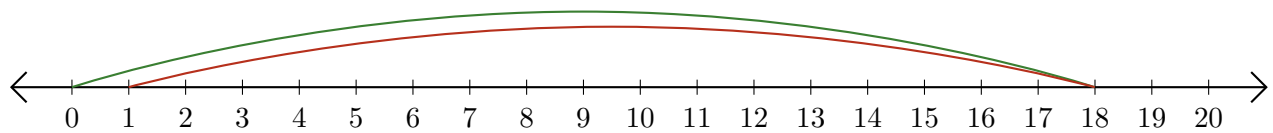
1. $19 - 16 = \underline{3}$



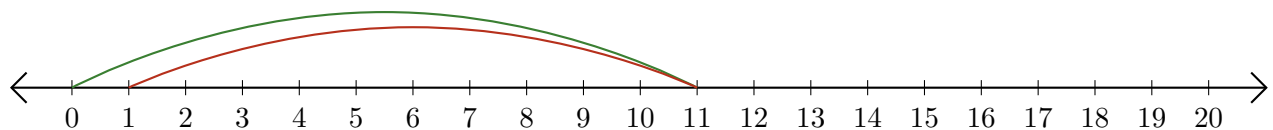
2. $15 - 12 = \underline{3}$



3. $18 - 17 = \underline{1}$



4. $11 - 10 = \underline{1}$



5. $15 - 8 = \underline{7}$

