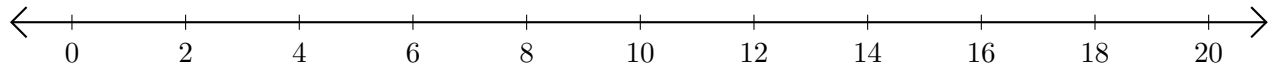


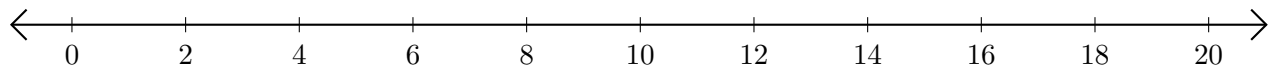
Restar en Rectas Numéricas (A)

Use las rectas numéricas para calcular cada diferencia.

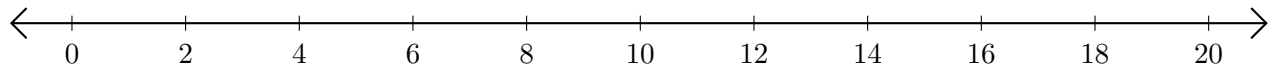
1. $20 - 14 = \underline{\quad}$



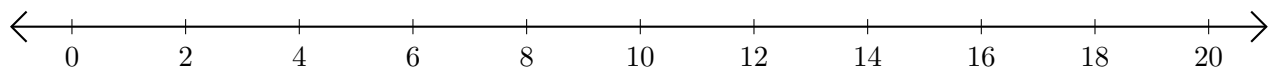
2. $20 - 8 = \underline{\quad}$



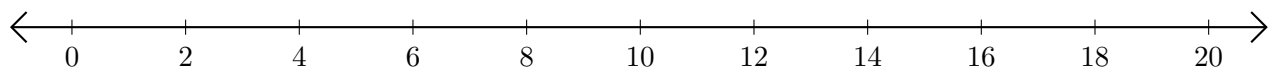
3. $12 - 6 = \underline{\quad}$



4. $14 - 12 = \underline{\quad}$



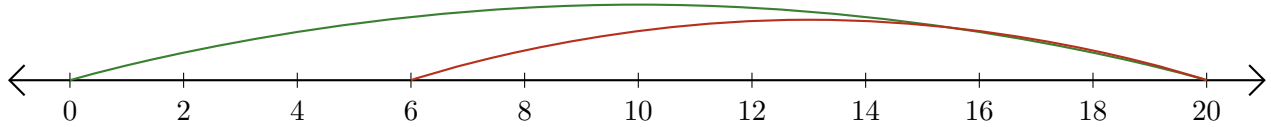
5. $6 - 2 = \underline{\quad}$



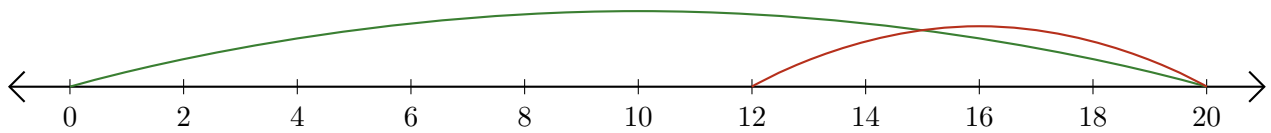
Restar en Rectas Numéricas (A) Respuestas

Use las rectas numéricas para calcular cada diferencia.

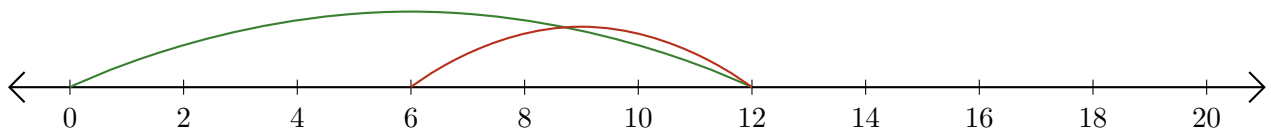
1. $20 - 14 = \underline{6}$



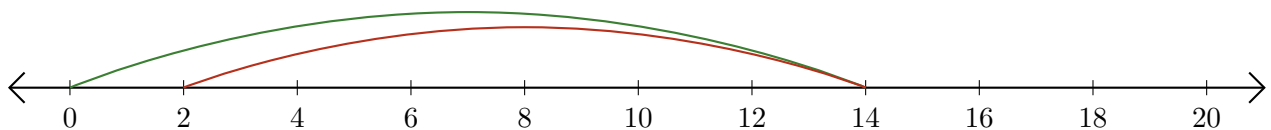
2. $20 - 8 = \underline{12}$



3. $12 - 6 = \underline{6}$



4. $14 - 12 = \underline{2}$



5. $6 - 2 = \underline{4}$

