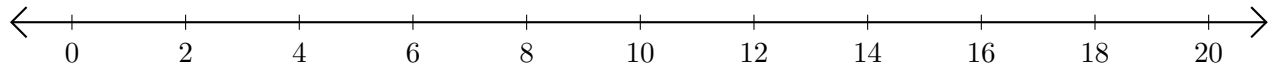


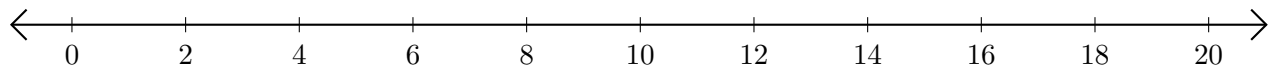
Restar en Rectas Numéricas (B)

Use las rectas numéricas para calcular cada diferencia.

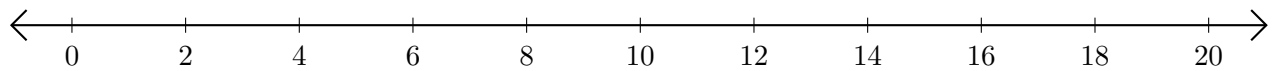
1. $20 - 14 = \underline{\quad}$



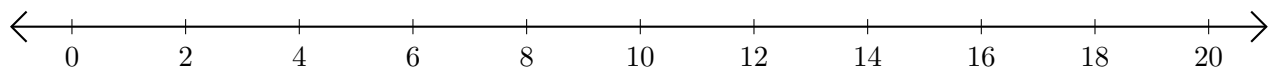
2. $14 - 10 = \underline{\quad}$



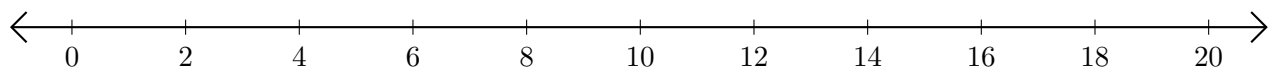
3. $6 - 2 = \underline{\quad}$



4. $20 - 18 = \underline{\quad}$



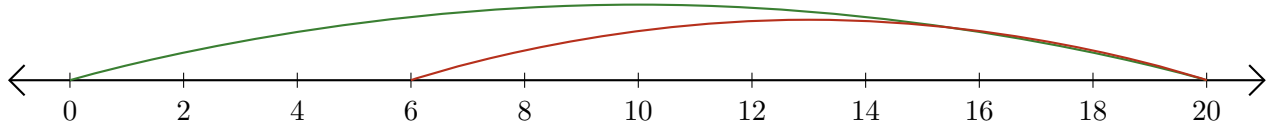
5. $10 - 4 = \underline{\quad}$



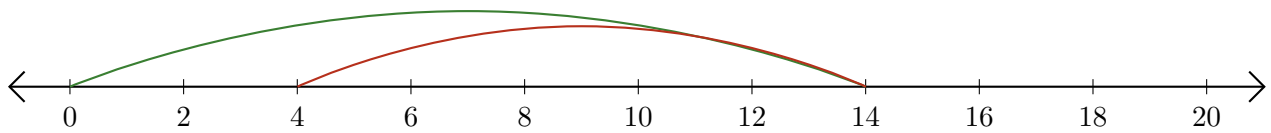
Restar en Rectas Numéricas (B) Respuestas

Use las rectas numéricas para calcular cada diferencia.

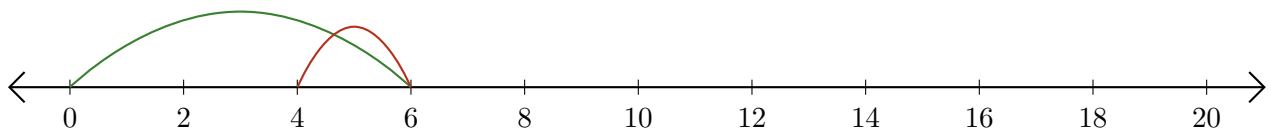
1. $20 - 14 = \underline{6}$



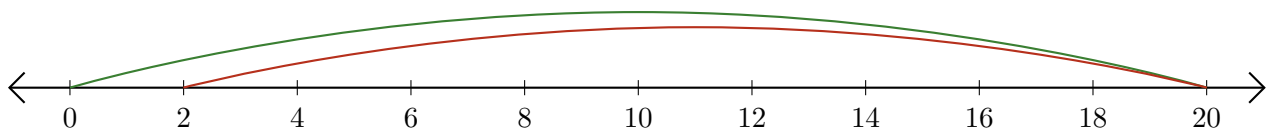
2. $14 - 10 = \underline{4}$



3. $6 - 2 = \underline{4}$



4. $20 - 18 = \underline{2}$



5. $10 - 4 = \underline{6}$

