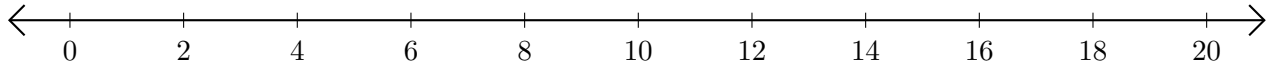


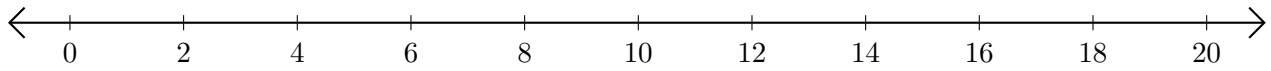
Restar en Rectas Numéricas (H)

Use las rectas numéricas para calcular cada diferencia.

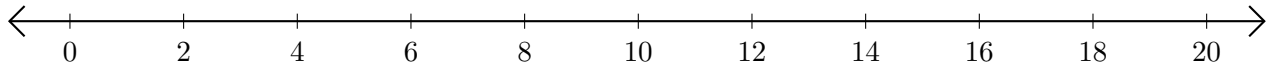
1. $18 - 14 = \underline{\quad}$



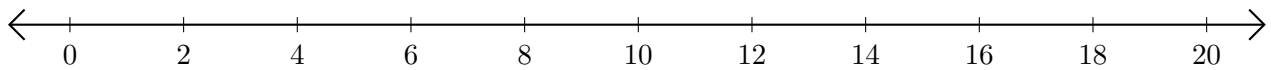
2. $20 - 10 = \underline{\quad}$



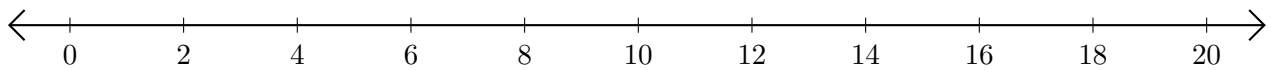
3. $12 - 2 = \underline{\quad}$



4. $20 - 16 = \underline{\quad}$



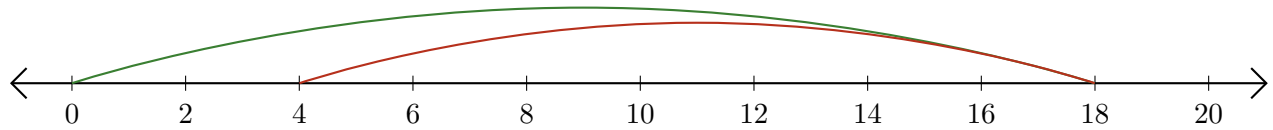
5. $14 - 12 = \underline{\quad}$



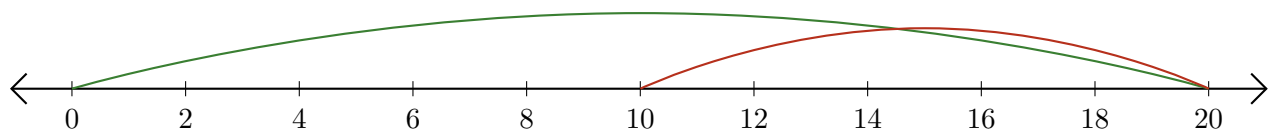
Restar en Rectas Numéricas (H) Respuestas

Use las rectas numéricas para calcular cada diferencia.

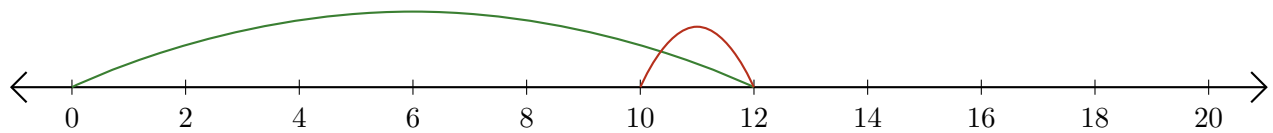
1. $18 - 14 = \underline{4}$



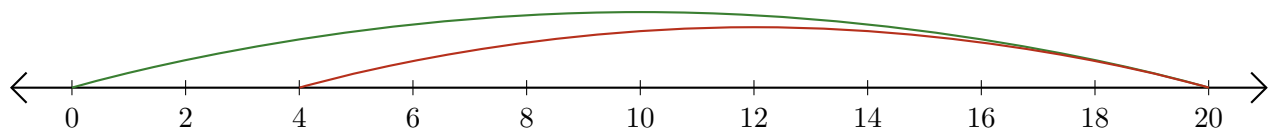
2. $20 - 10 = \underline{10}$



3. $12 - 2 = \underline{10}$



4. $20 - 16 = \underline{4}$



5. $14 - 12 = \underline{2}$

