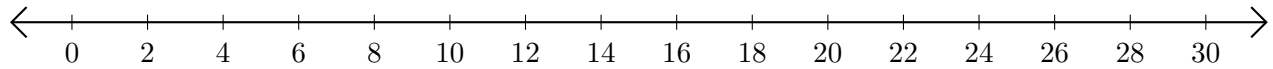


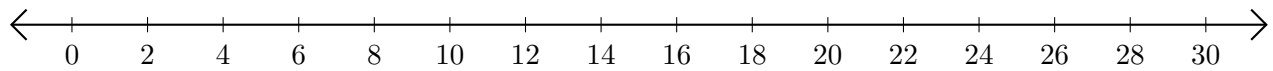
## Restar en Rectas Numéricas (B)

Use las rectas numéricas para calcular cada diferencia.

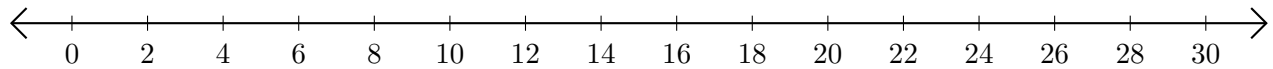
1.  $18 - 14 = \underline{\quad}$



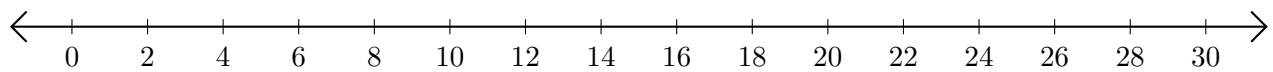
2.  $4 - 2 = \underline{\quad}$



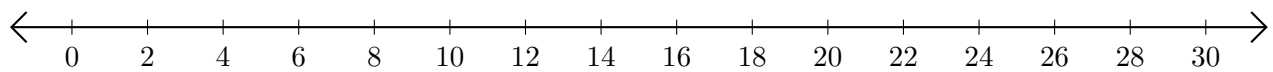
3.  $6 - 4 = \underline{\quad}$



4.  $28 - 24 = \underline{\quad}$



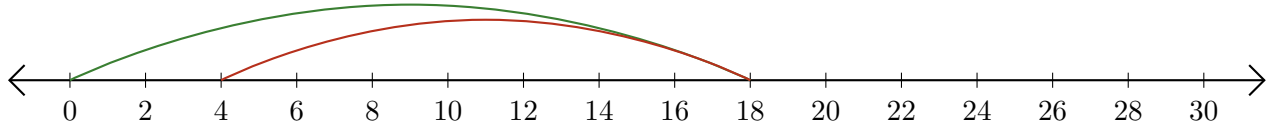
5.  $26 - 12 = \underline{\quad}$




# Restar en Rectas Numéricas (B) Respuestas

Use las rectas numéricas para calcular cada diferencia.

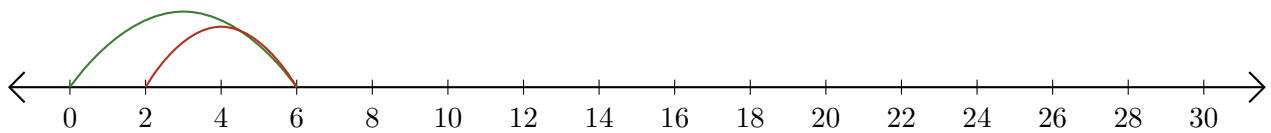
1.  $18 - 14 = \underline{4}$



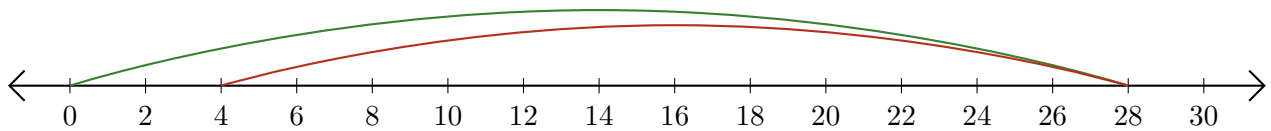
2.  $4 - 2 = \underline{2}$



3.  $6 - 4 = \underline{2}$



4.  $28 - 24 = \underline{4}$



5.  $26 - 12 = \underline{14}$

