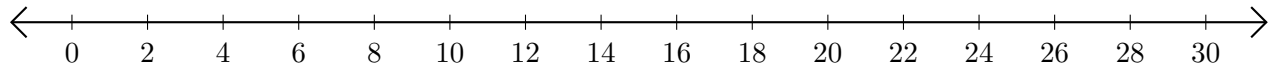


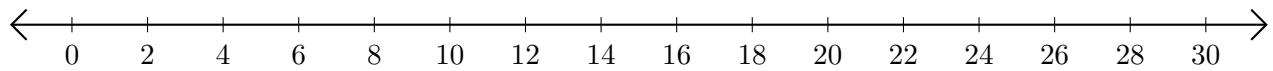
Restar en Rectas Numéricas (C)

Use las rectas numéricas para calcular cada diferencia.

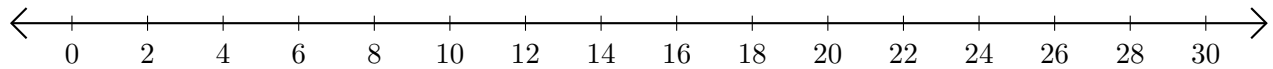
1. $20 - 12 = \underline{\quad}$



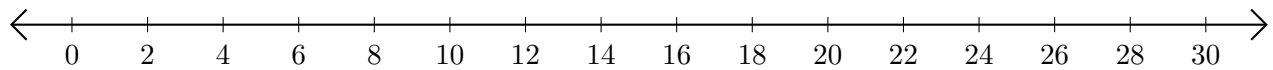
2. $22 - 2 = \underline{\quad}$



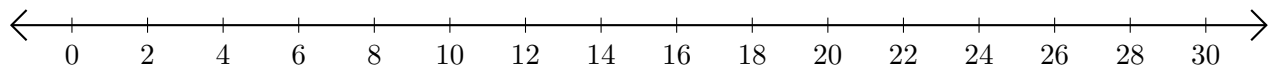
3. $20 - 10 = \underline{\quad}$



4. $28 - 4 = \underline{\quad}$



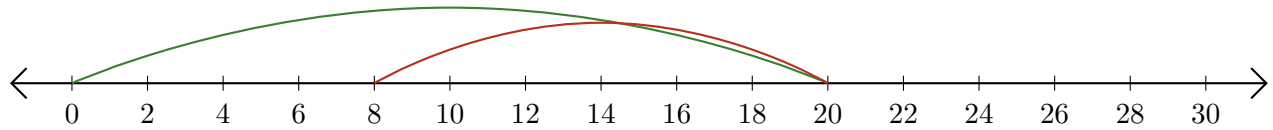
5. $30 - 28 = \underline{\quad}$



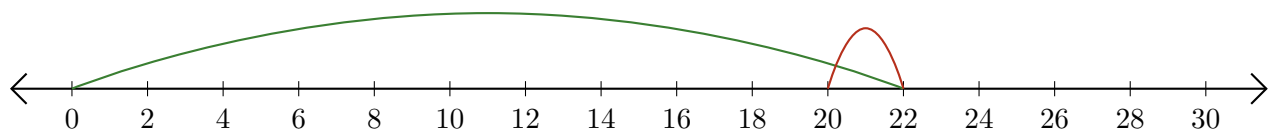
Restar en Rectas Numéricas (C) Respuestas

Use las rectas numéricas para calcular cada diferencia.

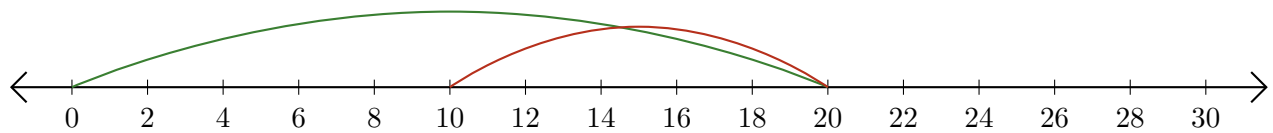
1. $20 - 12 = \underline{8}$



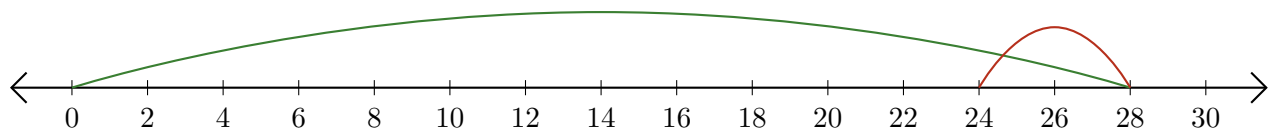
2. $22 - 2 = \underline{20}$



3. $20 - 10 = \underline{10}$



4. $28 - 4 = \underline{24}$



5. $30 - 28 = \underline{2}$

