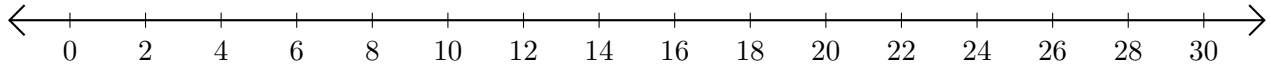


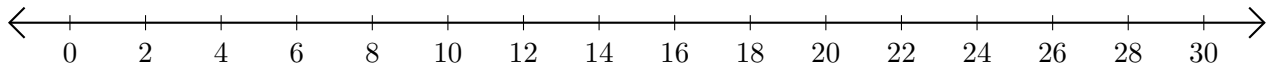
Restar en Rectas Numéricas (D)

Use las rectas numéricas para calcular cada diferencia.

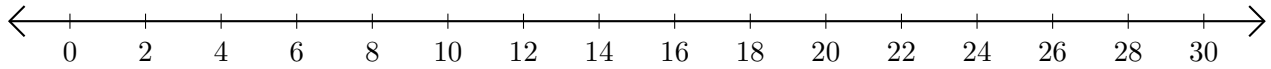
1. $26 - 20 = \underline{\quad}$



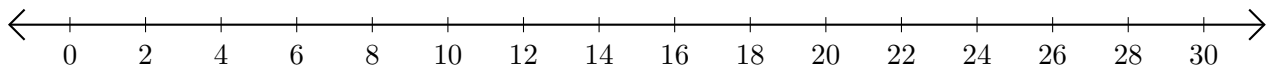
2. $28 - 24 = \underline{\quad}$



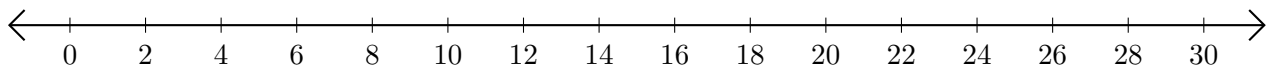
3. $8 - 4 = \underline{\quad}$



4. $28 - 14 = \underline{\quad}$



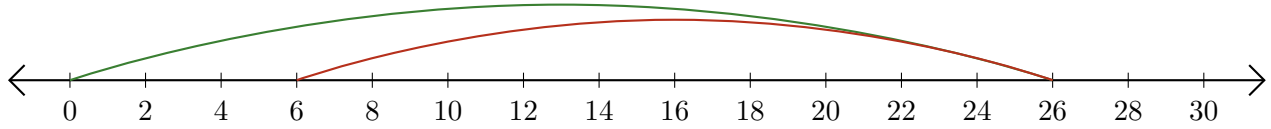
5. $20 - 6 = \underline{\quad}$



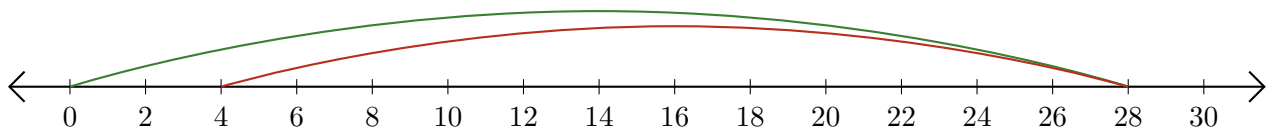
Restar en Rectas Numéricas (D) Respuestas

Use las rectas numéricas para calcular cada diferencia.

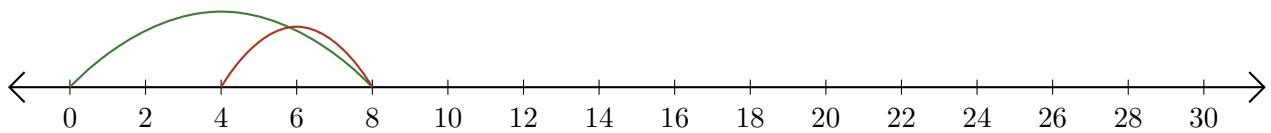
1. $26 - 20 = \underline{6}$



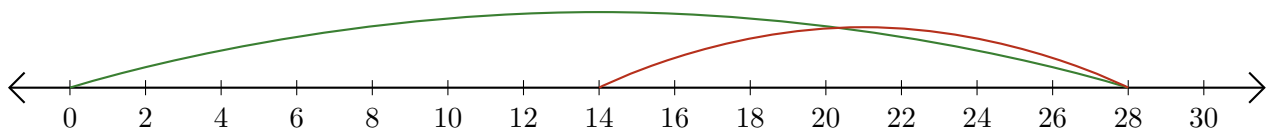
2. $28 - 24 = \underline{4}$



3. $8 - 4 = \underline{4}$



4. $28 - 14 = \underline{14}$



5. $20 - 6 = \underline{14}$

