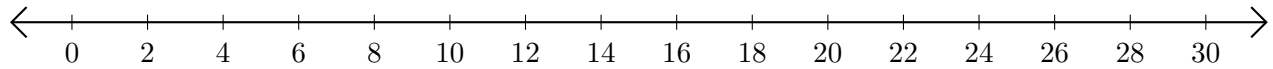


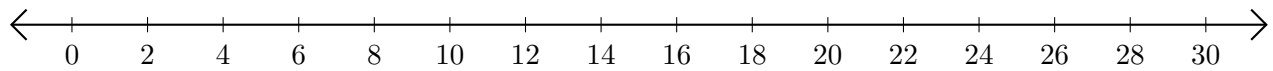
Restar en Rectas Numéricas (E)

Use las rectas numéricas para calcular cada diferencia.

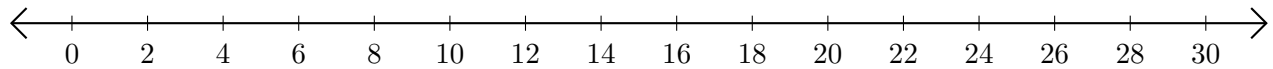
1. $30 - 22 = \underline{\quad}$



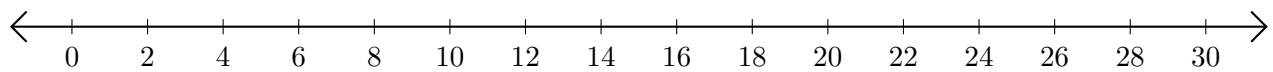
2. $22 - 16 = \underline{\quad}$



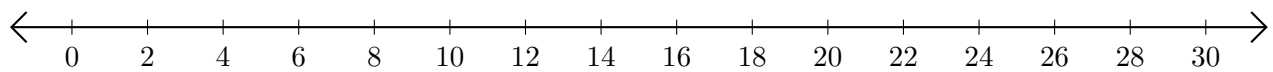
3. $22 - 10 = \underline{\quad}$



4. $30 - 26 = \underline{\quad}$



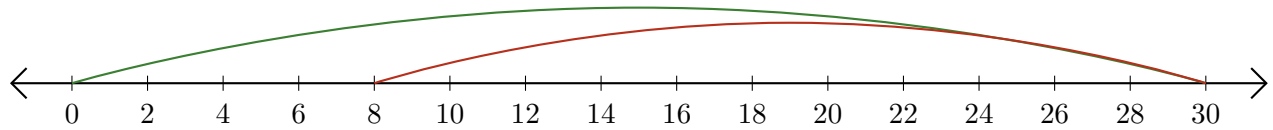
5. $30 - 14 = \underline{\quad}$



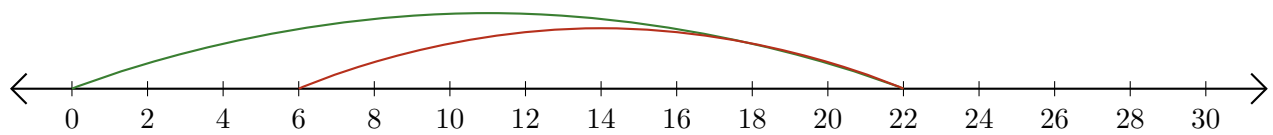
Restar en Rectas Numéricas (E) Respuestas

Use las rectas numéricas para calcular cada diferencia.

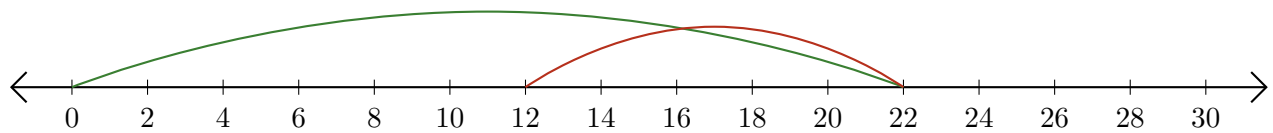
1. $30 - 22 = \underline{8}$



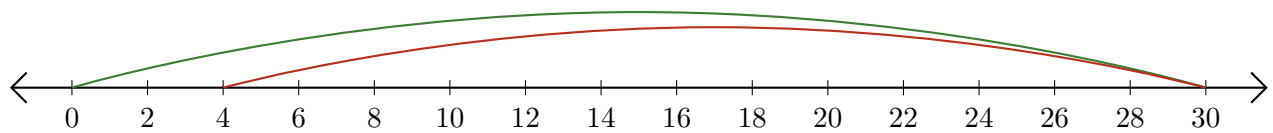
2. $22 - 16 = \underline{6}$



3. $22 - 10 = \underline{12}$



4. $30 - 26 = \underline{4}$



5. $30 - 14 = \underline{16}$

