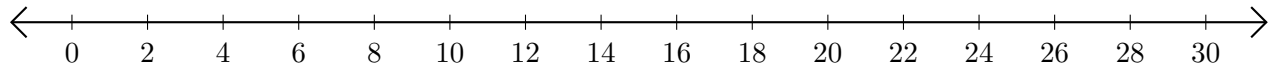


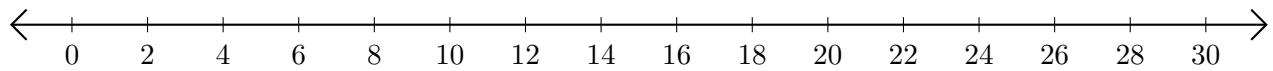
Restar en Rectas Numéricas (F)

Use las rectas numéricas para calcular cada diferencia.

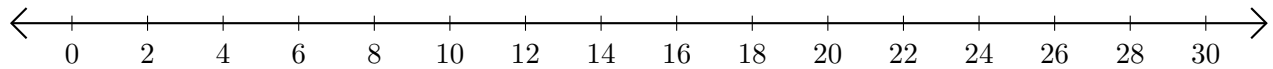
1. $28 - 14 = \underline{\quad}$



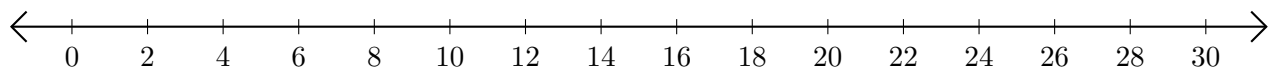
2. $30 - 26 = \underline{\quad}$



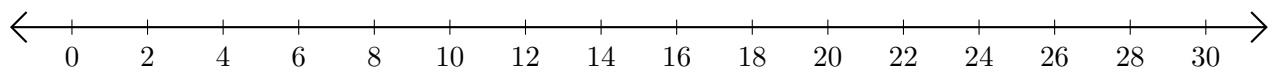
3. $16 - 4 = \underline{\quad}$



4. $26 - 22 = \underline{\quad}$



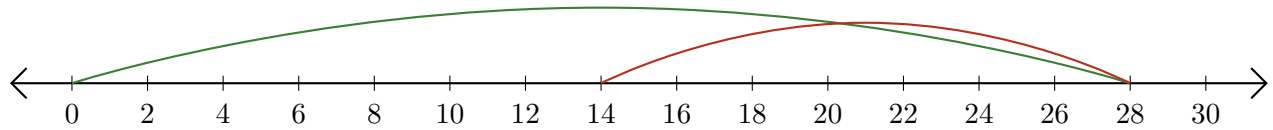
5. $20 - 2 = \underline{\quad}$



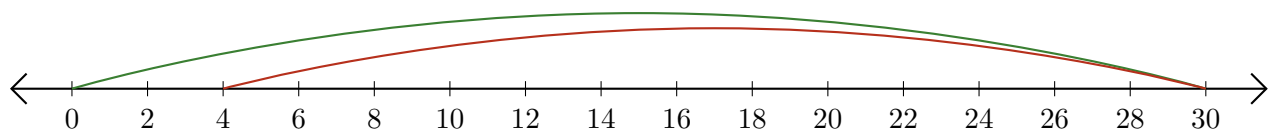
Restar en Rectas Numéricas (F) Respuestas

Use las rectas numéricas para calcular cada diferencia.

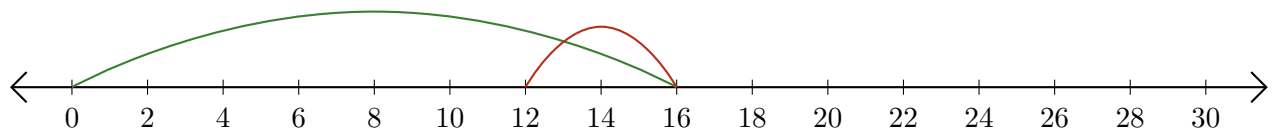
1. $28 - 14 = \underline{14}$



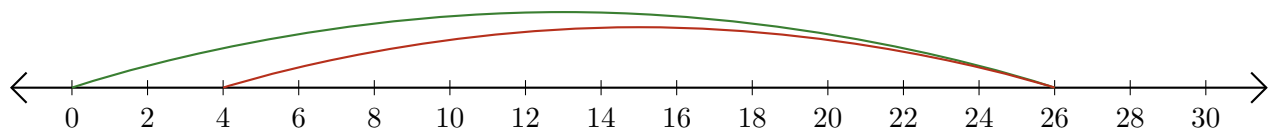
2. $30 - 26 = \underline{4}$



3. $16 - 4 = \underline{12}$



4. $26 - 22 = \underline{4}$



5. $20 - 2 = \underline{18}$

