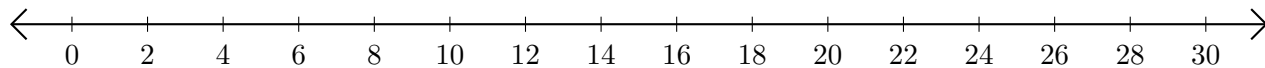


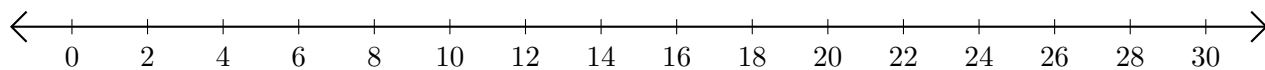
## Restar en Rectas Numéricas (G)

Use las rectas numéricas para calcular cada diferencia.

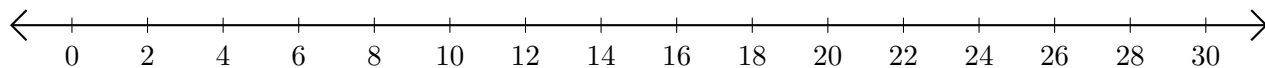
1.  $28 - 14 = \underline{\quad}$



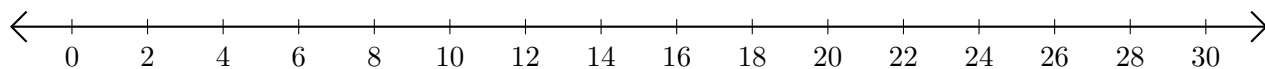
2.  $22 - 18 = \underline{\quad}$



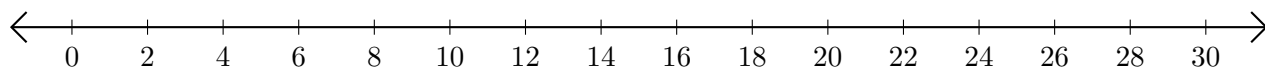
3.  $12 - 10 = \underline{\quad}$



4.  $30 - 20 = \underline{\quad}$



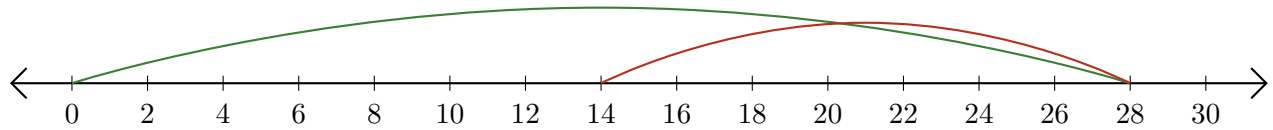
5.  $16 - 2 = \underline{\quad}$



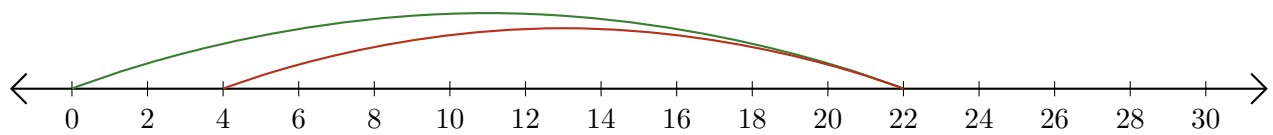
# Restar en Rectas Numéricas (G) Respuestas

Use las rectas numéricas para calcular cada diferencia.


1.  $28 - 14 = \underline{14}$



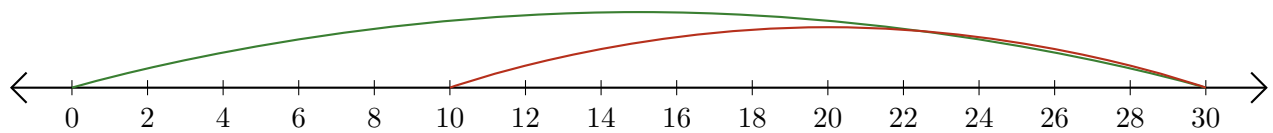
2.  $22 - 18 = \underline{4}$



3.  $12 - 10 = \underline{2}$



4.  $30 - 20 = \underline{10}$



5.  $16 - 2 = \underline{14}$

