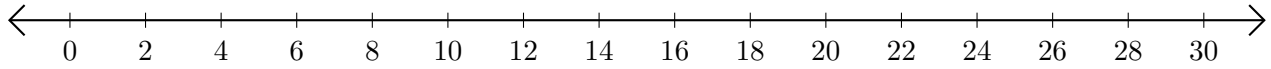


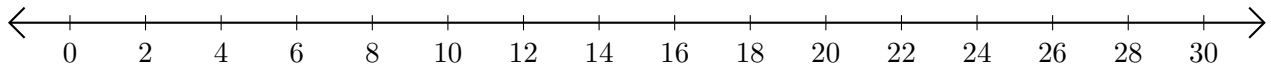
Restar en Rectas Numéricas (H)

Use las rectas numéricas para calcular cada diferencia.

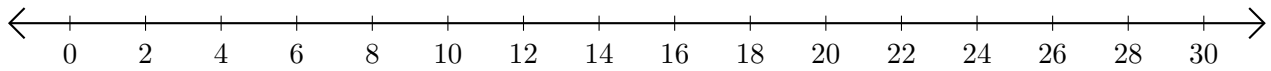
1. $26 - 16 = \underline{\quad}$



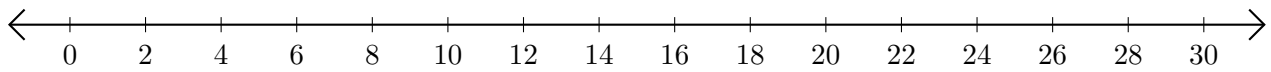
2. $16 - 14 = \underline{\quad}$



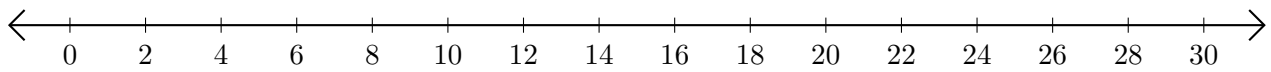
3. $28 - 2 = \underline{\quad}$



4. $30 - 28 = \underline{\quad}$



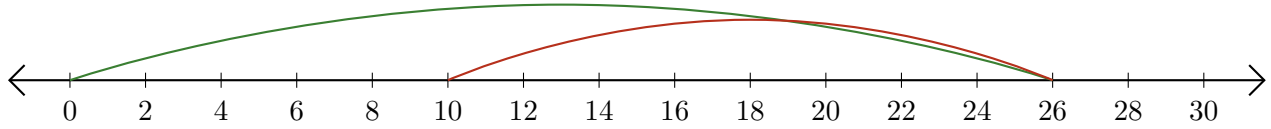
5. $16 - 8 = \underline{\quad}$



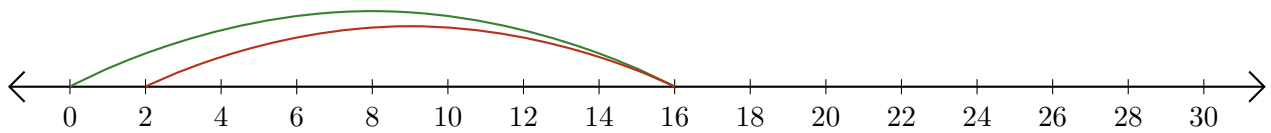
Restar en Rectas Numéricas (H) Respuestas

Use las rectas numéricas para calcular cada diferencia.

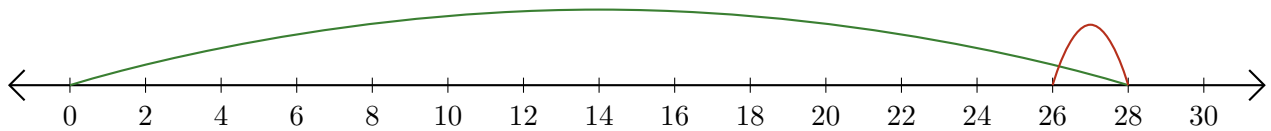
1. $26 - 16 = \underline{10}$



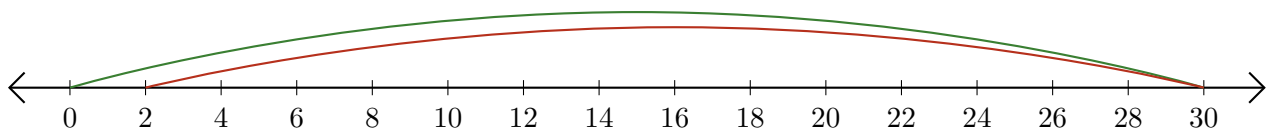
2. $16 - 14 = \underline{2}$



3. $28 - 2 = \underline{26}$



4. $30 - 28 = \underline{2}$



5. $16 - 8 = \underline{8}$

