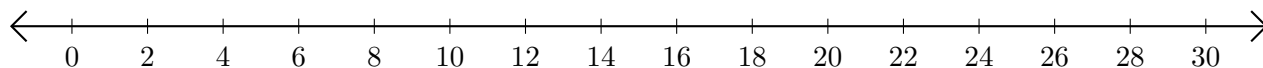


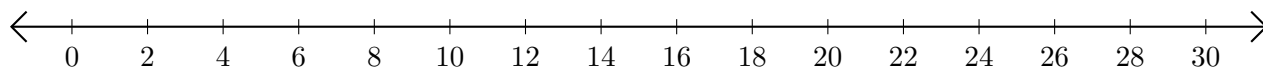
Restar en Rectas Numéricas (I)

Use las rectas numéricas para calcular cada diferencia.

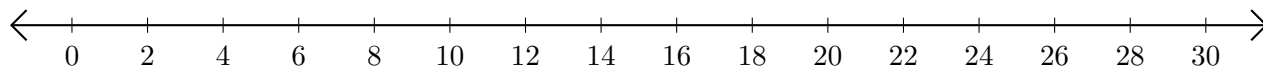
1. $18 - 10 = \underline{\quad}$



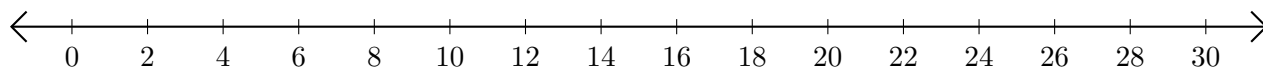
2. $26 - 8 = \underline{\quad}$



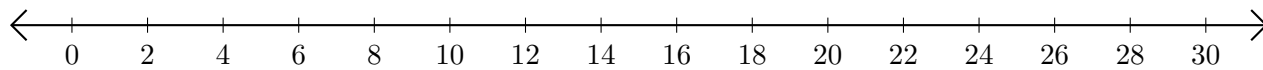
3. $10 - 2 = \underline{\quad}$



4. $26 - 4 = \underline{\quad}$



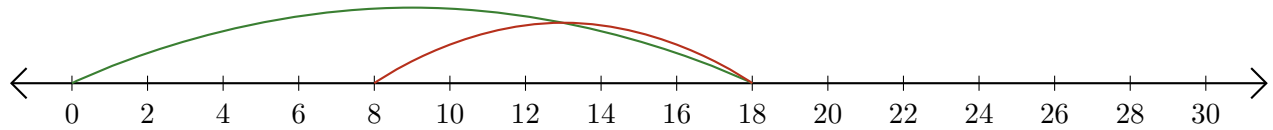
5. $24 - 22 = \underline{\quad}$



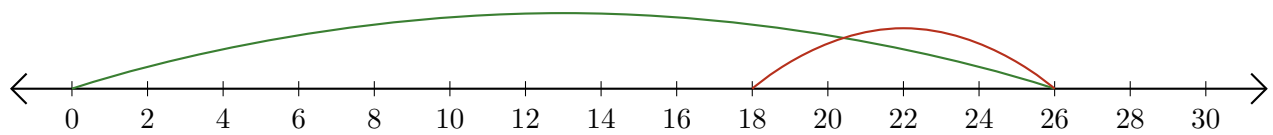
Restar en Rectas Numéricas (I) Respuestas

Use las rectas numéricas para calcular cada diferencia.


1. $18 - 10 = \underline{8}$



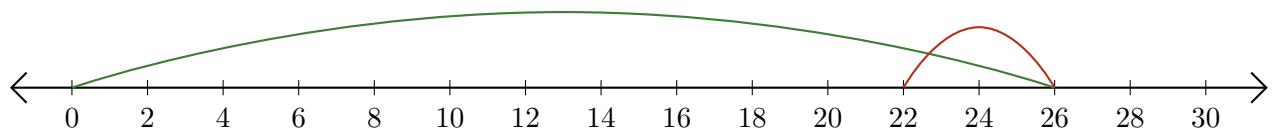
2. $26 - 8 = \underline{18}$



3. $10 - 2 = \underline{8}$



4. $26 - 4 = \underline{22}$



5. $24 - 22 = \underline{2}$

