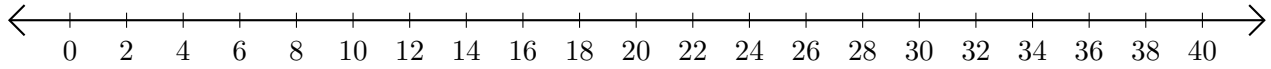


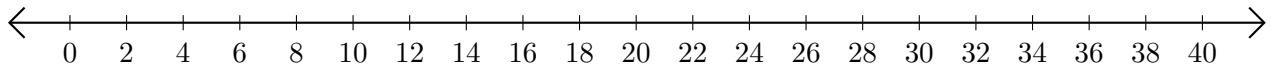
Restar en Rectas Numéricas (A)

Use las rectas numéricas para calcular cada diferencia.

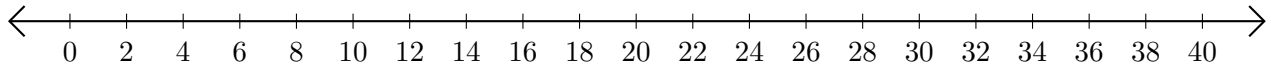
1. $30 - 24 = \underline{\quad}$



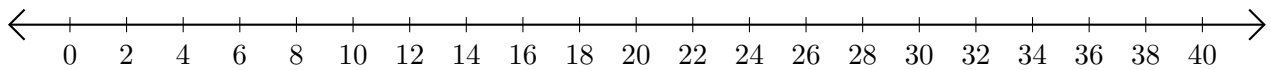
2. $38 - 28 = \underline{\quad}$



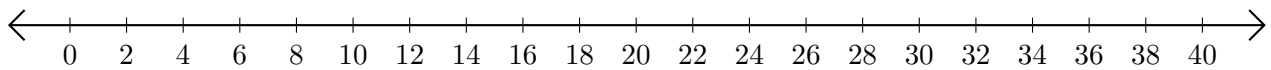
3. $36 - 34 = \underline{\quad}$



4. $40 - 26 = \underline{\quad}$



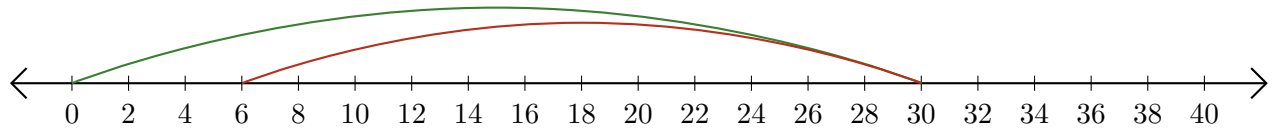
5. $30 - 16 = \underline{\quad}$



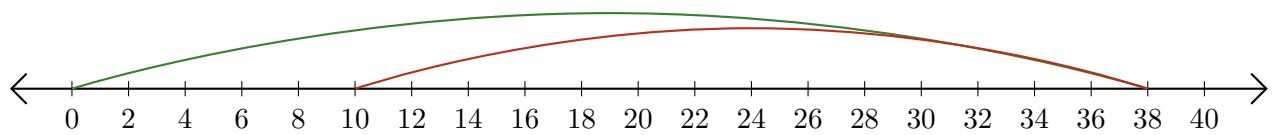
Restar en Rectas Numéricas (A) Respuestas

Use las rectas numéricas para calcular cada diferencia.

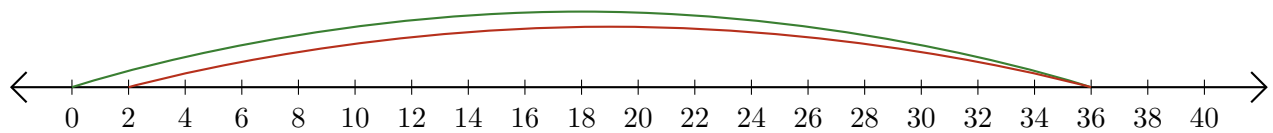
1. $30 - 24 = \underline{6}$



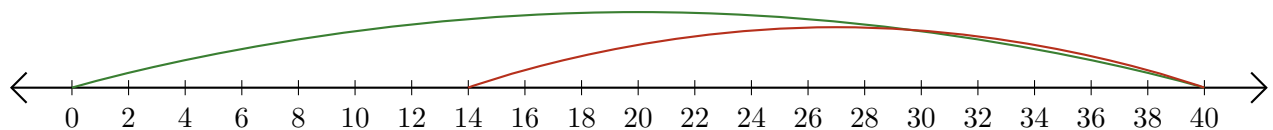
2. $38 - 28 = \underline{10}$



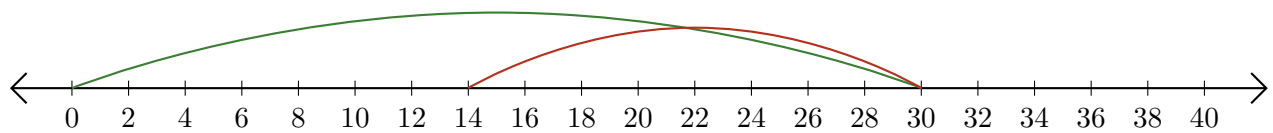
3. $36 - 34 = \underline{2}$



4. $40 - 26 = \underline{14}$



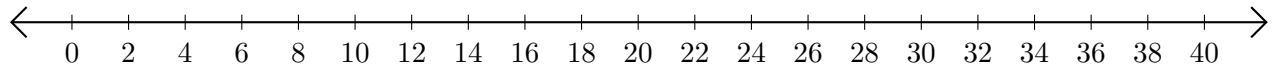
5. $30 - 16 = \underline{14}$



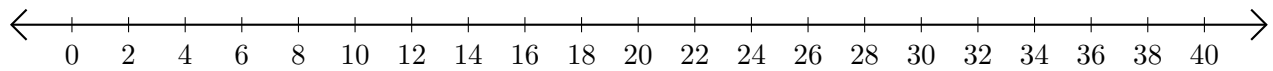
Restar en Rectas Numéricas (B)

Use las rectas numéricas para calcular cada diferencia.

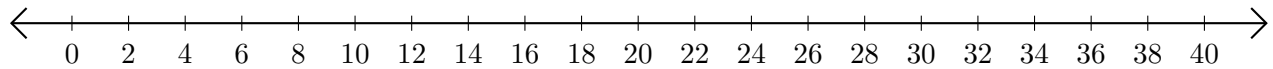
1. $20 - 12 = \underline{\quad}$



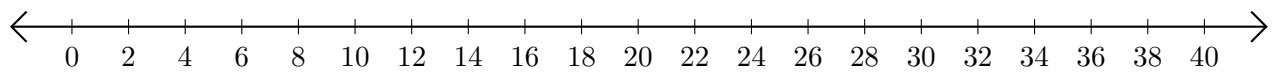
2. $36 - 32 = \underline{\quad}$



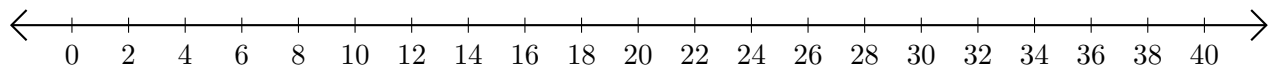
3. $38 - 36 = \underline{\quad}$



4. $32 - 28 = \underline{\quad}$



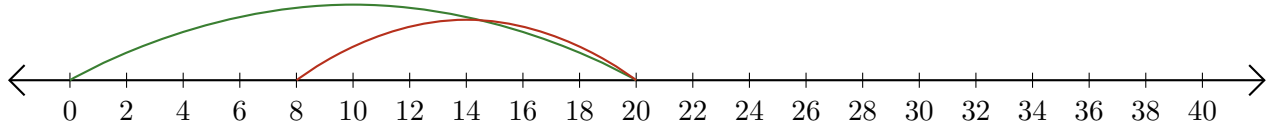
5. $22 - 2 = \underline{\quad}$



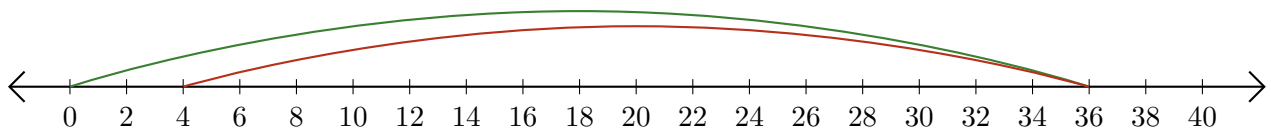
Restar en Rectas Numéricas (B) Respuestas

Use las rectas numéricas para calcular cada diferencia.

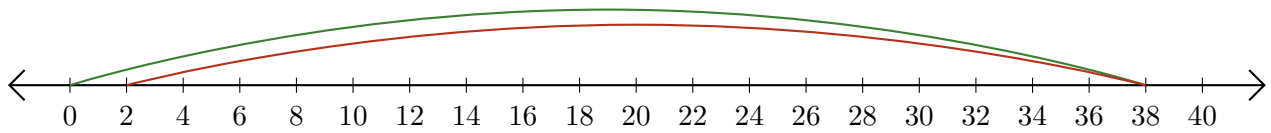
1. $20 - 12 = \underline{8}$



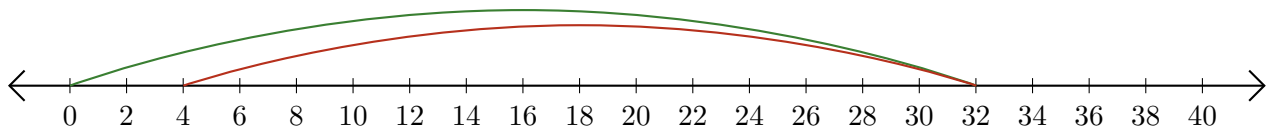
2. $36 - 32 = \underline{4}$



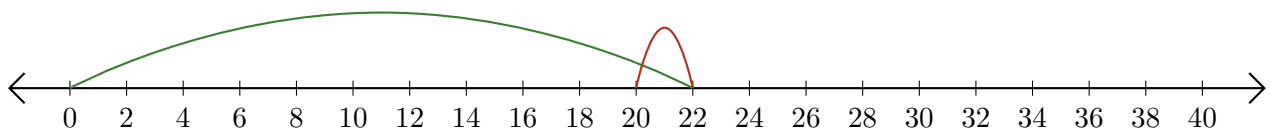
3. $38 - 36 = \underline{2}$



4. $32 - 28 = \underline{4}$



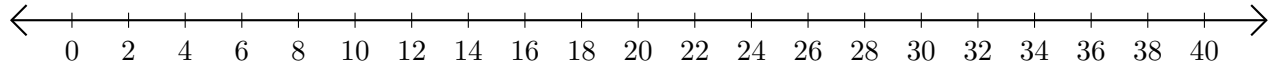
5. $22 - 2 = \underline{20}$



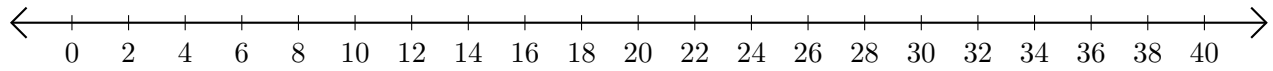
Restar en Rectas Numéricas (C)

Use las rectas numéricas para calcular cada diferencia.

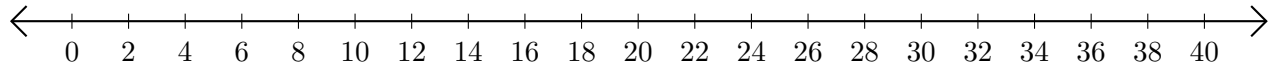
1. $40 - 38 = \underline{\quad}$



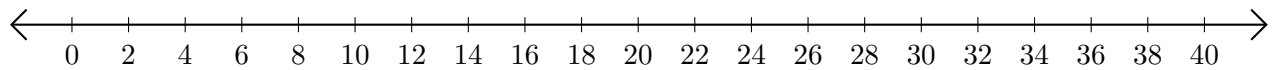
2. $36 - 24 = \underline{\quad}$



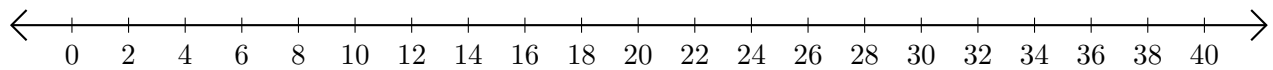
3. $40 - 6 = \underline{\quad}$



4. $30 - 26 = \underline{\quad}$



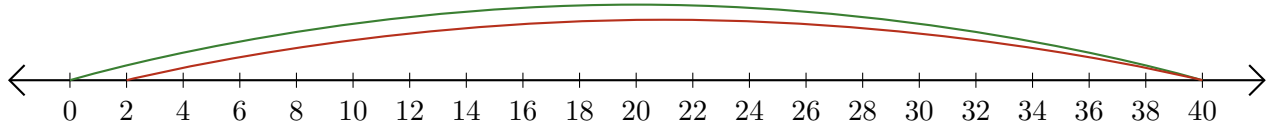
5. $40 - 36 = \underline{\quad}$



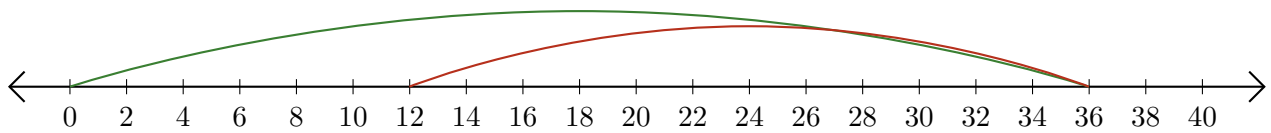
Restar en Rectas Numéricas (C) Respuestas

Use las rectas numéricas para calcular cada diferencia.

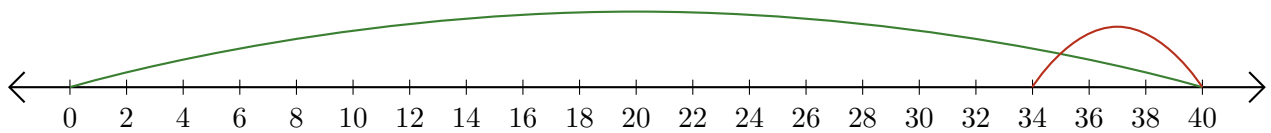
1. $40 - 38 = \underline{2}$



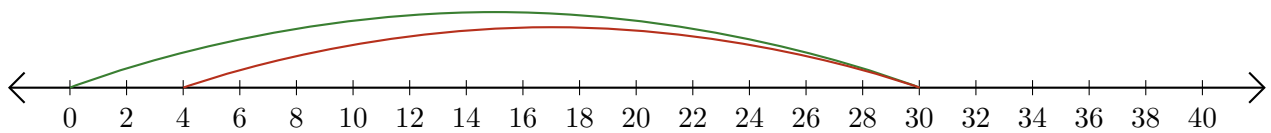
2. $36 - 24 = \underline{12}$



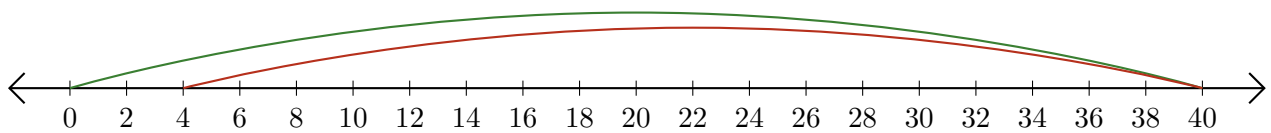
3. $40 - 6 = \underline{34}$



4. $30 - 26 = \underline{4}$



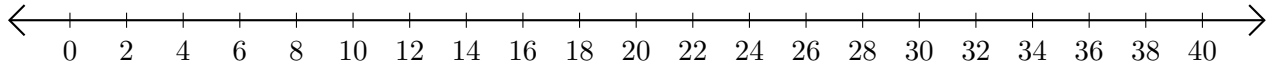
5. $40 - 36 = \underline{4}$



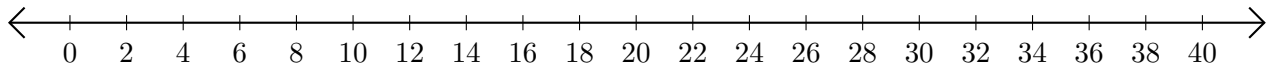
Restar en Rectas Numéricas (D)

Use las rectas numéricas para calcular cada diferencia.

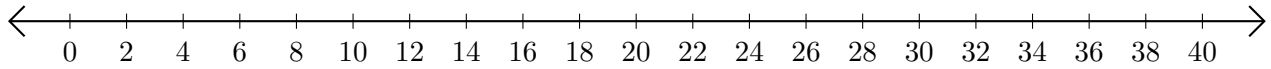
1. $32 - 22 = \underline{\quad}$



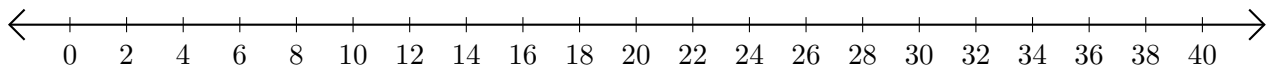
2. $32 - 30 = \underline{\quad}$



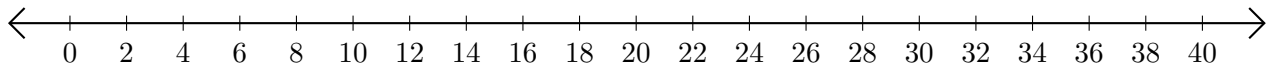
3. $30 - 26 = \underline{\quad}$



4. $36 - 24 = \underline{\quad}$



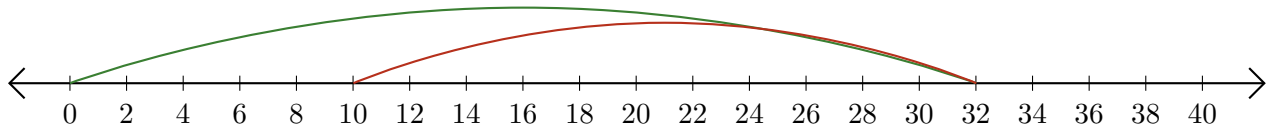
5. $20 - 12 = \underline{\quad}$



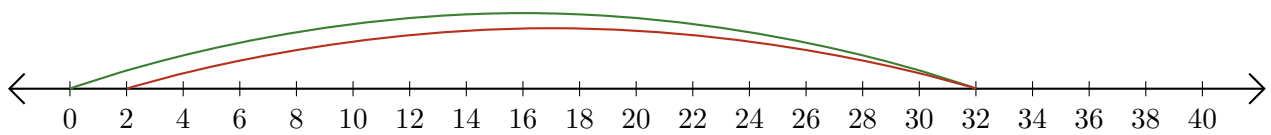
Restar en Rectas Numéricas (D) Respuestas

Use las rectas numéricas para calcular cada diferencia.

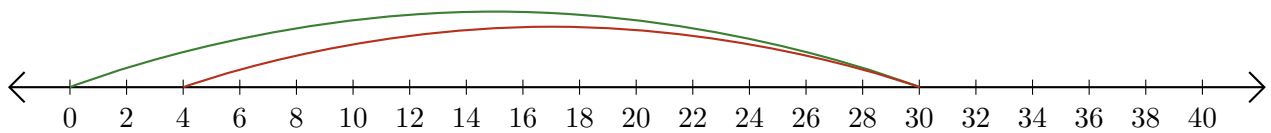
1. $32 - 22 = \underline{10}$



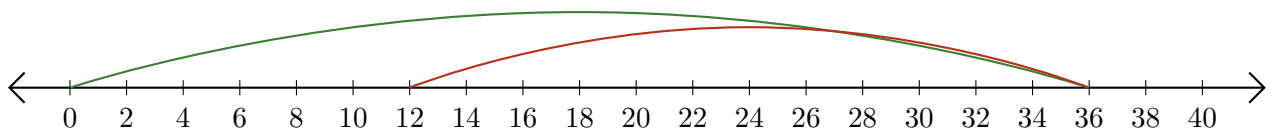
2. $32 - 30 = \underline{2}$



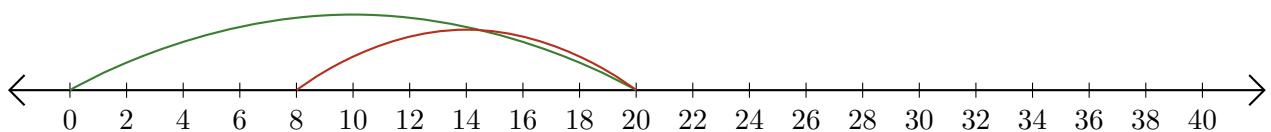
3. $30 - 26 = \underline{4}$



4. $36 - 24 = \underline{12}$



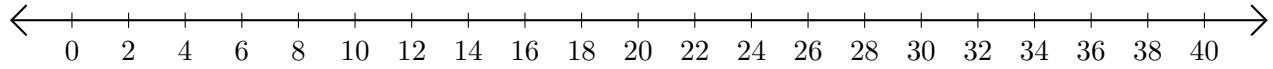
5. $20 - 12 = \underline{8}$



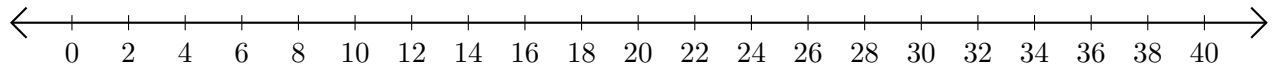
Restar en Rectas Numéricas (E)

Use las rectas numéricas para calcular cada diferencia.

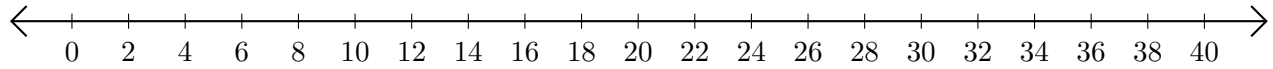
1. $28 - 16 = \underline{\quad}$



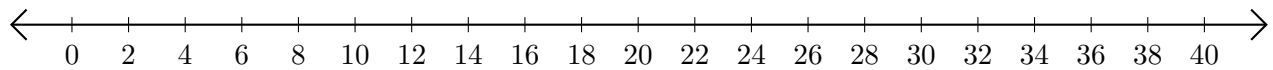
2. $24 - 10 = \underline{\quad}$



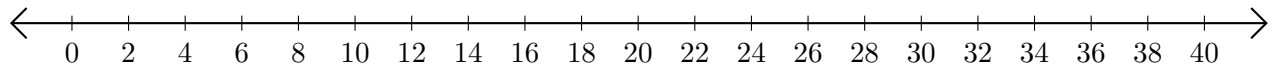
3. $22 - 6 = \underline{\quad}$



4. $40 - 38 = \underline{\quad}$



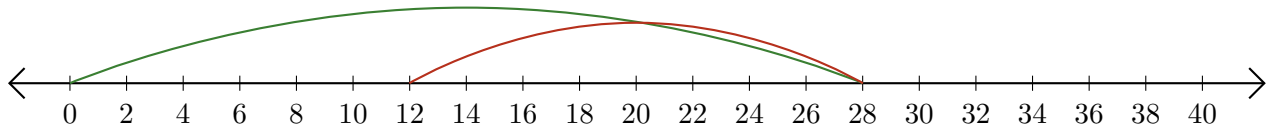
5. $38 - 30 = \underline{\quad}$



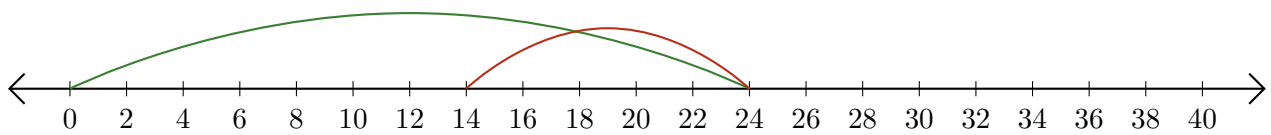
Restar en Rectas Numéricas (E) Respuestas

Use las rectas numéricas para calcular cada diferencia.

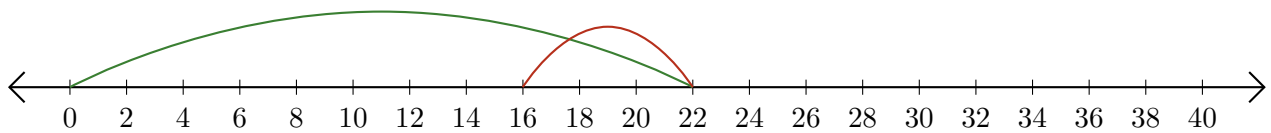
1. $28 - 16 = \underline{12}$



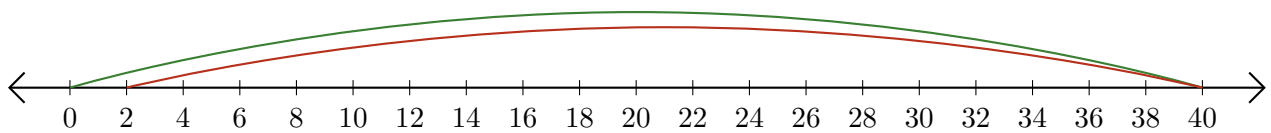
2. $24 - 10 = \underline{14}$



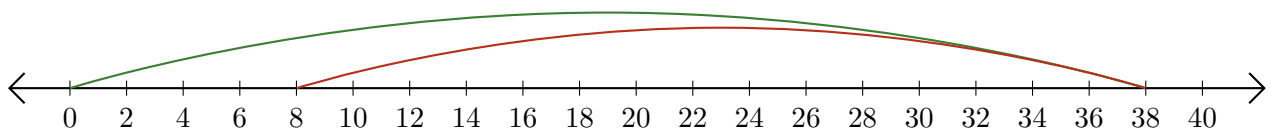
3. $22 - 6 = \underline{16}$



4. $40 - 38 = \underline{2}$



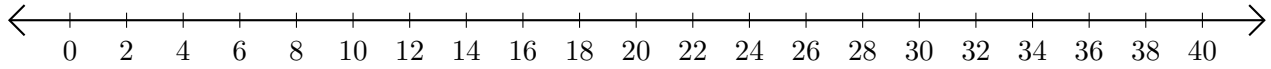
5. $38 - 30 = \underline{8}$



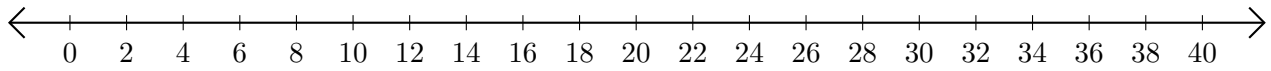
Restar en Rectas Numéricas (F)

Use las rectas numéricas para calcular cada diferencia.

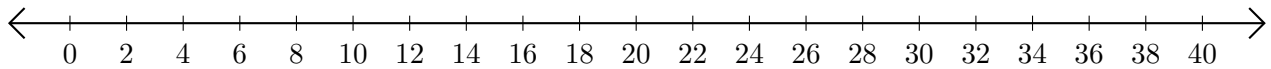
1. $40 - 32 = \underline{\quad}$



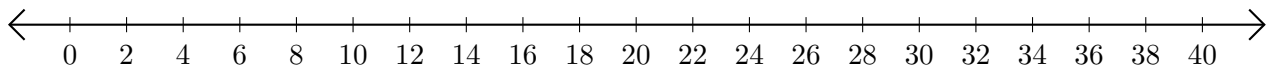
2. $28 - 14 = \underline{\quad}$



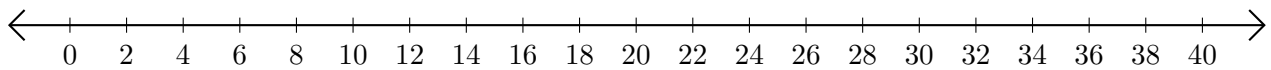
3. $26 - 22 = \underline{\quad}$



4. $38 - 36 = \underline{\quad}$



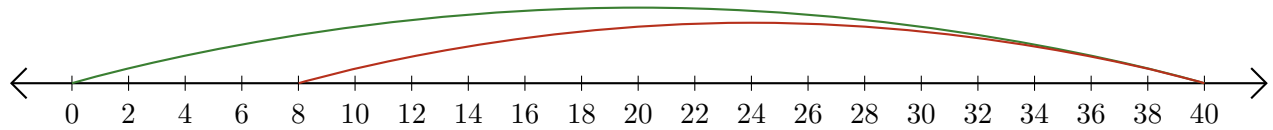
5. $28 - 26 = \underline{\quad}$



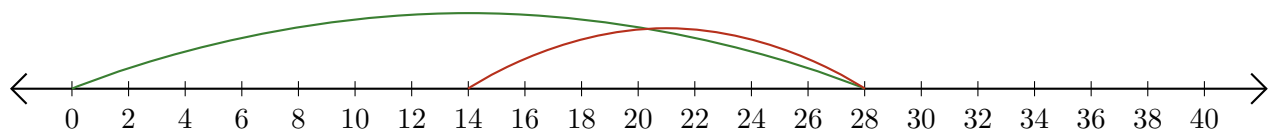
Restar en Rectas Numéricas (F) Respuestas

Use las rectas numéricas para calcular cada diferencia.

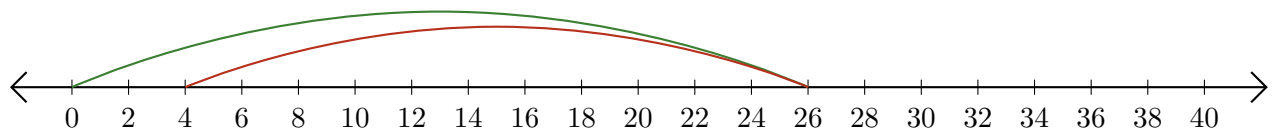
1. $40 - 32 = \underline{8}$



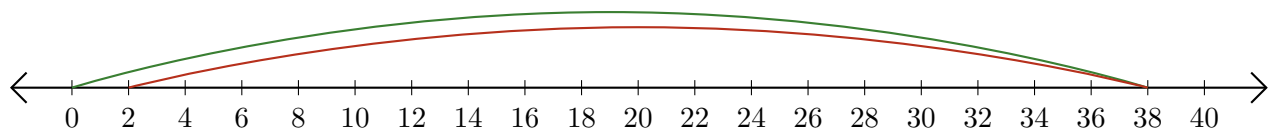
2. $28 - 14 = \underline{14}$



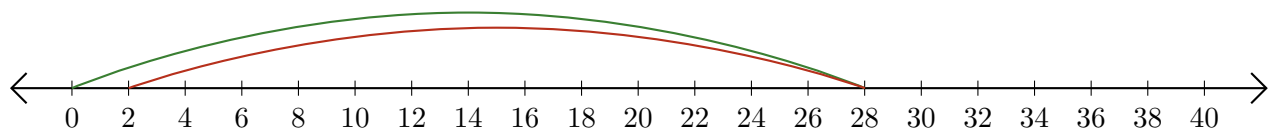
3. $26 - 22 = \underline{4}$



4. $38 - 36 = \underline{2}$



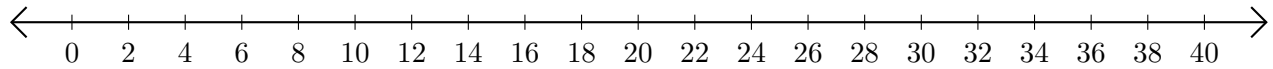
5. $28 - 26 = \underline{2}$



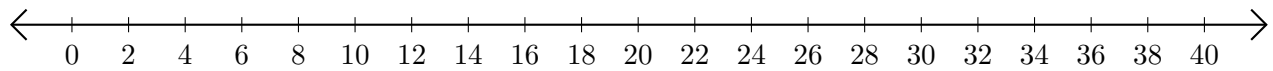
Restar en Rectas Numéricas (G)

Use las rectas numéricas para calcular cada diferencia.

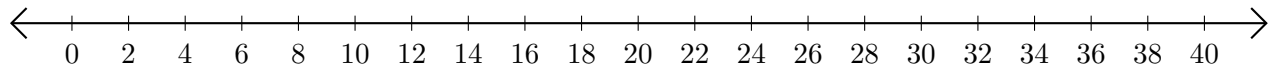
1. $8 - 4 = \underline{\quad}$



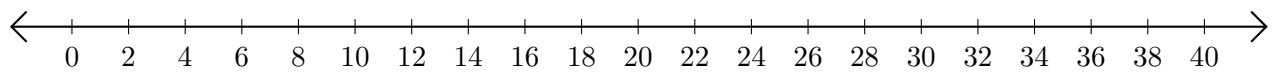
2. $32 - 10 = \underline{\quad}$



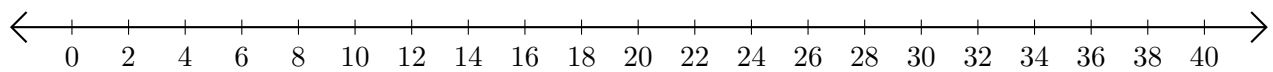
3. $38 - 14 = \underline{\quad}$



4. $28 - 16 = \underline{\quad}$




5. $30 - 22 = \underline{\quad}$



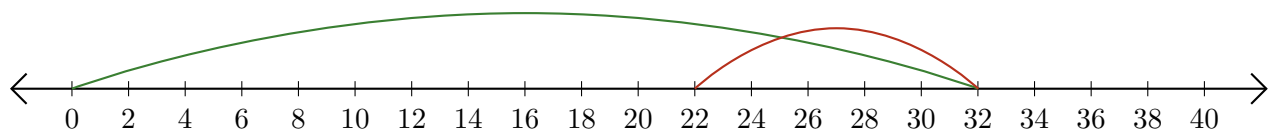
Restar en Rectas Numéricas (G) Respuestas

Use las rectas numéricas para calcular cada diferencia.

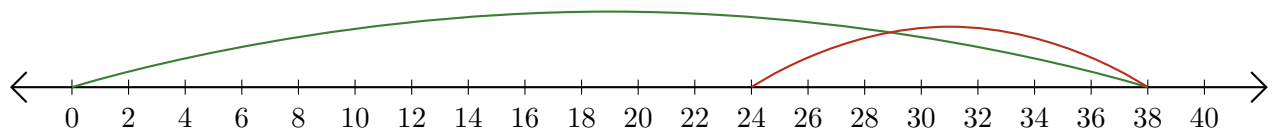
1. $8 - 4 = \underline{4}$



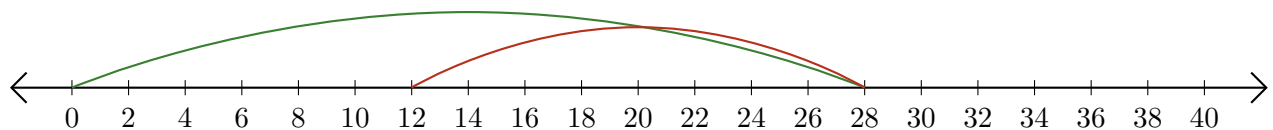
2. $32 - 10 = \underline{22}$



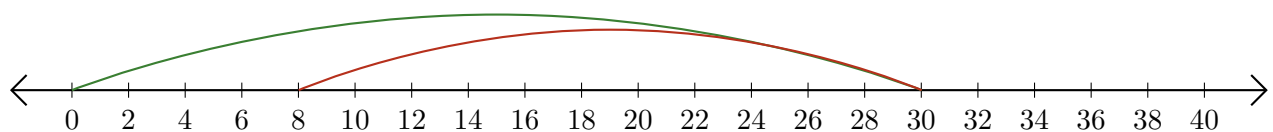
3. $38 - 14 = \underline{24}$



4. $28 - 16 = \underline{12}$



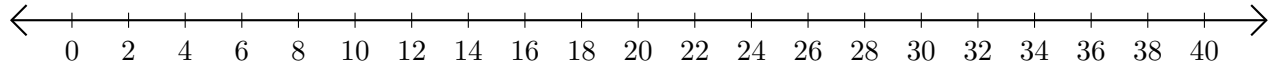
5. $30 - 22 = \underline{8}$



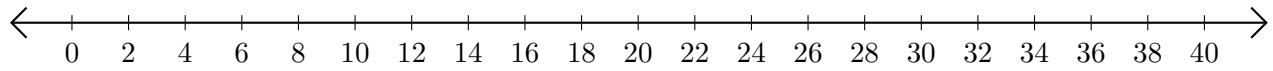
Restar en Rectas Numéricas (H)

Use las rectas numéricas para calcular cada diferencia.

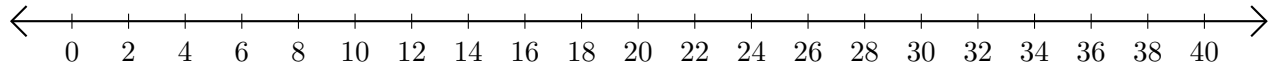
1. $40 - 38 = \underline{\quad}$



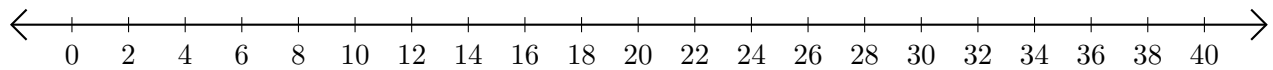
2. $36 - 26 = \underline{\quad}$



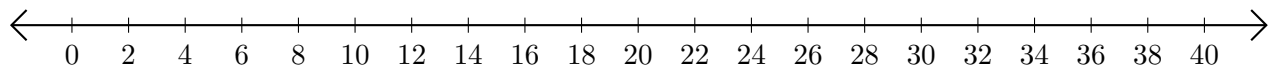
3. $20 - 12 = \underline{\quad}$



4. $36 - 20 = \underline{\quad}$



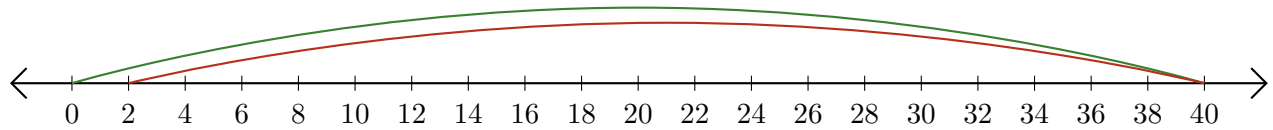
5. $36 - 34 = \underline{\quad}$



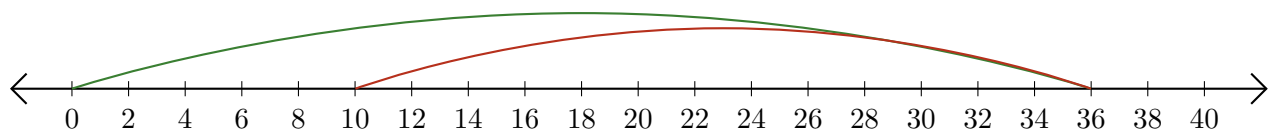
Restar en Rectas Numéricas (H) Respuestas

Use las rectas numéricas para calcular cada diferencia.

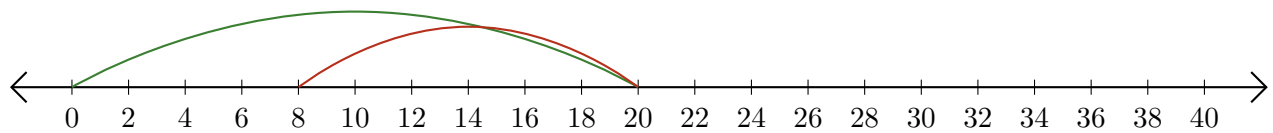
1. $40 - 38 = \underline{2}$



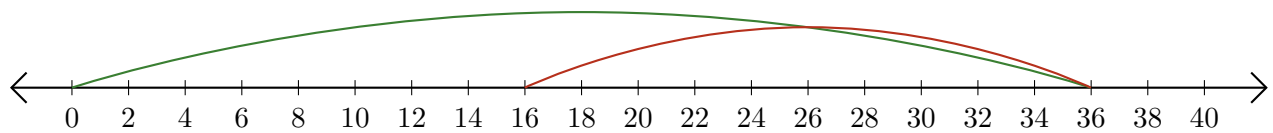
2. $36 - 26 = \underline{10}$



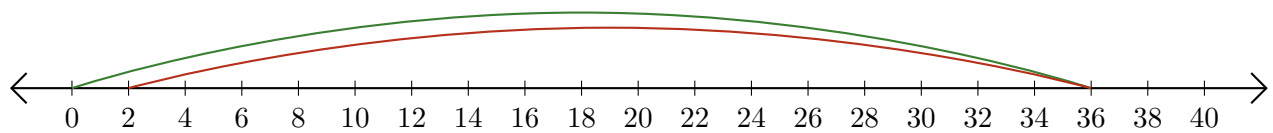
3. $20 - 12 = \underline{8}$



4. $36 - 20 = \underline{16}$



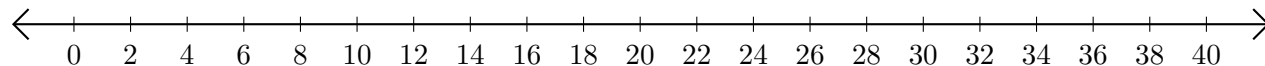
5. $36 - 34 = \underline{2}$



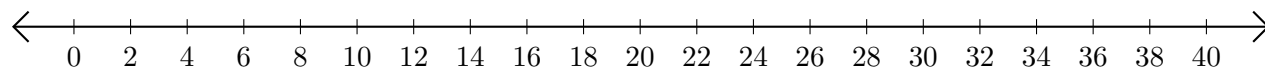
Restar en Rectas Numéricas (I)

Use las rectas numéricas para calcular cada diferencia.

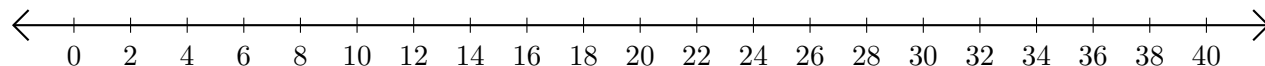
1. $32 - 24 = \underline{\quad}$



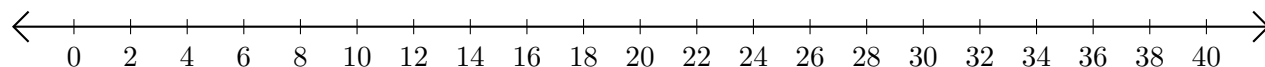
2. $18 - 16 = \underline{\quad}$



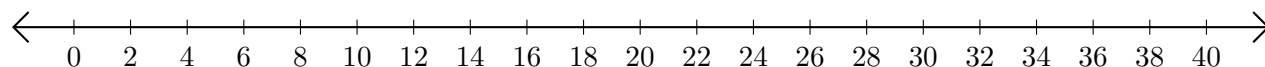
3. $24 - 10 = \underline{\quad}$



4. $40 - 36 = \underline{\quad}$



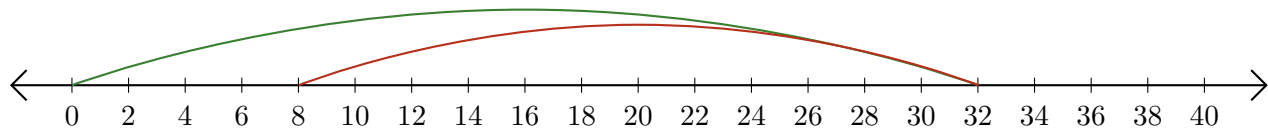
5. $38 - 28 = \underline{\quad}$



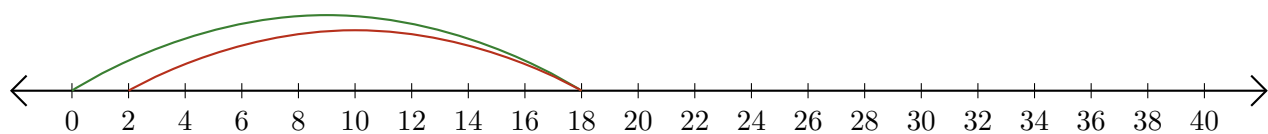
Restar en Rectas Numéricas (I) Respuestas

Use las rectas numéricas para calcular cada diferencia.

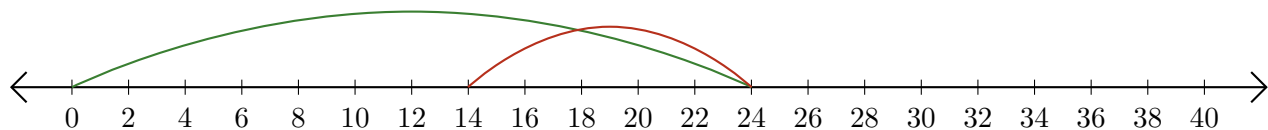
1. $32 - 24 = \underline{8}$



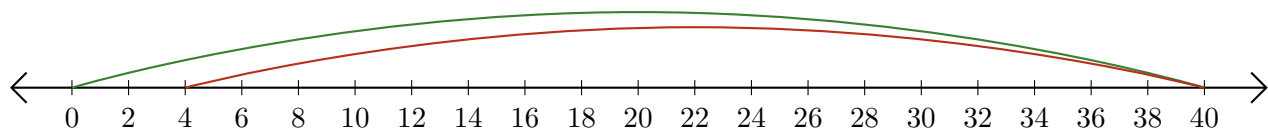
2. $18 - 16 = \underline{2}$



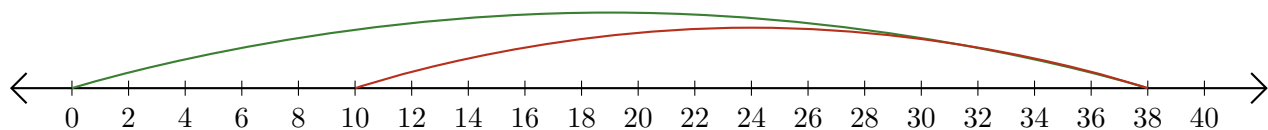
3. $24 - 10 = \underline{14}$



4. $40 - 36 = \underline{4}$



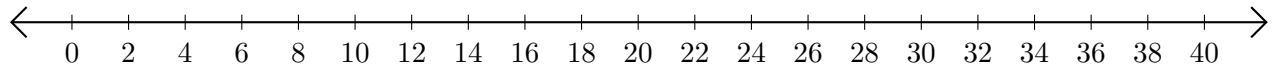
5. $38 - 28 = \underline{10}$



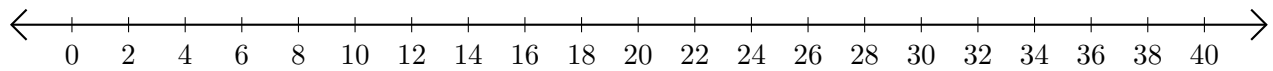
Restar en Rectas Numéricas (J)

Use las rectas numéricas para calcular cada diferencia.

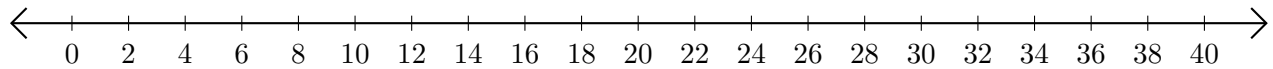
1. $36 - 30 = \underline{\quad}$



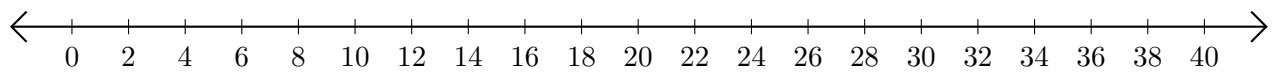
2. $34 - 6 = \underline{\quad}$



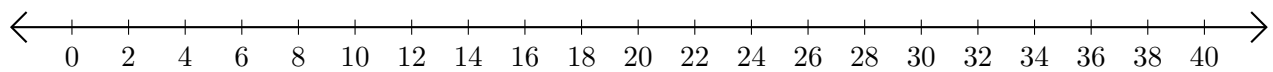
3. $40 - 34 = \underline{\quad}$



4. $32 - 18 = \underline{\quad}$



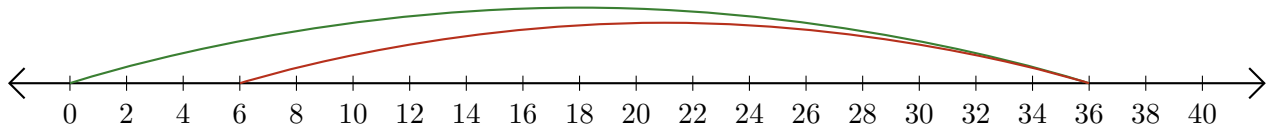
5. $38 - 24 = \underline{\quad}$



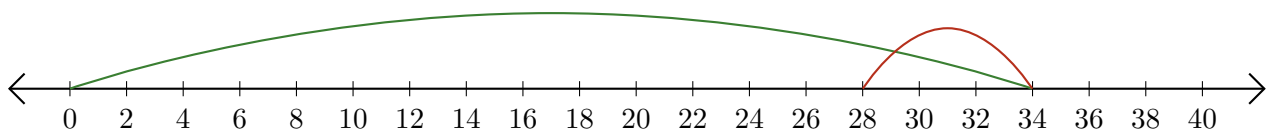
Restar en Rectas Numéricas (J) Respuestas

Use las rectas numéricas para calcular cada diferencia.

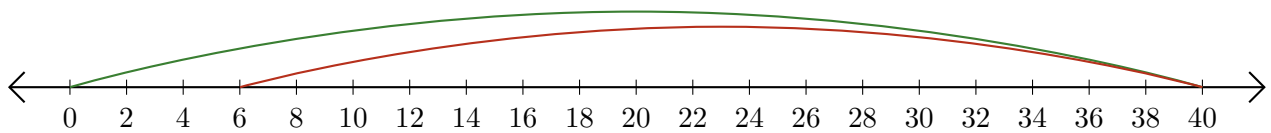
1. $36 - 30 = \underline{6}$



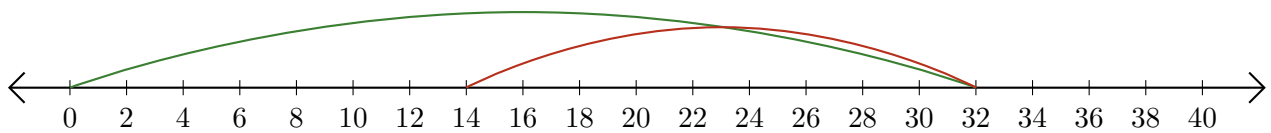
2. $34 - 6 = \underline{28}$



3. $40 - 34 = \underline{6}$



4. $32 - 18 = \underline{14}$



5. $38 - 24 = \underline{14}$

