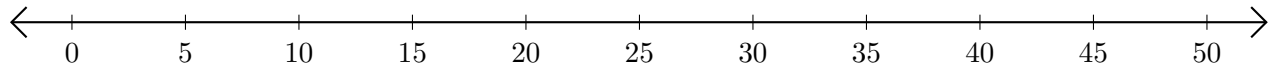


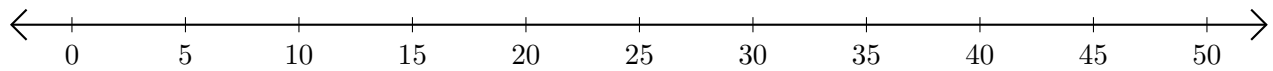
Restar en Rectas Numéricas (A)

Use las rectas numéricas para calcular cada diferencia.

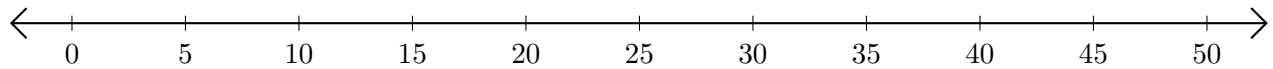
1. $50 - 35 = \underline{\quad}$



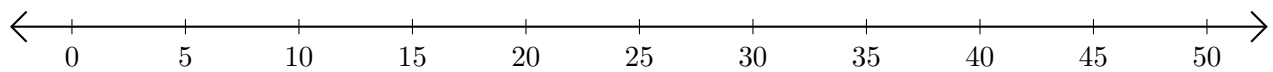
2. $45 - 30 = \underline{\quad}$



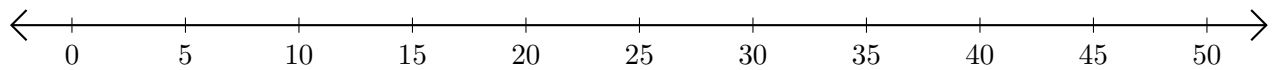
3. $20 - 10 = \underline{\quad}$



4. $50 - 45 = \underline{\quad}$



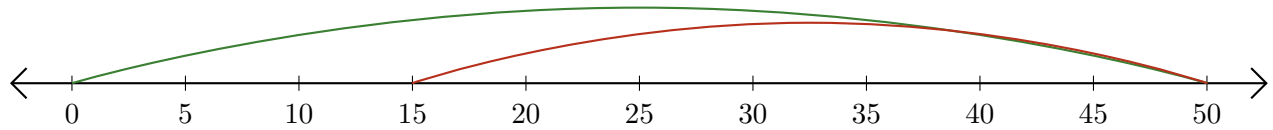
5. $40 - 25 = \underline{\quad}$



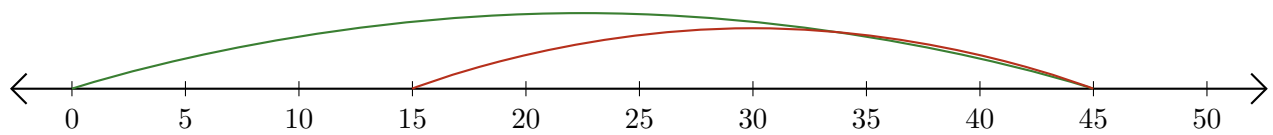
Restar en Rectas Numéricas (A) Respuestas

Use las rectas numéricas para calcular cada diferencia.

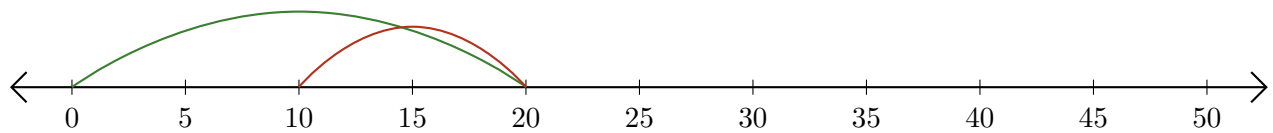
1. $50 - 35 = \underline{15}$



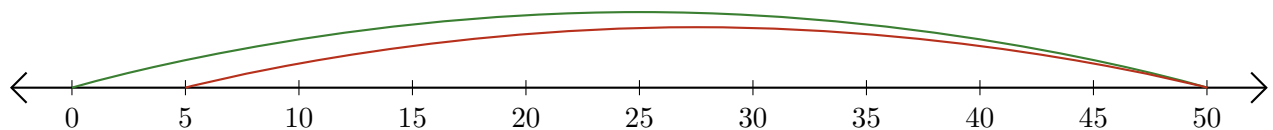
2. $45 - 30 = \underline{15}$



3. $20 - 10 = \underline{10}$



4. $50 - 45 = \underline{5}$



5. $40 - 25 = \underline{15}$

