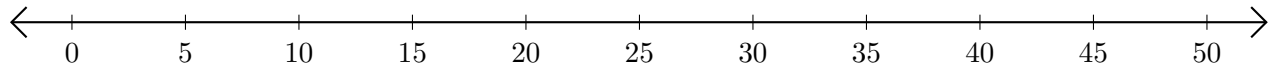


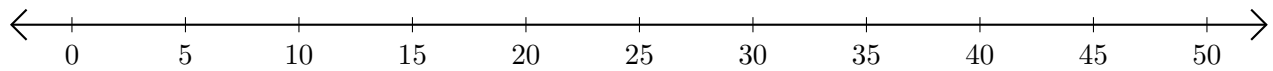
Restar en Rectas Numéricas (J)

Use las rectas numéricas para calcular cada diferencia.

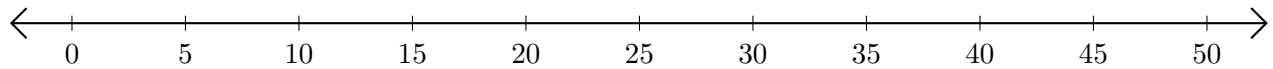
1. $50 - 45 = \underline{\quad}$



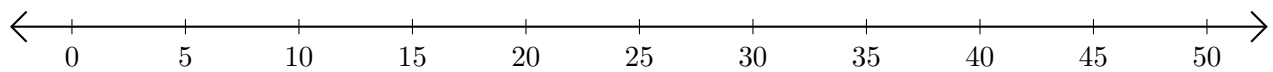
2. $45 - 25 = \underline{\quad}$



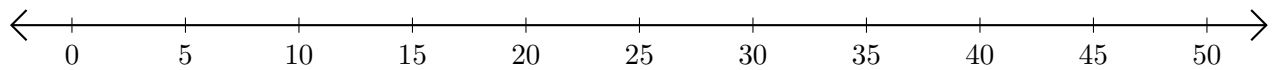
3. $50 - 30 = \underline{\quad}$



4. $35 - 20 = \underline{\quad}$



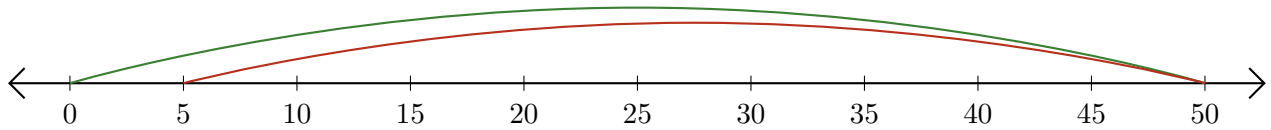
5. $35 - 5 = \underline{\quad}$



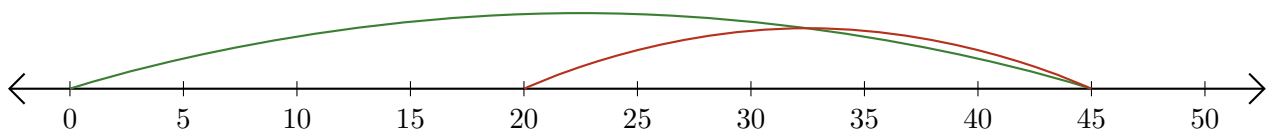
Restar en Rectas Numéricas (J) Respuestas

Use las rectas numéricas para calcular cada diferencia.

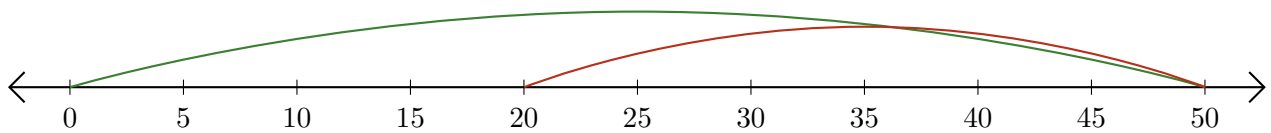
1. $50 - 45 = \underline{5}$



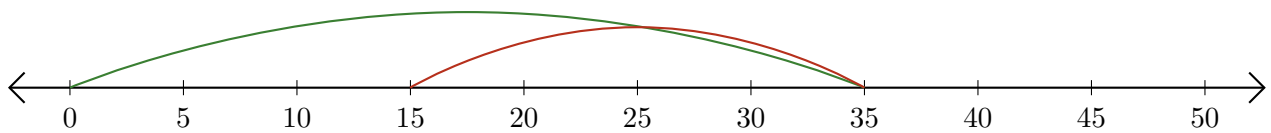
2. $45 - 25 = \underline{20}$



3. $50 - 30 = \underline{20}$



4. $35 - 20 = \underline{15}$



5. $35 - 5 = \underline{30}$

