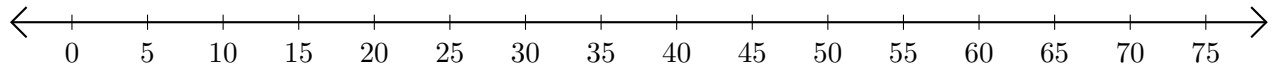


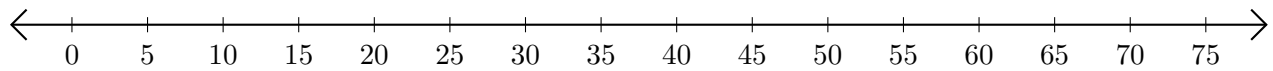
Restar en Rectas Numéricas (J)

Use las rectas numéricas para calcular cada diferencia.

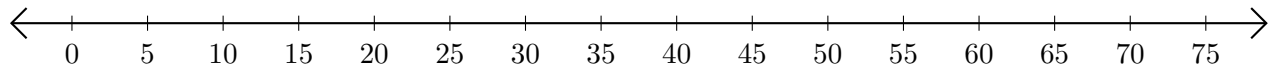
1. $65 - 55 = \underline{\quad}$



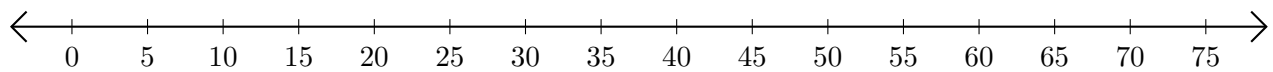
2. $40 - 10 = \underline{\quad}$



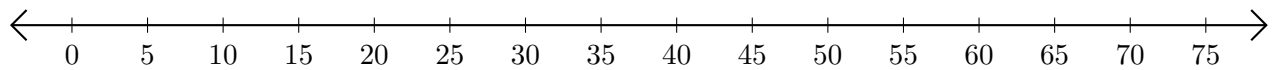
3. $70 - 60 = \underline{\quad}$



4. $75 - 65 = \underline{\quad}$



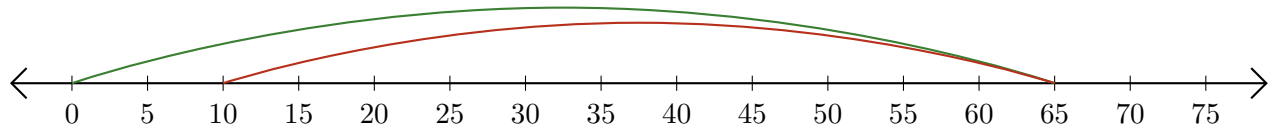
5. $75 - 70 = \underline{\quad}$



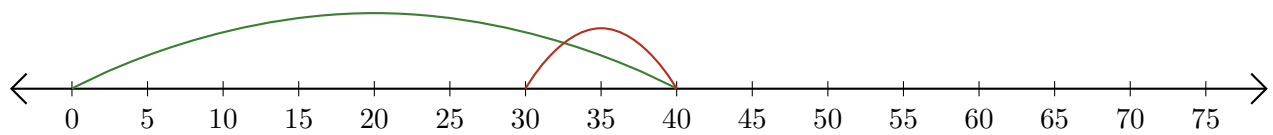
Restar en Rectas Numéricas (J) Respuestas

Use las rectas numéricas para calcular cada diferencia.

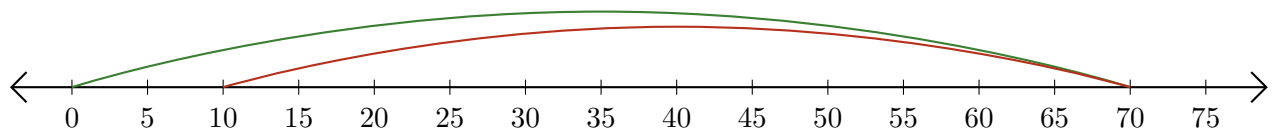
1. $65 - 55 = \underline{10}$



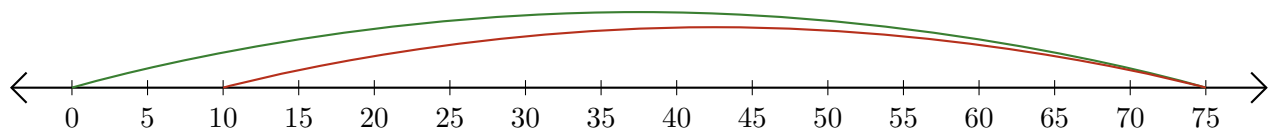
2. $40 - 10 = \underline{30}$



3. $70 - 60 = \underline{10}$



4. $75 - 65 = \underline{10}$



5. $75 - 70 = \underline{5}$

