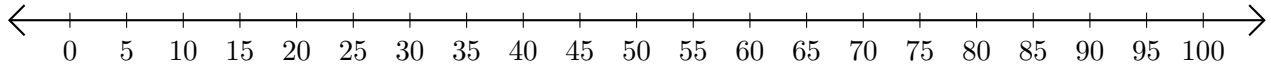


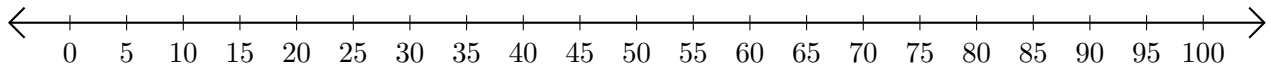
Restar en Rectas Numéricas (A)

Use las rectas numéricas para calcular cada diferencia.

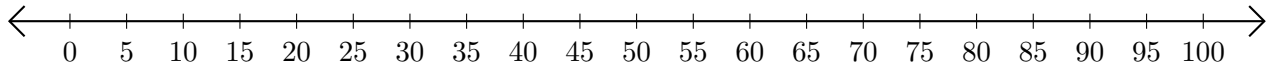
1. $95 - 75 = \underline{\quad}$



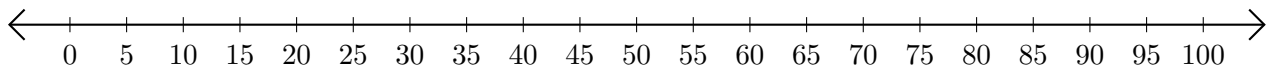
2. $85 - 65 = \underline{\quad}$



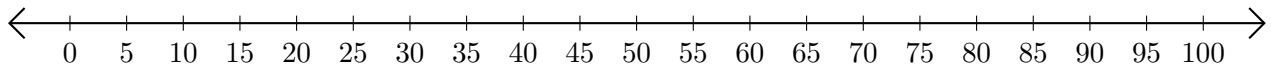
3. $100 - 40 = \underline{\quad}$



4. $55 - 30 = \underline{\quad}$



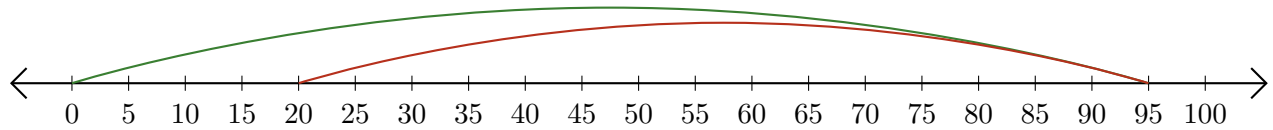
5. $80 - 5 = \underline{\quad}$



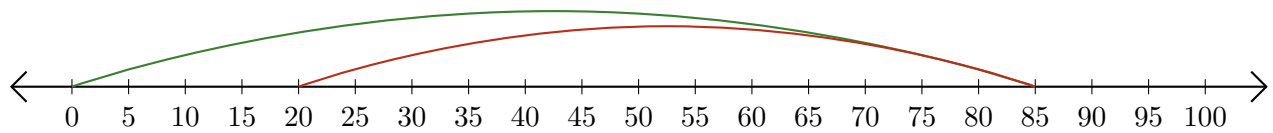
Restar en Rectas Numéricas (A) Respuestas

Use las rectas numéricas para calcular cada diferencia.

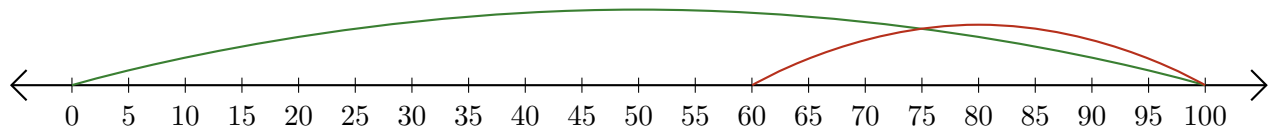
1. $95 - 75 = \underline{20}$



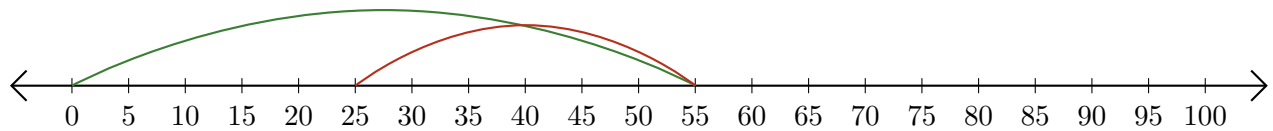
2. $85 - 65 = \underline{20}$



3. $100 - 40 = \underline{60}$



4. $55 - 30 = \underline{25}$



5. $80 - 5 = \underline{75}$

