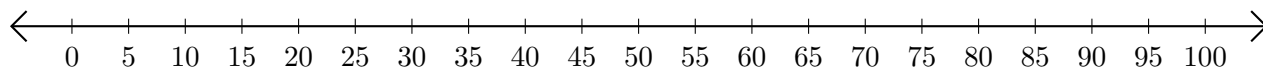


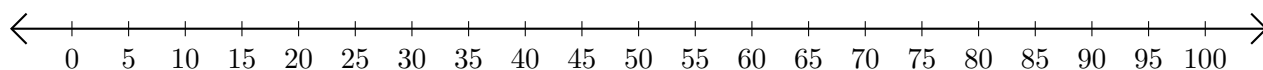
Restar en Rectas Numéricas (J)

Use las rectas numéricas para calcular cada diferencia.

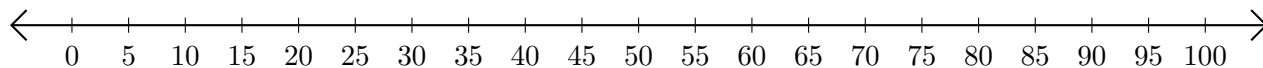
1. $75 - 10 = \underline{\quad}$



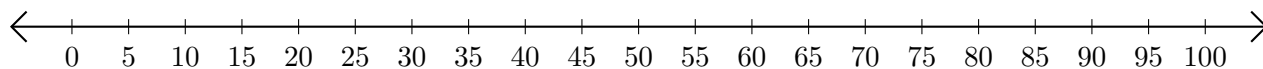
2. $60 - 40 = \underline{\quad}$



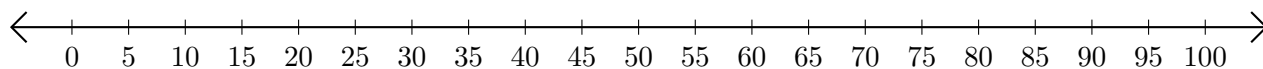
3. $80 - 5 = \underline{\quad}$



4. $90 - 75 = \underline{\quad}$



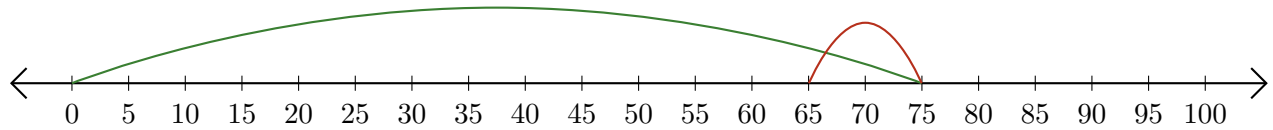
5. $50 - 15 = \underline{\quad}$



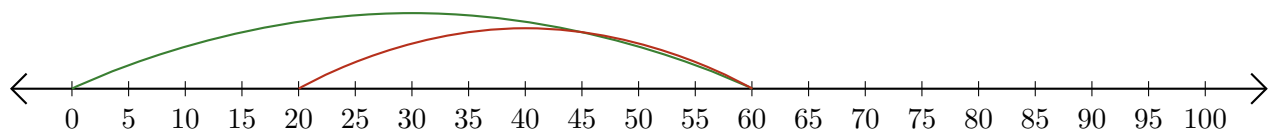
Restar en Rectas Numéricas (J) Respuestas

Use las rectas numéricas para calcular cada diferencia.

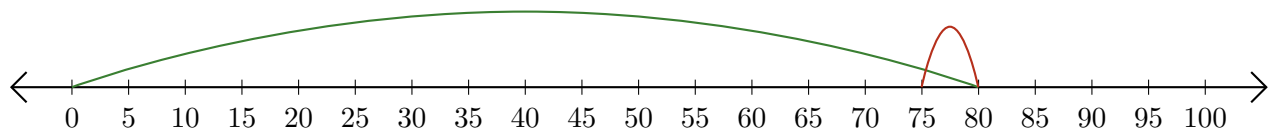
1. $75 - 10 = \underline{65}$



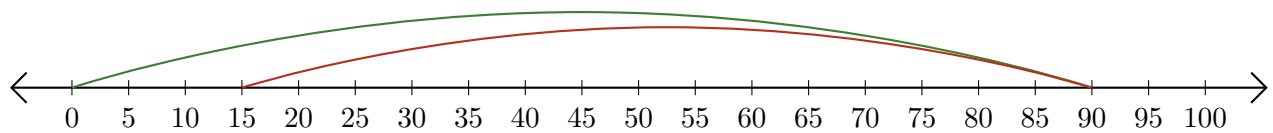
2. $60 - 40 = \underline{20}$



3. $80 - 5 = \underline{75}$



4. $90 - 75 = \underline{15}$



5. $50 - 15 = \underline{35}$

