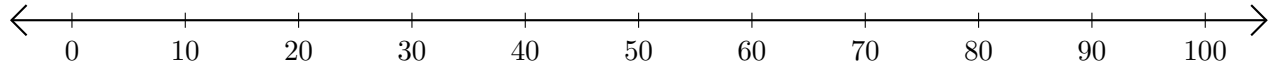


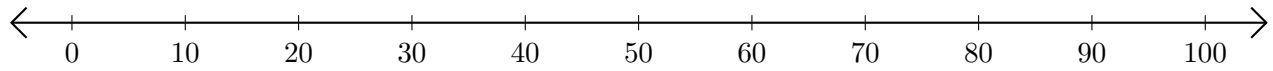
Restar en Rectas Numéricas (A)

Use las rectas numéricas para calcular cada diferencia.

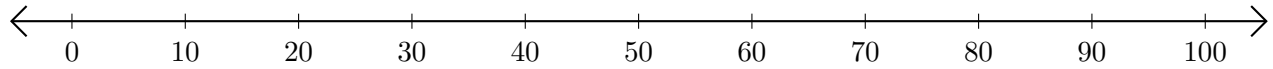
1. $50 - 30 = \underline{\quad}$



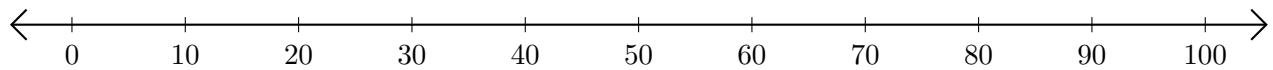
2. $70 - 20 = \underline{\quad}$



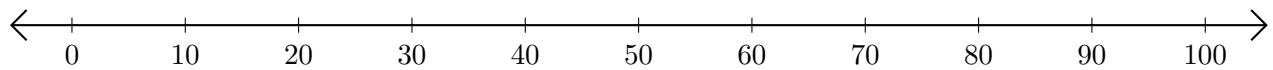
3. $100 - 90 = \underline{\quad}$



4. $90 - 80 = \underline{\quad}$



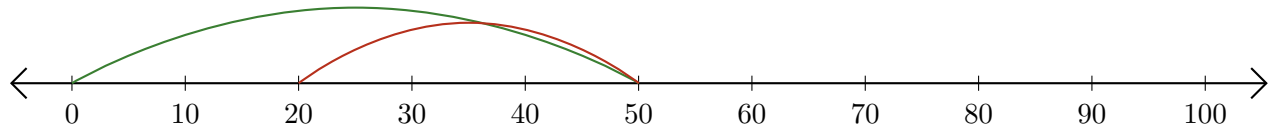
5. $60 - 40 = \underline{\quad}$



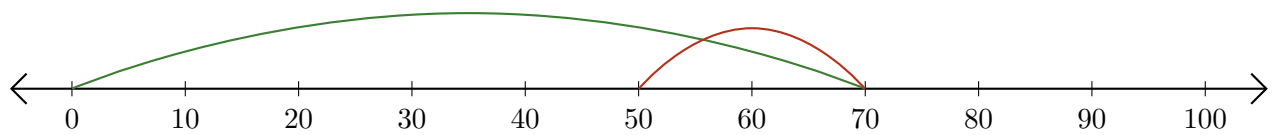
Restar en Rectas Numéricas (A) Respuestas

Use las rectas numéricas para calcular cada diferencia.

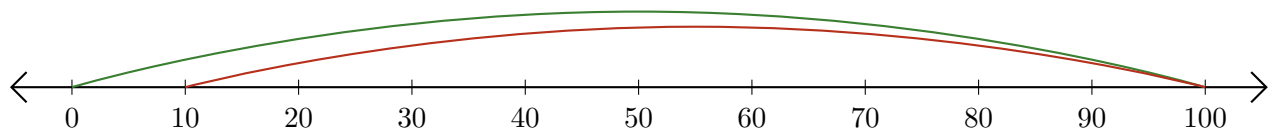
1. $50 - 30 = \underline{20}$



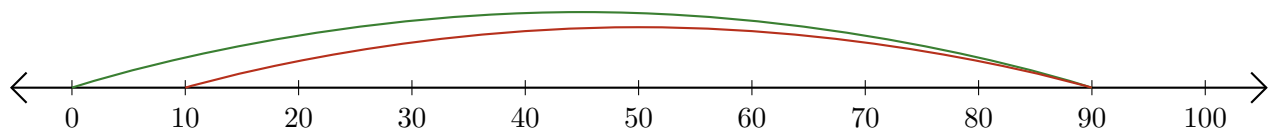
2. $70 - 20 = \underline{50}$



3. $100 - 90 = \underline{10}$



4. $90 - 80 = \underline{10}$



5. $60 - 40 = \underline{20}$

