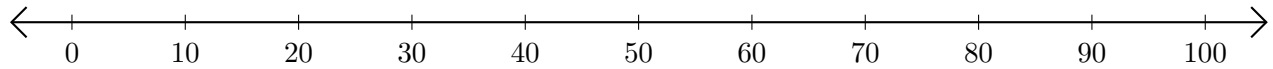


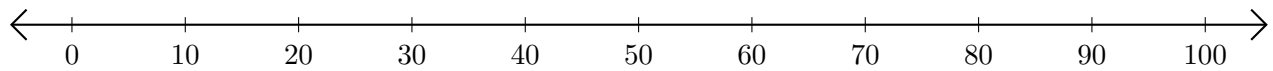
Restar en Rectas Numéricas (D)

Use las rectas numéricas para calcular cada diferencia.

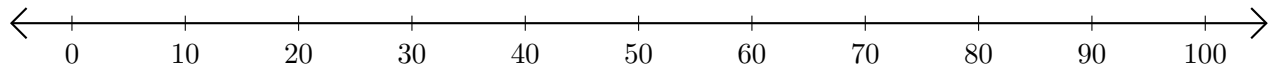
1. $80 - 70 = \underline{\quad}$



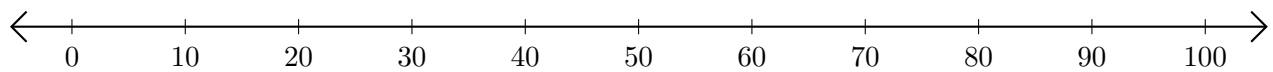
2. $50 - 30 = \underline{\quad}$



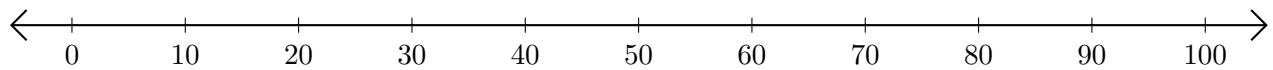
3. $100 - 90 = \underline{\quad}$



4. $80 - 40 = \underline{\quad}$



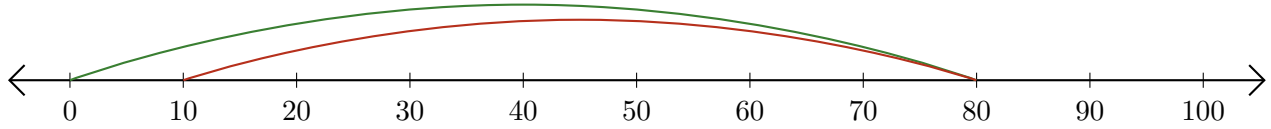
5. $100 - 50 = \underline{\quad}$



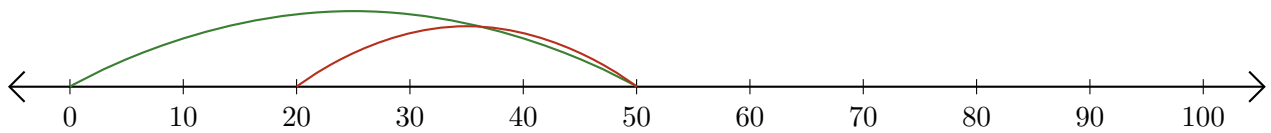
Restar en Rectas Numéricas (D) Respuestas

Use las rectas numéricas para calcular cada diferencia.

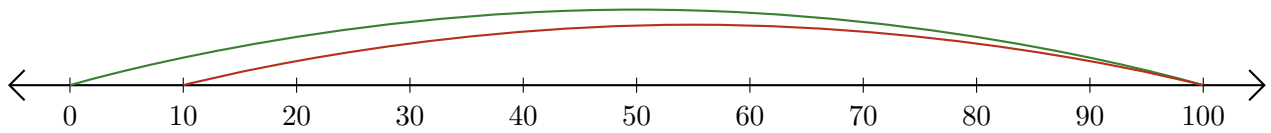
1. $80 - 70 = \underline{10}$



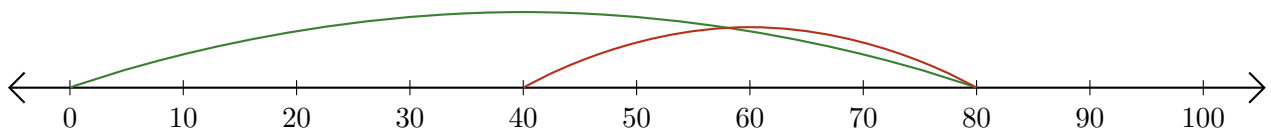
2. $50 - 30 = \underline{20}$



3. $100 - 90 = \underline{10}$



4. $80 - 40 = \underline{40}$



5. $100 - 50 = \underline{50}$

