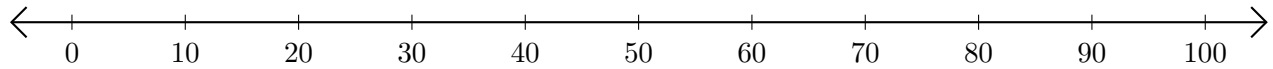


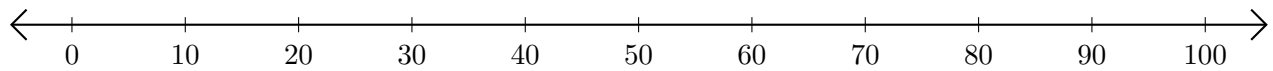
Restar en Rectas Numéricas (F)

Use las rectas numéricas para calcular cada diferencia.

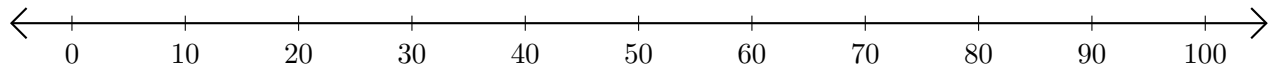
1. $80 - 70 = \underline{\quad}$



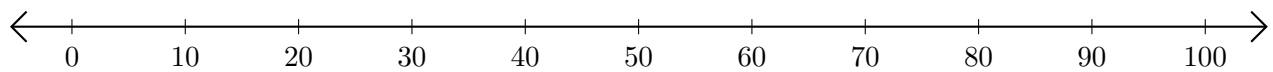
2. $50 - 30 = \underline{\quad}$



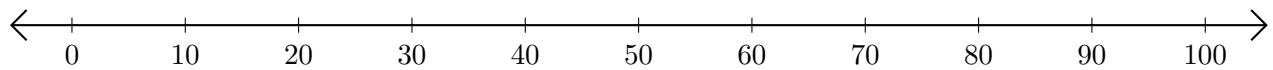
3. $80 - 20 = \underline{\quad}$



4. $100 - 90 = \underline{\quad}$



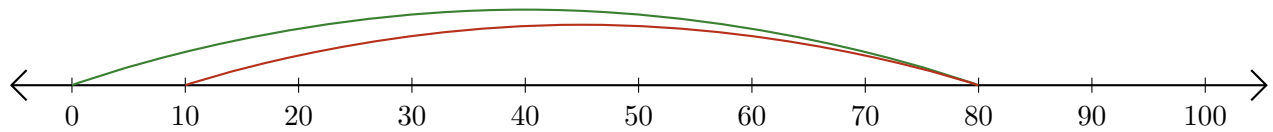
5. $50 - 10 = \underline{\quad}$



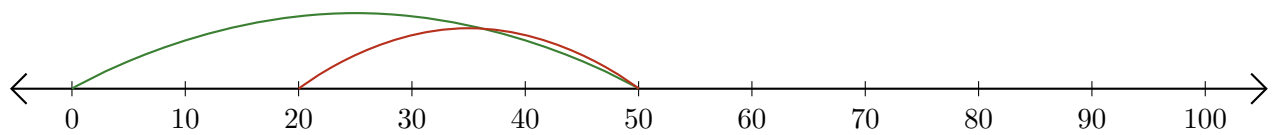
Restar en Rectas Numéricas (F) Respuestas

Use las rectas numéricas para calcular cada diferencia.

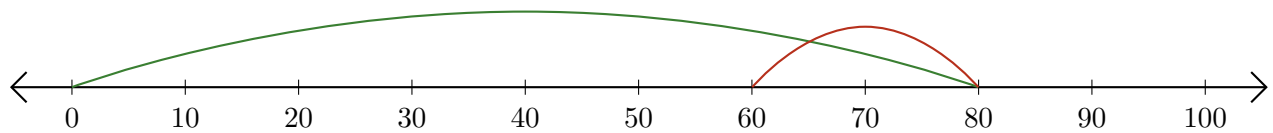
1. $80 - 70 = \underline{10}$



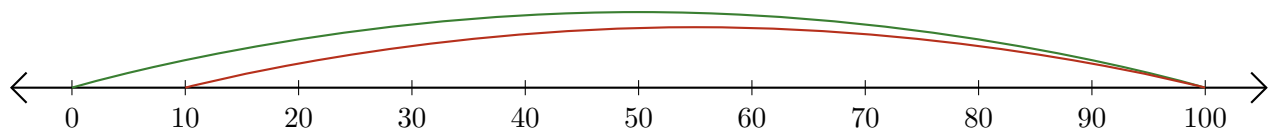
2. $50 - 30 = \underline{20}$



3. $80 - 20 = \underline{60}$



4. $100 - 90 = \underline{10}$



5. $50 - 10 = \underline{40}$

