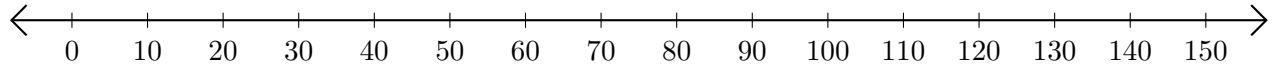


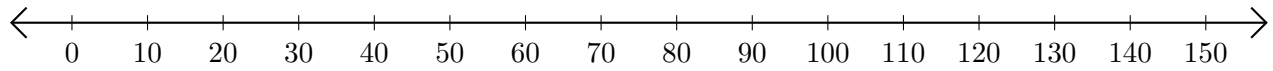
# Restar en Rectas Numéricas (A)

Use las rectas numéricas para calcular cada diferencia.

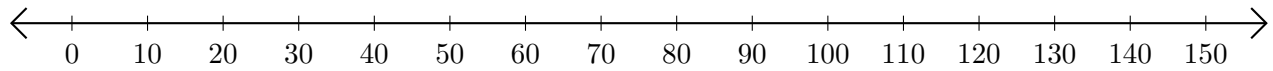
1.  $110 - 10 = \underline{\hspace{2cm}}$



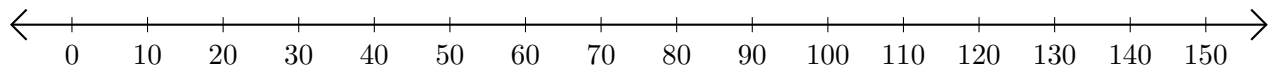
2.  $150 - 120 = \underline{\hspace{2cm}}$



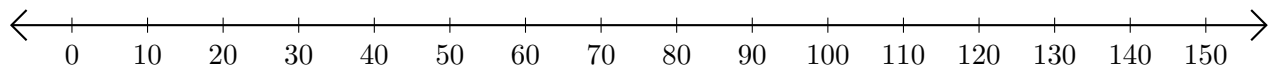
3.  $150 - 70 = \underline{\hspace{2cm}}$



4.  $150 - 50 = \underline{\hspace{2cm}}$



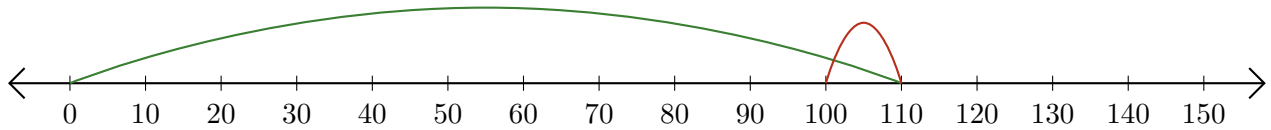
5.  $140 - 130 = \underline{\hspace{2cm}}$



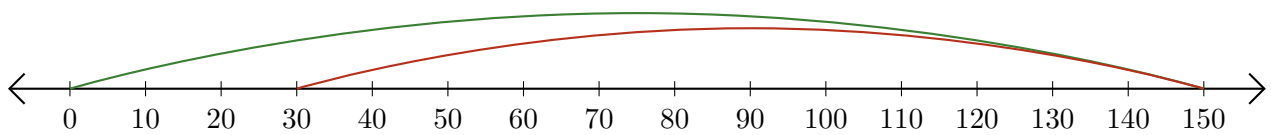
# Restar en Rectas Numéricas (A) Respuestas

Use las rectas numéricas para calcular cada diferencia.

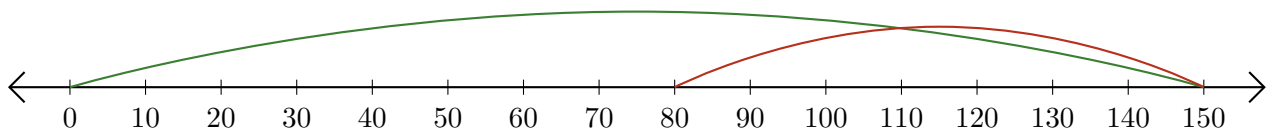
1.  $110 - 10 = \underline{100}$



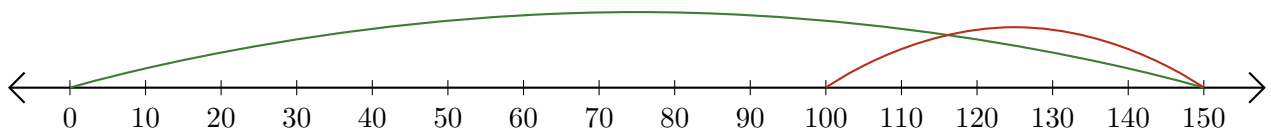
2.  $150 - 120 = \underline{30}$



3.  $150 - 70 = \underline{80}$



4.  $150 - 50 = \underline{100}$



5.  $140 - 130 = \underline{10}$

