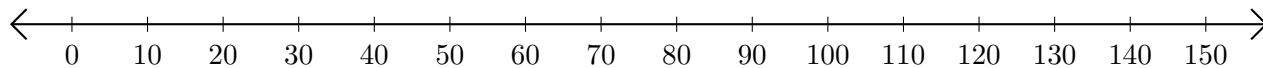


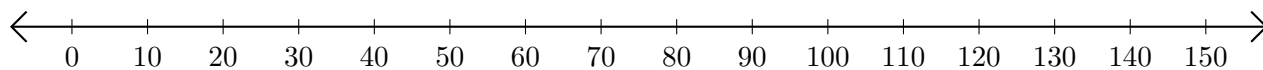
Restar en Rectas Numéricas (E)

Use las rectas numéricas para calcular cada diferencia.

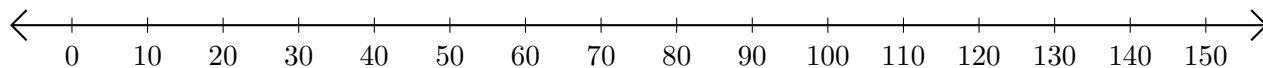
1. $150 - 140 = \underline{\quad}$



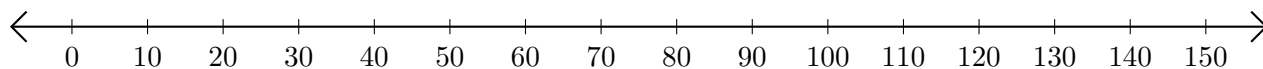
2. $130 - 100 = \underline{\quad}$



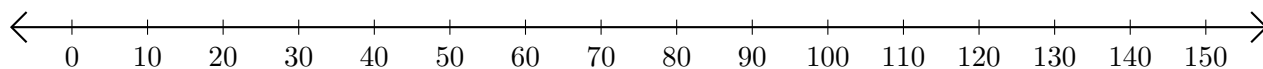
3. $100 - 30 = \underline{\quad}$



4. $110 - 60 = \underline{\quad}$



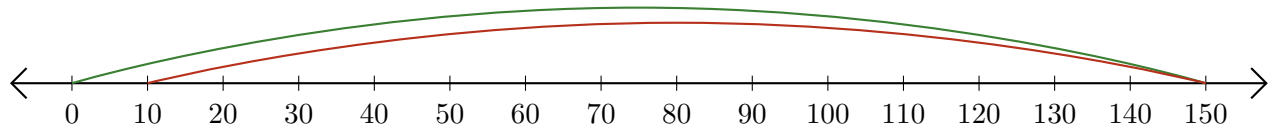
5. $150 - 10 = \underline{\quad}$



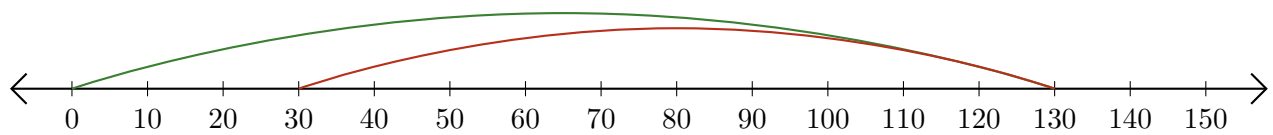
Restar en Rectas Numéricas (E) Respuestas

Use las rectas numéricas para calcular cada diferencia.

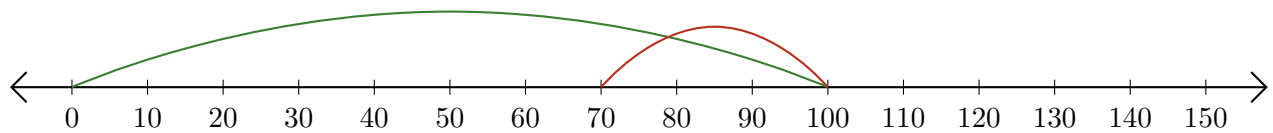
1. $150 - 140 = \underline{10}$



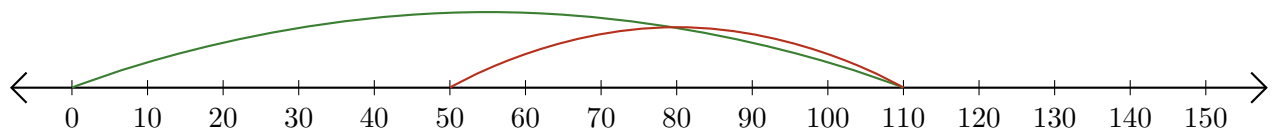
2. $130 - 100 = \underline{30}$



3. $100 - 30 = \underline{70}$



4. $110 - 60 = \underline{50}$



5. $150 - 10 = \underline{140}$

