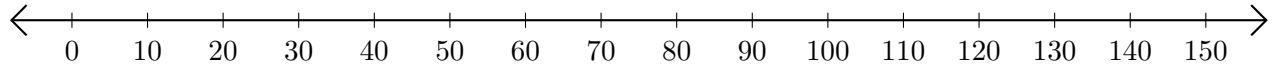


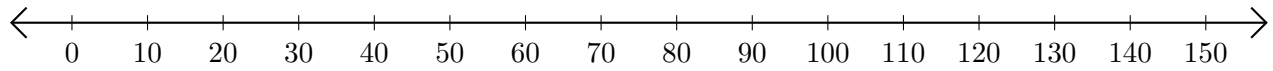
## Restar en Rectas Numéricas (F)

Use las rectas numéricas para calcular cada diferencia.

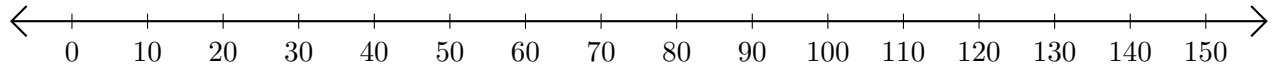
1.  $130 - 110 = \underline{\quad}$



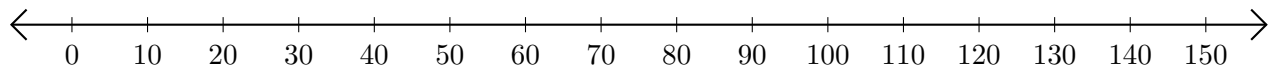
2.  $150 - 120 = \underline{\quad}$



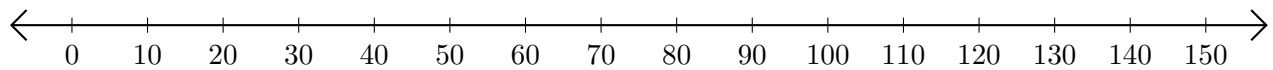
3.  $130 - 20 = \underline{\quad}$



4.  $60 - 50 = \underline{\quad}$



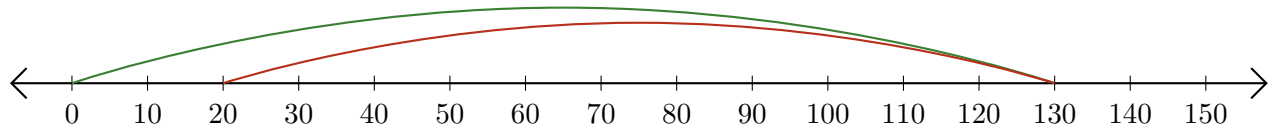
5.  $140 - 130 = \underline{\quad}$



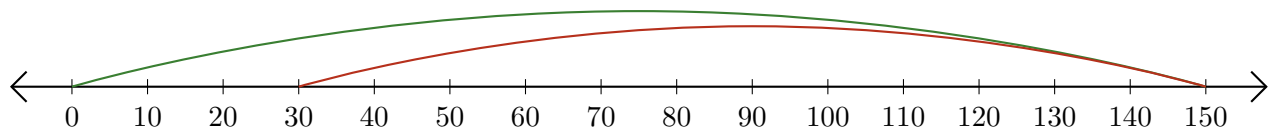
# Restar en Rectas Numéricas (F) Respuestas

Use las rectas numéricas para calcular cada diferencia.

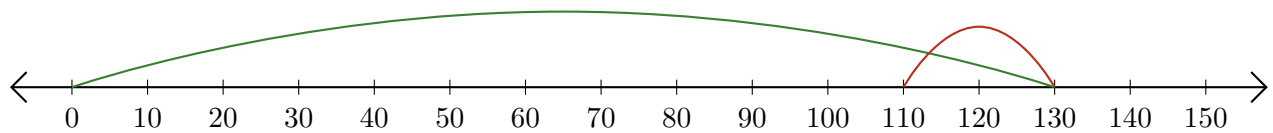
1.  $130 - 110 = \underline{20}$



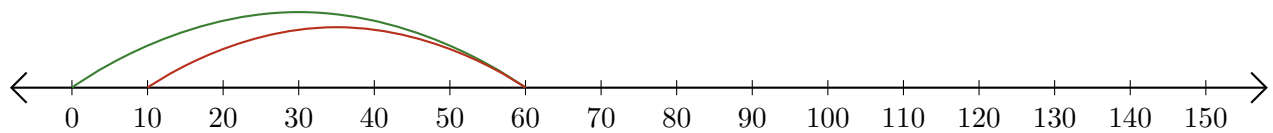
2.  $150 - 120 = \underline{30}$



3.  $130 - 20 = \underline{110}$



4.  $60 - 50 = \underline{10}$



5.  $140 - 130 = \underline{10}$

