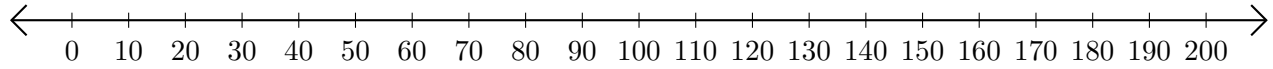


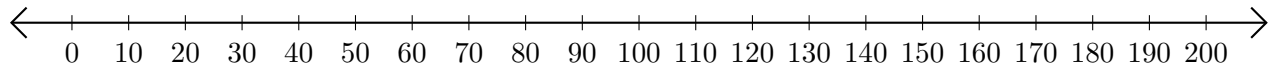
## Restar en Rectas Numéricas (E)

Use las rectas numéricas para calcular cada diferencia.

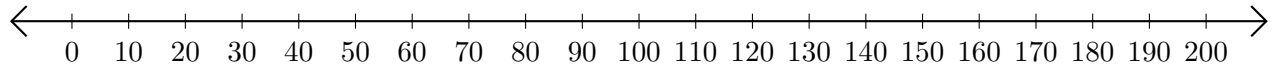
1.  $180 - 110 = \underline{\quad}$



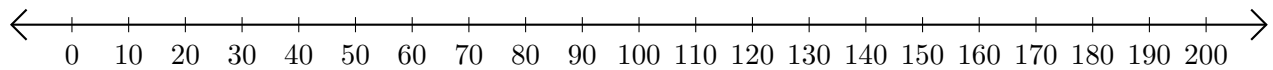
2.  $150 - 70 = \underline{\quad}$



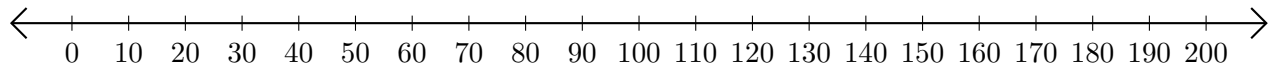
3.  $120 - 10 = \underline{\quad}$



4.  $140 - 90 = \underline{\quad}$



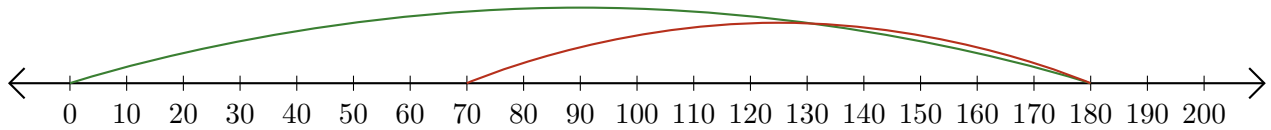
5.  $200 - 190 = \underline{\quad}$



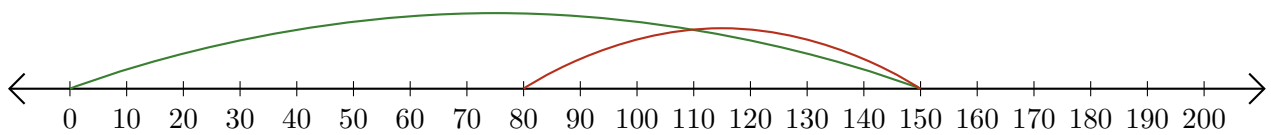
# Restar en Rectas Numéricas (E) Respuestas

Use las rectas numéricas para calcular cada diferencia.

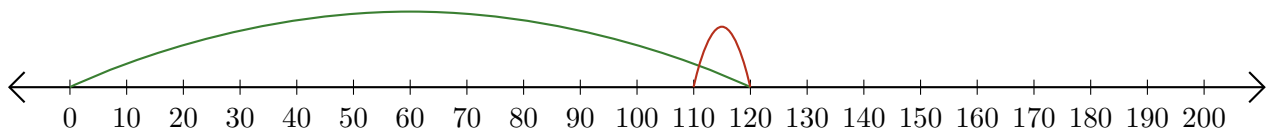
1.  $180 - 110 = \underline{70}$



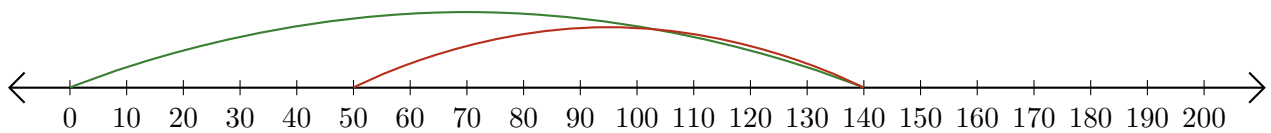
2.  $150 - 70 = \underline{80}$



3.  $120 - 10 = \underline{110}$



4.  $140 - 90 = \underline{50}$



5.  $200 - 190 = \underline{10}$

