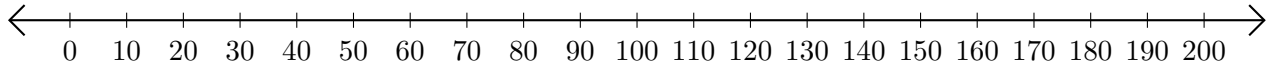


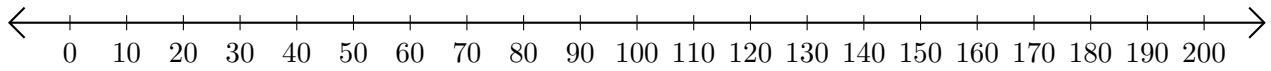
Restar en Rectas Numéricas (H)

Use las rectas numéricas para calcular cada diferencia.

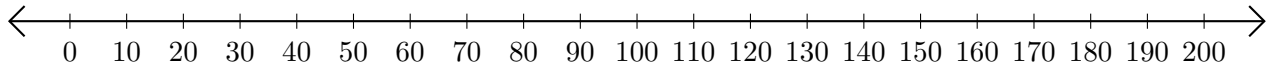
1. $200 - 180 = \underline{\quad}$



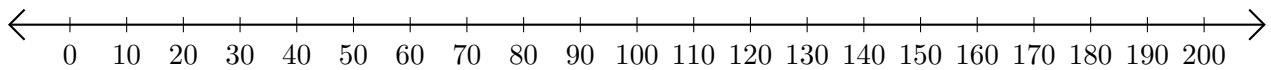
2. $110 - 40 = \underline{\quad}$



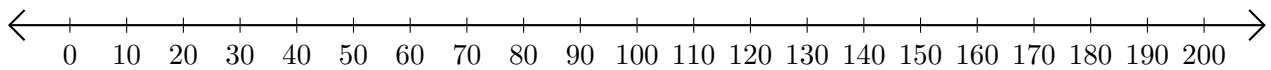
3. $160 - 90 = \underline{\quad}$



4. $190 - 60 = \underline{\quad}$



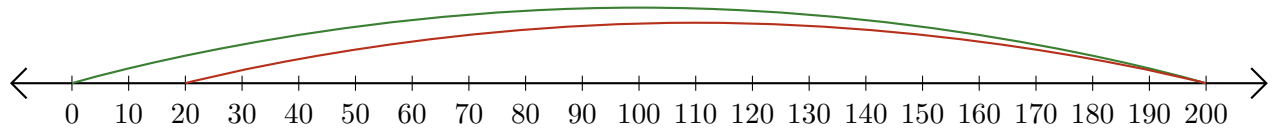
5. $90 - 30 = \underline{\quad}$



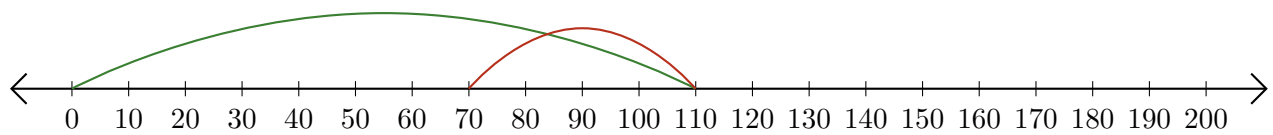
Restar en Rectas Numéricas (H) Respuestas

Use las rectas numéricas para calcular cada diferencia.

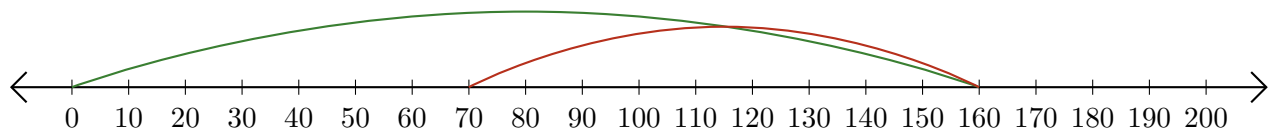
1. $200 - 180 = \underline{20}$



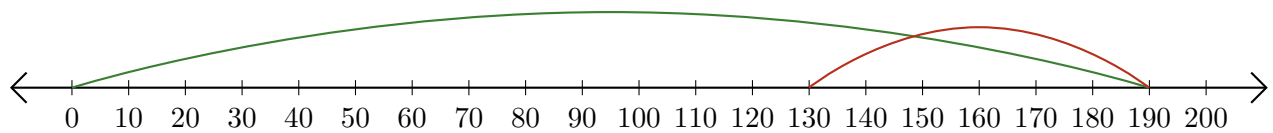
2. $110 - 40 = \underline{70}$



3. $160 - 90 = \underline{70}$



4. $190 - 60 = \underline{130}$



5. $90 - 30 = \underline{60}$

