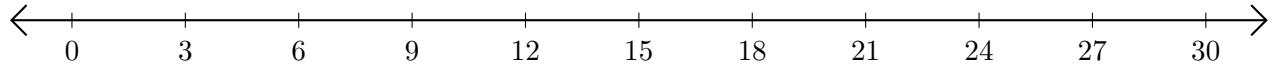


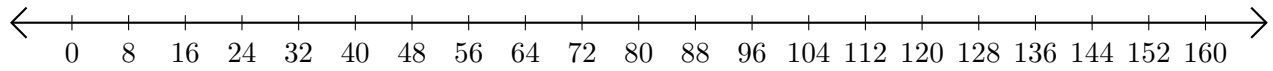
Restar en Rectas Numéricas (C)

Use las rectas numéricas para calcular cada diferencia.

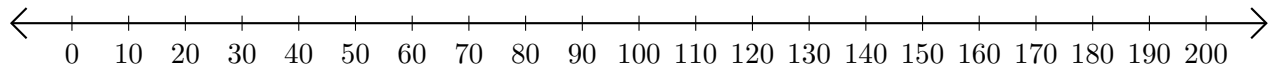
1. $21 - 15 = \underline{\quad}$



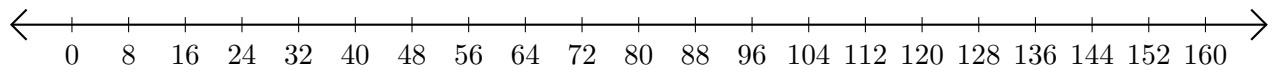
2. $120 - 40 = \underline{\quad}$



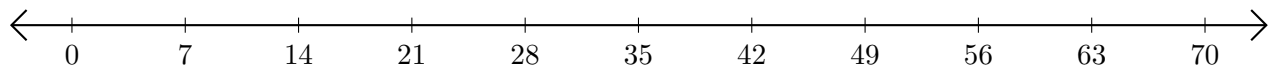
3. $200 - 190 = \underline{\quad}$



4. $88 - 48 = \underline{\quad}$



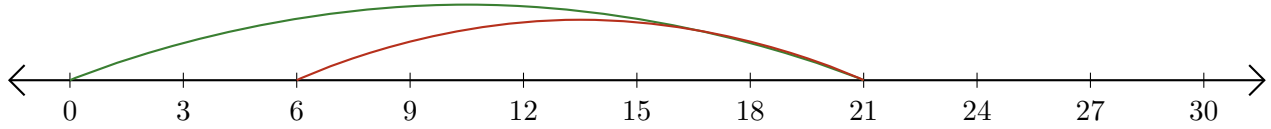
5. $35 - 14 = \underline{\quad}$



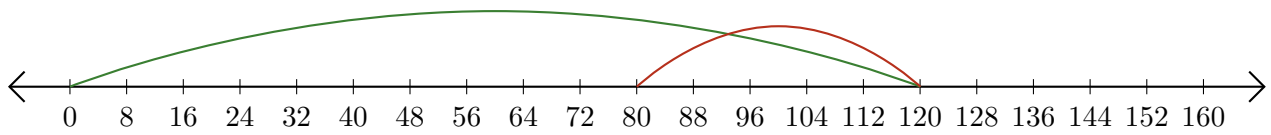
Restar en Rectas Numéricas (C) Respuestas

Use las rectas numéricas para calcular cada diferencia.

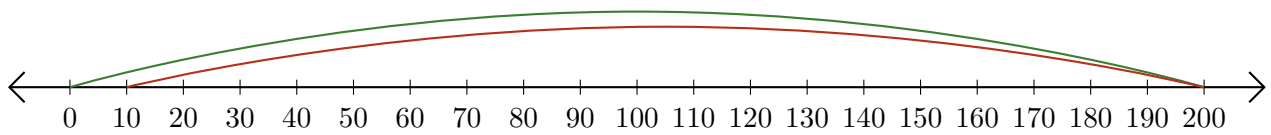
1. $21 - 15 = \underline{6}$



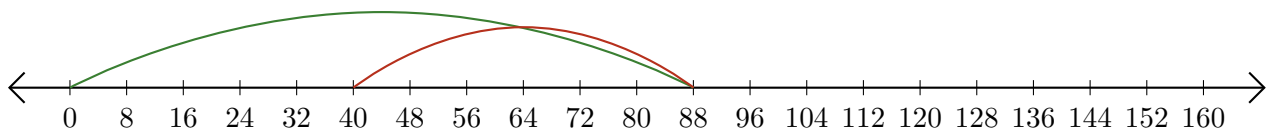
2. $120 - 40 = \underline{80}$



3. $200 - 190 = \underline{10}$



4. $88 - 48 = \underline{40}$



5. $35 - 14 = \underline{21}$

