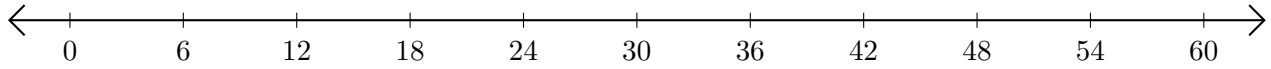


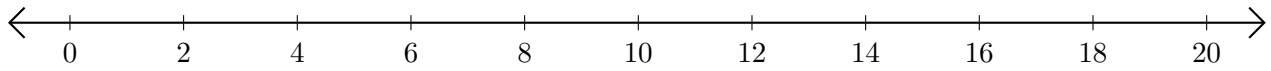
Restar en Rectas Numéricas (D)

Use las rectas numéricas para calcular cada diferencia.

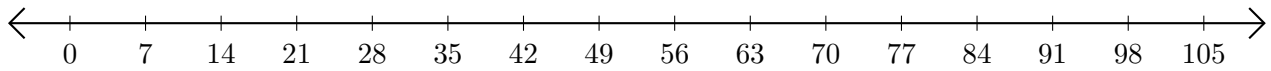
1. $42 - 30 = \underline{\quad}$



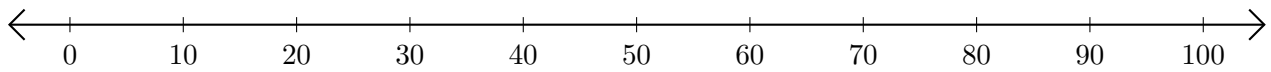
2. $20 - 18 = \underline{\quad}$



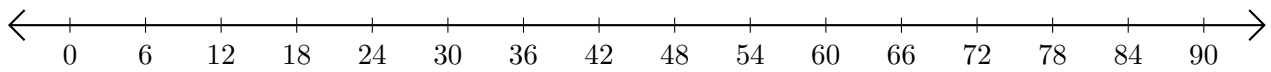
3. $105 - 98 = \underline{\quad}$



4. $90 - 80 = \underline{\quad}$



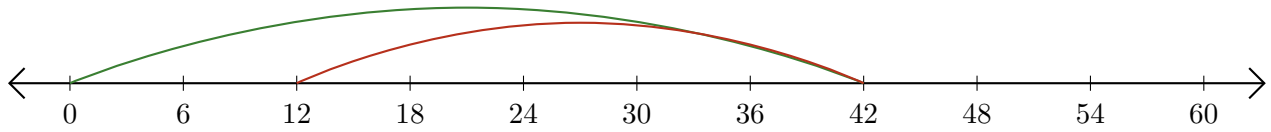
5. $78 - 42 = \underline{\quad}$



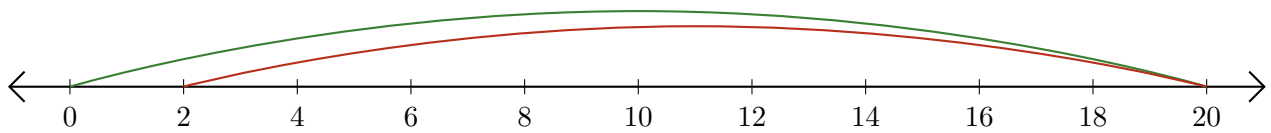
Restar en Rectas Numéricas (D) Respuestas

Use las rectas numéricas para calcular cada diferencia.

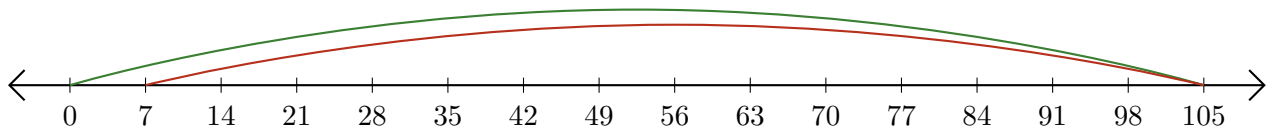
1. $42 - 30 = \underline{12}$



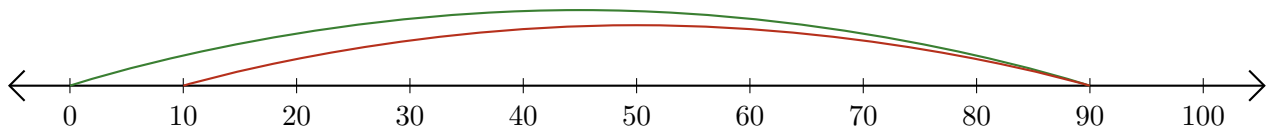
2. $20 - 18 = \underline{2}$



3. $105 - 98 = \underline{7}$



4. $90 - 80 = \underline{10}$



5. $78 - 42 = \underline{36}$

