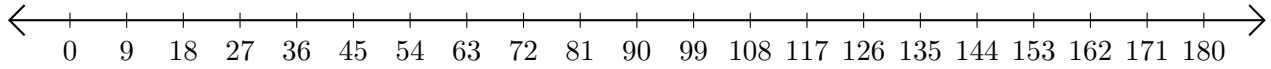


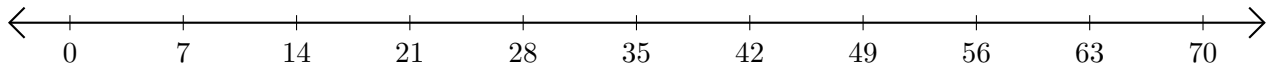
Restar en Rectas Numéricas (G)

Use las rectas numéricas para calcular cada diferencia.

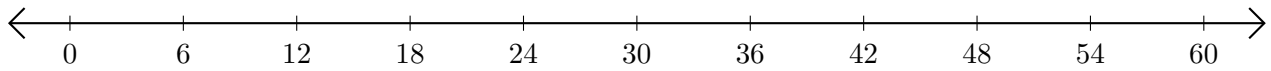
1. $153 - 144 = \underline{\quad}$



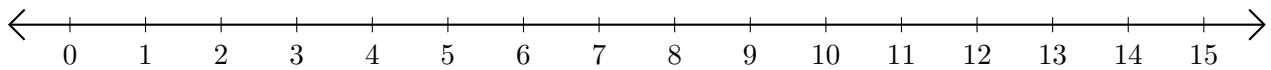
2. $56 - 35 = \underline{\quad}$



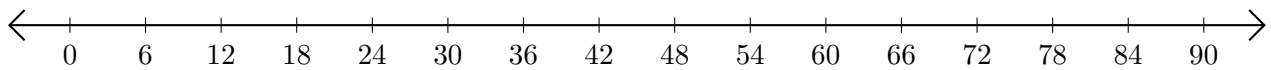
3. $42 - 36 = \underline{\quad}$



4. $13 - 6 = \underline{\quad}$



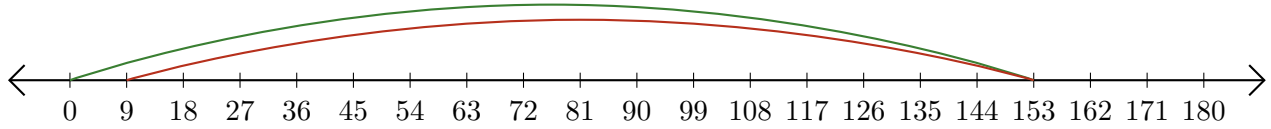
5. $90 - 84 = \underline{\quad}$



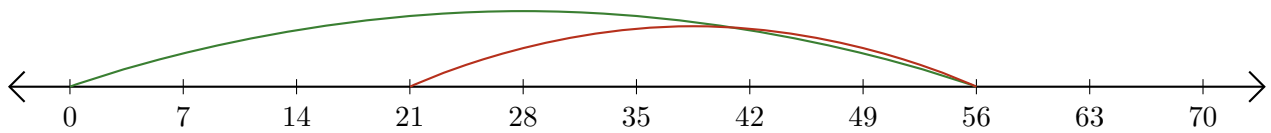
Restar en Rectas Numéricas (G) Respuestas

Use las rectas numéricas para calcular cada diferencia.

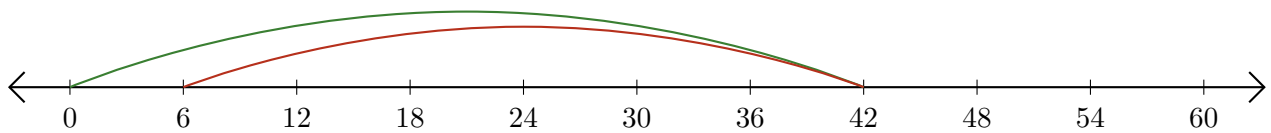
1. $153 - 144 = \underline{9}$



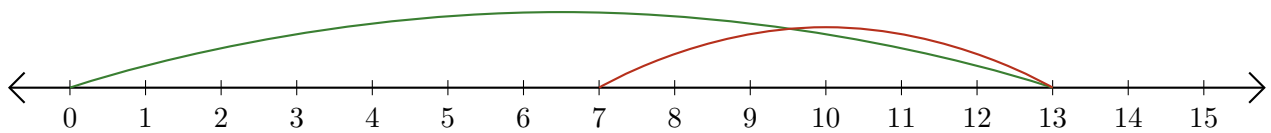
2. $56 - 35 = \underline{21}$



3. $42 - 36 = \underline{6}$



4. $13 - 6 = \underline{7}$



5. $90 - 84 = \underline{6}$

