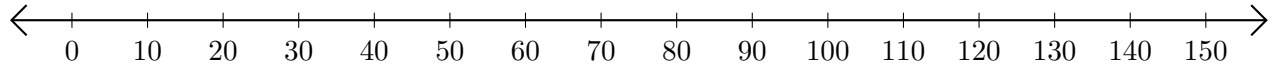


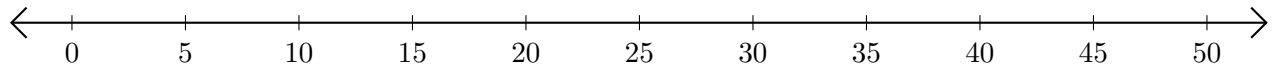
Restar en Rectas Numéricas (H)

Use las rectas numéricas para calcular cada diferencia.

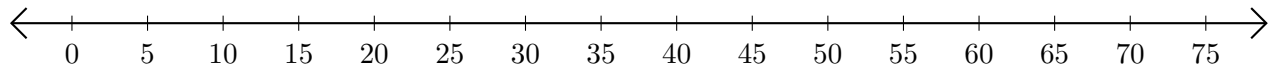
1. $110 - 100 = \underline{\quad}$



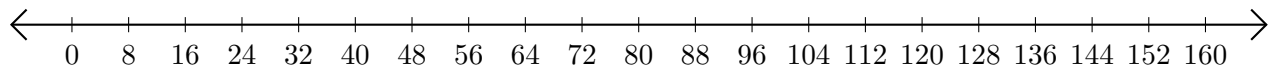
2. $30 - 15 = \underline{\quad}$



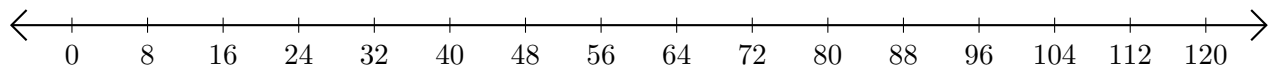
3. $30 - 15 = \underline{\quad}$



4. $104 - 24 = \underline{\quad}$



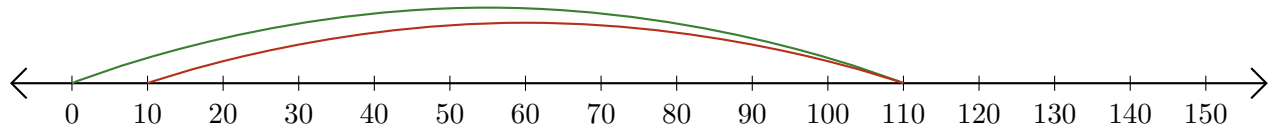
5. $120 - 104 = \underline{\quad}$



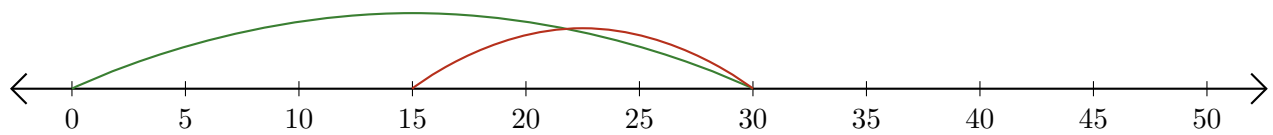
Restar en Rectas Numéricas (H) Respuestas

Use las rectas numéricas para calcular cada diferencia.


1. $110 - 100 = \underline{10}$



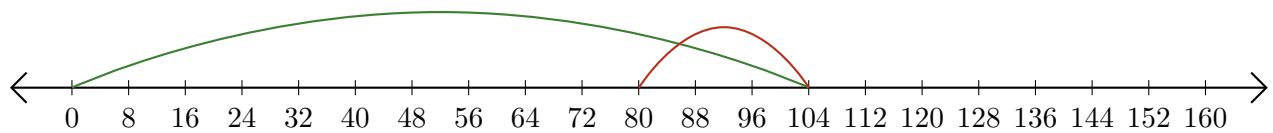
2. $30 - 15 = \underline{15}$



3. $30 - 15 = \underline{15}$



4. $104 - 24 = \underline{80}$



5. $120 - 104 = \underline{16}$

