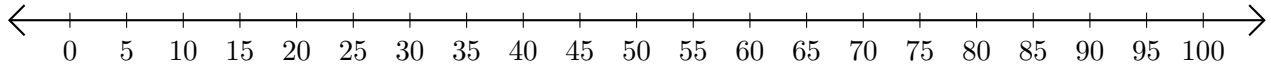


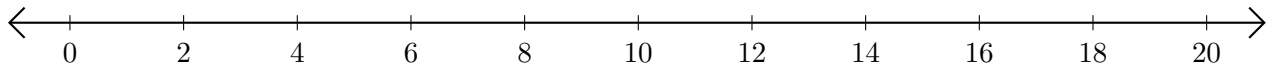
Restar en Rectas Numéricas (I)

Use las rectas numéricas para calcular cada diferencia.

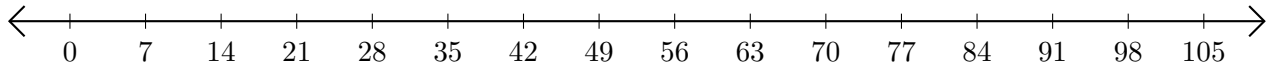
1. $75 - 65 = \underline{\quad}$



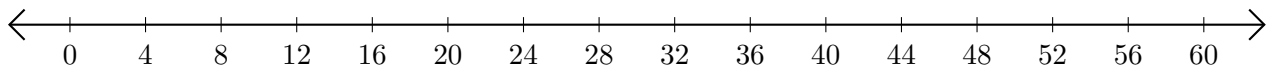
2. $20 - 16 = \underline{\quad}$



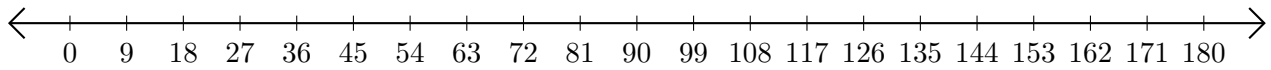
3. $49 - 35 = \underline{\quad}$



4. $56 - 32 = \underline{\quad}$



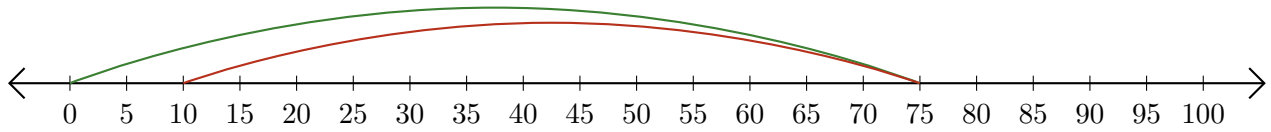
5. $180 - 171 = \underline{\quad}$



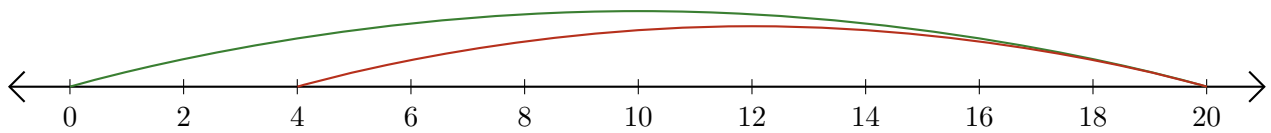
Restar en Rectas Numéricas (I) Respuestas

Use las rectas numéricas para calcular cada diferencia.

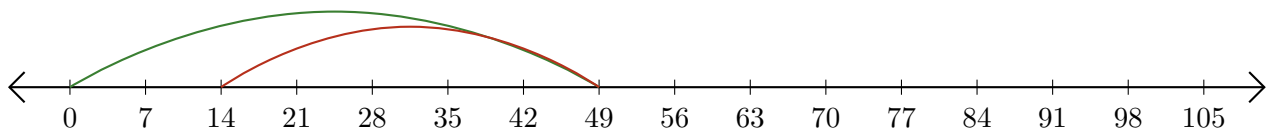
1. $75 - 65 = \underline{10}$



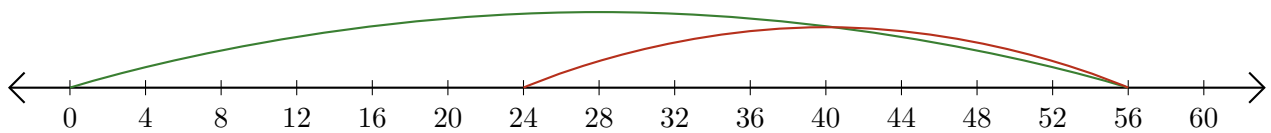
2. $20 - 16 = \underline{4}$



3. $49 - 35 = \underline{14}$



4. $56 - 32 = \underline{24}$



5. $180 - 171 = \underline{9}$

